


Chiffres Fondus Multiplication (D)

Nom: _____


Date: _____

Retrouve les chiffres qui ont fondu à la chaleur du soleil.


1.
$$\begin{array}{r} \square \\ \times 12 \\ \hline 96 \end{array}$$




2.
$$\begin{array}{r} \square \\ \times 6 \\ \hline 24 \end{array}$$




3.
$$\begin{array}{r} 8 \\ \times \square \\ \hline 56 \end{array}$$




4.
$$\begin{array}{r} 4 \\ \times 7 \\ \hline 2\square \end{array}$$




5.
$$\begin{array}{r} 8 \\ \times 9 \\ \hline 7\square \end{array}$$




6.
$$\begin{array}{r} 8 \\ \times \square \\ \hline 72 \end{array}$$




7.
$$\begin{array}{r} \square \\ \times 3 \\ \hline 24 \end{array}$$




8.
$$\begin{array}{r} \square \\ \times 8 \\ \hline 48 \end{array}$$




9.
$$\begin{array}{r} 5 \\ \times 5 \\ \hline 2\square \end{array}$$




10.
$$\begin{array}{r} 1\square \\ \times 5 \\ \hline 50 \end{array}$$




11.
$$\begin{array}{r} 5 \\ \times 11 \\ \hline 5\square \end{array}$$




12.
$$\begin{array}{r} \square \\ \times 6 \\ \hline 12 \end{array}$$




13.
$$\begin{array}{r} 2 \\ \times 6 \\ \hline 1\square \end{array}$$




14.
$$\begin{array}{r} \square \\ \times 2 \\ \hline 12 \end{array}$$




15.
$$\begin{array}{r} 12 \\ \times \square \\ \hline 60 \end{array}$$




16.
$$\begin{array}{r} 1\square \\ \times 6 \\ \hline 66 \end{array}$$




17.
$$\begin{array}{r} 2 \\ \times \square \\ \hline 18 \end{array}$$



18.
$$\begin{array}{r} 5 \\ \times 6 \\ \hline 3\square \end{array}$$



19.
$$\begin{array}{r} 7 \\ \times \square \\ \hline 56 \end{array}$$



20.
$$\begin{array}{r} 8 \\ \times \square \\ \hline 48 \end{array}$$

