


# Chiffres Fondus Multiplication (C)

Nom: \_\_\_\_\_


Date: \_\_\_\_\_

Retrouve les chiffres qui ont fondu à la chaleur du soleil.


1. 
$$\begin{array}{r} 5 \\ \times \square \\ \hline 15 \end{array}$$




2. 
$$\begin{array}{r} 12 \\ \times \square \\ \hline 48 \end{array}$$




3. 
$$\begin{array}{r} 5 \\ \times 5 \\ \hline 2\square \end{array}$$




4. 
$$\begin{array}{r} 10 \\ \times \square \\ \hline 20 \end{array}$$




5. 
$$\begin{array}{r} 5 \\ \times 11 \\ \hline 5\square \end{array}$$




6. 
$$\begin{array}{r} 3 \\ \times \square \\ \hline 12 \end{array}$$




7. 
$$\begin{array}{r} \square \\ \times 10 \\ \hline 70 \end{array}$$




8. 
$$\begin{array}{r} 7 \\ \times 11 \\ \hline 7\square \end{array}$$




9. 
$$\begin{array}{r} 6 \\ \times 9 \\ \hline 5\square \end{array}$$




10. 
$$\begin{array}{r} 4 \\ \times \square \\ \hline 16 \end{array}$$




11. 
$$\begin{array}{r} 1\square \\ \times 8 \\ \hline 88 \end{array}$$




12. 
$$\begin{array}{r} 10 \\ \times \square \\ \hline 20 \end{array}$$




13. 
$$\begin{array}{r} 8 \\ \times \square \\ \hline 72 \end{array}$$




14. 
$$\begin{array}{r} 4 \\ \times 9 \\ \hline 3\square \end{array}$$




15. 
$$\begin{array}{r} 9 \\ \times 4 \\ \hline 3\square \end{array}$$




16. 
$$\begin{array}{r} 4 \\ \times 2 \\ \hline \square \end{array}$$




17. 
$$\begin{array}{r} 6 \\ \times 12 \\ \hline 7\square \end{array}$$



18. 
$$\begin{array}{r} \square \\ \times 7 \\ \hline 49 \end{array}$$



19. 
$$\begin{array}{r} 7 \\ \times 5 \\ \hline 3\square \end{array}$$



20. 
$$\begin{array}{r} \square \\ \times 11 \\ \hline 99 \end{array}$$

