


Chiffres Fondus Multiplication et Division (J)

Nom: _____


Date: _____

Retrouve les chiffres qui ont fondu à la chaleur du soleil.


1.
$$\begin{array}{r} \square \\ 6 \overline{) 18} \end{array}$$




2.
$$\begin{array}{r} \square \\ \times 4 \\ \hline 36 \end{array}$$




3.
$$\begin{array}{r} 3 \\ \square \overline{) 27} \end{array}$$




4.
$$\begin{array}{r} 7 \\ 1 \square \overline{) 84} \end{array}$$




5.
$$\begin{array}{r} 1 \square \\ 11 \overline{) \square 10} \end{array}$$




6.
$$\begin{array}{r} \square \\ \times 10 \\ \hline 60 \end{array}$$




7.
$$\begin{array}{r} 3 \\ \times 1 \square \\ \hline 33 \end{array}$$




8.
$$\begin{array}{r} \square \\ \times 4 \\ \hline 32 \end{array}$$




9.
$$\begin{array}{r} 8 \\ \square \overline{) 40} \end{array}$$




10.
$$\begin{array}{r} 5 \\ 7 \overline{) 3 \square} \end{array}$$




11.
$$\begin{array}{r} 8 \\ \times \square \\ \hline 24 \end{array}$$




12.
$$\begin{array}{r} \square \\ \times 4 \\ \hline 36 \end{array}$$




13.
$$\begin{array}{r} 1 \square \\ 4 \overline{) 40} \end{array}$$




14.
$$\begin{array}{r} \square \\ \times 10 \\ \hline 80 \end{array}$$




15.
$$\begin{array}{r} 5 \\ 3 \overline{) 1 \square} \end{array}$$




16.
$$\begin{array}{r} 5 \\ \times 12 \\ \hline 6 \square \end{array}$$




17.
$$\begin{array}{r} 11 \\ \times \square \\ \hline 77 \end{array}$$



18.
$$\begin{array}{r} 12 \\ 12 \overline{) \square 4 \square} \end{array}$$



19.
$$\begin{array}{r} 1 \square \\ \times 8 \\ \hline 80 \end{array}$$



20.
$$\begin{array}{r} 5 \\ \square \overline{) 10} \end{array}$$

