


Chiffres Fondus Multiplication et Division (I)

Nom: _____


Date: _____

Retrouve les chiffres qui ont fondu à la chaleur du soleil.


1.
$$\begin{array}{r} 10 \\ \square \overline{) 50} \end{array}$$




2.
$$\begin{array}{r} 1 \square \\ 10 \overline{) \square 20} \end{array}$$




3.
$$\begin{array}{r} \square \\ 6 \overline{) 42} \end{array}$$




4.
$$\begin{array}{r} \square \\ \times 9 \\ \hline 81 \end{array}$$




5.
$$\begin{array}{r} \square \\ 3 \overline{) 9} \end{array}$$




6.
$$\begin{array}{r} \square \\ \times 2 \\ \hline 14 \end{array}$$




7.
$$\begin{array}{r} 1 \square \\ \times 4 \\ \hline 40 \end{array}$$




8.
$$\begin{array}{r} 9 \\ \times 5 \\ \hline 4 \square \end{array}$$




9.
$$\begin{array}{r} 5 \\ \times \square \\ \hline 40 \end{array}$$




10.
$$\begin{array}{r} \square \\ 2 \overline{) 6} \end{array}$$




11.
$$\begin{array}{r} 2 \\ 1 \square \overline{) 22} \end{array}$$




12.
$$\begin{array}{r} \square \\ 12 \overline{) 84} \end{array}$$




13.
$$\begin{array}{r} 4 \\ \times \square \\ \hline 12 \end{array}$$




14.
$$\begin{array}{r} 3 \\ 3 \overline{) \square} \end{array}$$




15.
$$\begin{array}{r} 1 \square \\ \times 10 \\ \hline \square 20 \end{array}$$




16.
$$\begin{array}{r} \square \\ 5 \overline{) 40} \end{array}$$




17.
$$\begin{array}{r} 8 \\ \times 10 \\ \hline 8 \square \end{array}$$



18.
$$\begin{array}{r} 10 \\ \times 4 \\ \hline 4 \square \end{array}$$



19.
$$\begin{array}{r} 8 \\ \times \square \\ \hline 48 \end{array}$$



20.
$$\begin{array}{r} \square \\ 10 \overline{) 50} \end{array}$$

