


Chiffres Fondus Multiplication et Division (H)

Nom: _____


Date: _____

Retrouve les chiffres qui ont fondu à la chaleur du soleil.


1.
$$\begin{array}{r} 8 \\ \times 2 \\ \hline 1 \square \end{array}$$




2.
$$\begin{array}{r} 4 \\ \times \square \\ \hline 36 \end{array}$$




3.
$$\begin{array}{r} 11 \\ \times 2 \\ \hline 2 \square \end{array}$$




4.
$$\begin{array}{r} 6 \\ \square \overline{) 30} \end{array}$$




5.
$$\begin{array}{r} 6 \\ \times 4 \\ \hline 2 \square \end{array}$$




6.
$$5 \overline{) 2 \square}$$




7.
$$1 \square \overline{) 96}$$




8.
$$2 \overline{) 1 \square}$$




9.
$$\begin{array}{r} 12 \\ \times 11 \\ \hline \square 3 \square \end{array}$$




10.
$$\begin{array}{r} 7 \\ \square \overline{) 63} \end{array}$$




11.
$$\begin{array}{r} \square \\ \times 7 \\ \hline 35 \end{array}$$




12.
$$\begin{array}{r} 5 \\ \times 12 \\ \hline 6 \square \end{array}$$




13.
$$8 \overline{) 24 \square}$$




14.
$$2 \overline{) 12 \square}$$




15.
$$\begin{array}{r} 4 \\ \times 2 \\ \hline \square \end{array}$$




16.
$$\begin{array}{r} 7 \\ \times 9 \\ \hline 6 \square \end{array}$$




17.
$$\begin{array}{r} 11 \\ \square \overline{) 99} \end{array}$$



18.
$$4 \overline{) 1 \square}$$



19.
$$\begin{array}{r} \square \\ \times 9 \\ \hline 45 \end{array}$$



20.
$$1 \square \overline{) 80}$$

