


# Chiffres Fondus Multiplication et Division (C)

Nom: \_\_\_\_\_


Date: \_\_\_\_\_

Retrouve les chiffres qui ont fondu à la chaleur du soleil.


1. 
$$\begin{array}{r} \square \\ 8 \overline{) 48} \end{array}$$




2. 
$$\begin{array}{r} 4 \\ \times \square \\ \hline 32 \end{array}$$




3. 
$$\begin{array}{r} 7 \\ \square \overline{) 49} \end{array}$$




4. 
$$\begin{array}{r} \square \\ 11 \overline{) 99} \end{array}$$




5. 
$$\begin{array}{r} 3 \\ \times 6 \\ \hline 1\square \end{array}$$




6. 
$$\begin{array}{r} 9 \\ \times 9 \\ \hline 8\square \end{array}$$




7. 
$$\begin{array}{r} 12 \\ \times \square \\ \hline 48 \end{array}$$




8. 
$$\begin{array}{r} 6 \\ \times 2 \\ \hline 1\square \end{array}$$




9. 
$$\begin{array}{r} \square \\ \times 8 \\ \hline 40 \end{array}$$




10. 
$$\begin{array}{r} 6 \\ 6 \overline{) 3\square} \end{array}$$




11. 
$$\begin{array}{r} 12 \\ \square \overline{) 24} \end{array}$$




12. 
$$\begin{array}{r} 7 \\ \times \square \\ \hline 49 \end{array}$$




13. 
$$\begin{array}{r} 9 \\ \square \overline{) 36} \end{array}$$




14. 
$$\begin{array}{r} \square \\ 4 \overline{) 36} \end{array}$$




15. 
$$\begin{array}{r} 2 \\ 2 \overline{) \square} \end{array}$$




16. 
$$\begin{array}{r} 1\square \\ 10 \overline{) \square 20} \end{array}$$




17. 
$$\begin{array}{r} \square \\ \times 10 \\ \hline 20 \end{array}$$



18. 
$$\begin{array}{r} 12 \\ \times 9 \\ \hline \square 0 \square \end{array}$$



19. 
$$\begin{array}{r} 6 \\ \times 2 \\ \hline 1\square \end{array}$$



20. 
$$\begin{array}{r} \square \\ 2 \overline{) 16} \end{array}$$

