


Chiffres Fondus Multiplication et Division (B)

Nom: _____


Date: _____

Retrouve les chiffres qui ont fondu à la chaleur du soleil.


1.
$$\begin{array}{r} 8 \\ 5 \overline{) 4 \square} \end{array}$$




2.
$$\begin{array}{r} \square \\ 7 \overline{) 4 2} \end{array}$$




3.
$$\begin{array}{r} \square \\ 8 \overline{) 2 4} \end{array}$$




4.
$$\begin{array}{r} \square \\ 7 \overline{) 2 8} \end{array}$$




5.
$$\begin{array}{r} 5 \\ 8 \overline{) 4 \square} \end{array}$$




6.
$$\begin{array}{r} 8 \\ \times 1 0 \\ \hline 8 \square \end{array}$$




7.
$$\begin{array}{r} 1 2 \\ \times 5 \\ \hline 6 \square \end{array}$$




8.
$$\begin{array}{r} 1 \square \\ 1 1 \overline{) \square 1 0} \end{array}$$




9.
$$\begin{array}{r} \square \\ \times 7 \\ \hline 2 1 \end{array}$$




10.
$$\begin{array}{r} 5 \\ 1 0 \overline{) 5 \square} \end{array}$$




11.
$$\begin{array}{r} 1 \square \\ \times 6 \\ \hline 6 6 \end{array}$$




12.
$$\begin{array}{r} 7 \\ \times 1 0 \\ \hline 7 \square \end{array}$$




13.
$$\begin{array}{r} 7 \\ \times 7 \\ \hline 4 \square \end{array}$$




14.
$$\begin{array}{r} 3 \\ 5 \overline{) 1 \square} \end{array}$$




15.
$$\begin{array}{r} \square \\ \times 6 \\ \hline 5 4 \end{array}$$




16.
$$\begin{array}{r} 2 \\ 8 \overline{) 1 \square} \end{array}$$




17.
$$\begin{array}{r} \square \\ \times 2 \\ \hline 1 0 \end{array}$$



18.
$$\begin{array}{r} 1 0 \\ 9 \overline{) 9 \square} \end{array}$$



19.
$$\begin{array}{r} 8 \\ \times 5 \\ \hline 4 \square \end{array}$$



20.
$$\begin{array}{r} \square \\ \times 8 \\ \hline 5 6 \end{array}$$

