


Chiffres Fondus Multiplication et Division (A)

Nom: _____


Date: _____

Retrouve les chiffres qui ont fondu à la chaleur du soleil.


1.
$$\begin{array}{r} 1 \square \\ 4 \overline{) 48} \end{array}$$




2.
$$\begin{array}{r} 6 \\ \square \overline{) 12} \end{array}$$




3.
$$\begin{array}{r} \square \\ \times 8 \\ \hline 72 \end{array}$$




4.
$$\begin{array}{r} 1 \square \\ \times 9 \\ \hline 99 \end{array}$$




5.
$$\begin{array}{r} 8 \\ \square \overline{) 48} \end{array}$$




6.
$$\begin{array}{r} 4 \\ \times 3 \\ \hline 1 \square \end{array}$$




7.
$$\begin{array}{r} 1 \square \\ 5 \overline{) 50} \end{array}$$




8.
$$\begin{array}{r} 8 \\ \square \overline{) 32} \end{array}$$




9.
$$\begin{array}{r} 9 \\ \square \overline{) 36} \end{array}$$




10.
$$\begin{array}{r} \square \\ 8 \overline{) 56} \end{array}$$




11.
$$\begin{array}{r} 6 \\ \square \overline{) 24} \end{array}$$




12.
$$\begin{array}{r} 5 \\ \times 1 \square \\ \hline 50 \end{array}$$




13.
$$\begin{array}{r} \square \\ 12 \overline{) 36} \end{array}$$




14.
$$\begin{array}{r} 12 \\ \times 11 \\ \hline \square 3 \square \end{array}$$




15.
$$\begin{array}{r} 12 \\ \square \overline{) 48} \end{array}$$




16.
$$\begin{array}{r} 9 \\ \times 1 \square \\ \hline \square 08 \end{array}$$




17.
$$\begin{array}{r} 3 \\ \times 11 \\ \hline 3 \square \end{array}$$




18.
$$\begin{array}{r} 3 \\ \times 3 \\ \hline \square \end{array}$$



19.
$$\begin{array}{r} 11 \\ \times 4 \\ \hline 4 \square \end{array}$$



20.
$$\begin{array}{r} 2 \\ \times 6 \\ \hline 1 \square \end{array}$$




Chiffres Fondus Multiplication et Division (A) Réponses

Nom: _____


Date: _____

Retrouve les chiffres qui ont fondu à la chaleur du soleil.


1.
$$\begin{array}{r} 1\ 2 \\ 4 \overline{) 48} \end{array}$$




2.
$$\begin{array}{r} 6 \\ 2 \overline{) 12} \end{array}$$




3.
$$\begin{array}{r} 9 \\ \times 8 \\ \hline 72 \end{array}$$




4.
$$\begin{array}{r} 1\ 1 \\ \times 9 \\ \hline 99 \end{array}$$




5.
$$\begin{array}{r} 8 \\ 6 \overline{) 48} \end{array}$$




6.
$$\begin{array}{r} 4 \\ \times 3 \\ \hline 12 \end{array}$$




7.
$$\begin{array}{r} 1\ 0 \\ 5 \overline{) 50} \end{array}$$




8.
$$\begin{array}{r} 8 \\ 4 \overline{) 32} \end{array}$$




9.
$$\begin{array}{r} 9 \\ 4 \overline{) 36} \end{array}$$




10.
$$\begin{array}{r} 7 \\ 8 \overline{) 56} \end{array}$$




11.
$$\begin{array}{r} 6 \\ 4 \overline{) 24} \end{array}$$




12.
$$\begin{array}{r} 5 \\ \times 1\ 0 \\ \hline 50 \end{array}$$




13.
$$\begin{array}{r} 3 \\ 12 \overline{) 36} \end{array}$$




14.
$$\begin{array}{r} 12 \\ \times 11 \\ \hline 132 \end{array}$$




15.
$$\begin{array}{r} 12 \\ 4 \overline{) 48} \end{array}$$




16.
$$\begin{array}{r} 9 \\ \times 1\ 2 \\ \hline 108 \end{array}$$




17.
$$\begin{array}{r} 3 \\ \times 11 \\ \hline 33 \end{array}$$



18.
$$\begin{array}{r} 3 \\ \times 3 \\ \hline 9 \end{array}$$



19.
$$\begin{array}{r} 11 \\ \times 4 \\ \hline 44 \end{array}$$



20.
$$\begin{array}{r} 2 \\ \times 6 \\ \hline 12 \end{array}$$

