


Chiffres Fondus Division (I)

Nom: _____


Date: _____

Retrouve les chiffres qui ont fondu à la chaleur du soleil.


1.
$$\begin{array}{r} \square \\ 3 \overline{) 21} \end{array}$$




2.
$$\begin{array}{r} \square \\ 2 \overline{) 16} \end{array}$$




3.
$$\begin{array}{r} 10 \\ \square \overline{) 40} \end{array}$$




4.
$$\begin{array}{r} 4 \\ 9 \overline{) 3\square} \end{array}$$




5.
$$\begin{array}{r} 4 \\ \square \overline{) 28} \end{array}$$




6.
$$\begin{array}{r} 2 \\ \square \overline{) 18} \end{array}$$




7.
$$\begin{array}{r} 9 \\ 1 \square \overline{) 99} \end{array}$$




8.
$$\begin{array}{r} 6 \\ \square \overline{) 30} \end{array}$$




9.
$$\begin{array}{r} 6 \\ 6 \overline{) 3\square} \end{array}$$




10.
$$\begin{array}{r} 8 \\ 11 \overline{) 8\square} \end{array}$$




11.
$$\begin{array}{r} 3 \\ 8 \overline{) 2\square} \end{array}$$




12.
$$\begin{array}{r} \square \\ 6 \overline{) 54} \end{array}$$




13.
$$\begin{array}{r} \square \\ 12 \overline{) 84} \end{array}$$




14.
$$\begin{array}{r} 8 \\ \square \overline{) 56} \end{array}$$




15.
$$\begin{array}{r} 8 \\ 3 \overline{) 2\square} \end{array}$$




16.
$$\begin{array}{r} 6 \\ 1 \square \overline{) 66} \end{array}$$




17.
$$\begin{array}{r} 1 \square \\ 10 \overline{) \square 10} \end{array}$$



18.
$$\begin{array}{r} 5 \\ 1 \square \overline{) 60} \end{array}$$



19.
$$\begin{array}{r} 1 \square \\ 11 \overline{) \square 32} \end{array}$$



20.
$$\begin{array}{r} 8 \\ 5 \overline{) 4\square} \end{array}$$

