


Chiffres Fondus Division (G)

Nom: _____


Date: _____

Retrouve les chiffres qui ont fondu à la chaleur du soleil.


1.
$$\begin{array}{r} 5 \\ 10 \overline{) 5 \square} \end{array}$$




2.
$$\begin{array}{r} 11 \\ 6 \overline{) 6 \square} \end{array}$$




3.
$$\begin{array}{r} \square \\ 9 \overline{) 36} \end{array}$$




4.
$$\begin{array}{r} 8 \\ \square \overline{) 24} \end{array}$$




5.
$$\begin{array}{r} 10 \\ 7 \overline{) 7 \square} \end{array}$$




6.
$$\begin{array}{r} 8 \\ 1 \square \overline{) 96} \end{array}$$




7.
$$\begin{array}{r} 10 \\ 4 \overline{) 4 \square} \end{array}$$




8.
$$\begin{array}{r} \square \\ 2 \overline{) 8} \end{array}$$




9.
$$\begin{array}{r} 9 \\ \square \overline{) 72} \end{array}$$




10.
$$\begin{array}{r} \square \\ 5 \overline{) 20} \end{array}$$




11.
$$\begin{array}{r} 4 \\ \square \overline{) 12} \end{array}$$




12.
$$\begin{array}{r} \square \\ 6 \overline{) 24} \end{array}$$




13.
$$\begin{array}{r} \square \\ 3 \overline{) 21} \end{array}$$




14.
$$\begin{array}{r} 1 \square \\ 3 \overline{) 33} \end{array}$$




15.
$$\begin{array}{r} 1 \square \\ 4 \overline{) 40} \end{array}$$




16.
$$\begin{array}{r} \square \\ 7 \overline{) 28} \end{array}$$




17.
$$\begin{array}{r} 6 \\ 9 \overline{) 5 \square} \end{array}$$



18.
$$\begin{array}{r} 12 \\ \square \overline{) 36} \end{array}$$



19.
$$\begin{array}{r} 1 \square \\ 4 \overline{) 48} \end{array}$$



20.
$$\begin{array}{r} 8 \\ \square \overline{) 16} \end{array}$$

