


# Chiffres Fondus Division (F)

Nom: \_\_\_\_\_


Date: \_\_\_\_\_

Retrouve les chiffres qui ont fondu à la chaleur du soleil.


1. 
$$\begin{array}{r} 12 \\ \square \overline{) 36} \end{array}$$




2. 
$$\begin{array}{r} \square \\ 3 \overline{) 24} \end{array}$$




3. 
$$\begin{array}{r} 4 \\ 5 \overline{) 2\square} \end{array}$$




4. 
$$\begin{array}{r} 4 \\ 11 \overline{) 4\square} \end{array}$$




5. 
$$\begin{array}{r} 1\square \\ 5 \overline{) 60} \end{array}$$




6. 
$$\begin{array}{r} 6 \\ \square \overline{) 30} \end{array}$$




7. 
$$\begin{array}{r} 10 \\ 1\square \overline{) \square 20} \end{array}$$




8. 
$$\begin{array}{r} \square \\ 5 \overline{) 15} \end{array}$$




9. 
$$\begin{array}{r} \square \\ 10 \overline{) 60} \end{array}$$




10. 
$$\begin{array}{r} 1\square \\ 11 \overline{) \square 32} \end{array}$$




11. 
$$\begin{array}{r} 5 \\ 2 \overline{) 1\square} \end{array}$$




12. 
$$\begin{array}{r} 5 \\ 8 \overline{) 4\square} \end{array}$$




13. 
$$\begin{array}{r} 2 \\ 1\square \overline{) 22} \end{array}$$




14. 
$$\begin{array}{r} 3 \\ 1\square \overline{) 33} \end{array}$$




15. 
$$\begin{array}{r} 2 \\ \square \overline{) 6} \end{array}$$




16. 
$$\begin{array}{r} \square \\ 2 \overline{) 16} \end{array}$$




17. 
$$\begin{array}{r} \square \\ 11 \overline{) 99} \end{array}$$



18. 
$$\begin{array}{r} 1\square \\ 8 \overline{) 96} \end{array}$$



19. 
$$\begin{array}{r} 10 \\ \square \overline{) 80} \end{array}$$



20. 
$$\begin{array}{r} 5 \\ 3 \overline{) 1\square} \end{array}$$

