


Chiffres Fondus Division (C)

Nom: _____


Date: _____

Retrouve les chiffres qui ont fondu à la chaleur du soleil.


1.
$$\begin{array}{r} 1 \square \\ 7 \overline{) 84} \end{array}$$




2.
$$\begin{array}{r} 6 \\ 11 \overline{) 6\square} \end{array}$$




3.
$$\begin{array}{r} 4 \\ 5 \overline{) 2\square} \end{array}$$




4.
$$\begin{array}{r} 8 \\ 4 \overline{) 3\square} \end{array}$$




5.
$$\begin{array}{r} 1 \square \\ 7 \overline{) 77} \end{array}$$




6.
$$\begin{array}{r} 12 \\ 7 \overline{) 8\square} \end{array}$$




7.
$$\begin{array}{r} 7 \\ \square \overline{) 56} \end{array}$$




8.
$$\begin{array}{r} 7 \\ 10 \overline{) 7\square} \end{array}$$




9.
$$\begin{array}{r} 2 \\ 8 \overline{) 1\square} \end{array}$$




10.
$$\begin{array}{r} \square \\ 9 \overline{) 27} \end{array}$$




11.
$$\begin{array}{r} 10 \\ 4 \overline{) 4\square} \end{array}$$




12.
$$\begin{array}{r} 8 \\ \square \overline{) 64} \end{array}$$




13.
$$\begin{array}{r} \square \\ 12 \overline{) 48} \end{array}$$




14.
$$\begin{array}{r} 10 \\ 9 \overline{) 9\square} \end{array}$$




15.
$$\begin{array}{r} 12 \\ \square \overline{) \square 08} \end{array}$$




16.
$$\begin{array}{r} \square \\ 5 \overline{) 25} \end{array}$$




17.
$$\begin{array}{r} 3 \\ 10 \overline{) 3\square} \end{array}$$




18.
$$\begin{array}{r} 6 \\ 10 \overline{) 6\square} \end{array}$$



19.
$$\begin{array}{r} \square \\ 9 \overline{) 36} \end{array}$$



20.
$$\begin{array}{r} \square \\ 8 \overline{) 40} \end{array}$$




Chiffres Fondus Division (C) Réponses

Nom: _____


Date: _____

Retrouve les chiffres qui ont fondu à la chaleur du soleil.


1.
$$\begin{array}{r} 1\ 2 \\ 7 \overline{) 84} \end{array}$$




2.
$$\begin{array}{r} 6 \\ 11 \overline{) 66} \end{array}$$




3.
$$\begin{array}{r} 4 \\ 5 \overline{) 20} \end{array}$$




4.
$$\begin{array}{r} 8 \\ 4 \overline{) 32} \end{array}$$




5.
$$\begin{array}{r} 1\ 1 \\ 7 \overline{) 77} \end{array}$$




6.
$$\begin{array}{r} 1\ 2 \\ 7 \overline{) 84} \end{array}$$




7.
$$\begin{array}{r} 7 \\ 8 \overline{) 56} \end{array}$$




8.
$$\begin{array}{r} 7 \\ 10 \overline{) 70} \end{array}$$




9.
$$\begin{array}{r} 2 \\ 8 \overline{) 16} \end{array}$$




10.
$$\begin{array}{r} 3 \\ 9 \overline{) 27} \end{array}$$




11.
$$\begin{array}{r} 1\ 0 \\ 4 \overline{) 40} \end{array}$$




12.
$$\begin{array}{r} 8 \\ 8 \overline{) 64} \end{array}$$




13.
$$\begin{array}{r} 4 \\ 12 \overline{) 48} \end{array}$$




14.
$$\begin{array}{r} 1\ 0 \\ 9 \overline{) 90} \end{array}$$




15.
$$\begin{array}{r} 1\ 2 \\ 9 \overline{) 108} \end{array}$$




16.
$$\begin{array}{r} 5 \\ 5 \overline{) 25} \end{array}$$




17.
$$\begin{array}{r} 3 \\ 10 \overline{) 30} \end{array}$$



18.
$$\begin{array}{r} 6 \\ 10 \overline{) 60} \end{array}$$



19.
$$\begin{array}{r} 4 \\ 9 \overline{) 36} \end{array}$$



20.
$$\begin{array}{r} 5 \\ 8 \overline{) 40} \end{array}$$

