


Chiffres Fondus Division (J)

Nom: _____


Date: _____

Retrouve les chiffres qui ont fondu à la chaleur du soleil.


1.
$$\begin{array}{r} 1 \square \\ 36 \overline{) \square 68} \end{array}$$




2.
$$\begin{array}{r} 30 \\ 77 \overline{) 2 \square 1 \square} \end{array}$$




3.
$$\begin{array}{r} 55 \\ 56 \overline{) 3 \square 8 \square} \end{array}$$




4.
$$\begin{array}{r} 64 \\ 5 \square \overline{) 3 \square 92} \end{array}$$




5.
$$\begin{array}{r} 27 \\ 8 \square \overline{) 2 \square 22} \end{array}$$




6.
$$\begin{array}{r} 7 \square \\ 44 \overline{) 3 \square 12} \end{array}$$




7.
$$\begin{array}{r} 3 \square \\ 79 \overline{) 2 \square 23} \end{array}$$




8.
$$\begin{array}{r} 87 \\ 49 \overline{) 4 \square 6 \square} \end{array}$$




9.
$$\begin{array}{r} 89 \\ 6 \square \overline{) 5 \square 63} \end{array}$$




10.
$$\begin{array}{r} 87 \\ 2 \square \overline{) 2 \square 62} \end{array}$$




11.
$$\begin{array}{r} 69 \\ 1 \square \overline{) 1 \square 11} \end{array}$$




12.
$$\begin{array}{r} 21 \\ 2 \square \overline{) \square 83} \end{array}$$




13.
$$\begin{array}{r} 25 \\ 24 \overline{) \square 0 \square} \end{array}$$




14.
$$\begin{array}{r} 8 \square \\ 95 \overline{) 7 \square 90} \end{array}$$




15.
$$\begin{array}{r} 81 \\ 44 \overline{) 3 \square 6 \square} \end{array}$$




16.
$$\begin{array}{r} 5 \square \\ 22 \overline{) 1 \square 54} \end{array}$$




17.
$$\begin{array}{r} 56 \\ 8 \square \overline{) 4 \square 36} \end{array}$$



18.
$$\begin{array}{r} 4 \square \\ 16 \overline{) \square 84} \end{array}$$



19.
$$\begin{array}{r} 4 \square \\ 37 \overline{) 1 \square 80} \end{array}$$



20.
$$\begin{array}{r} 98 \\ 76 \overline{) 7 \square 4 \square} \end{array}$$

