


Chiffres Fondus Division (I)

Nom: _____


Date: _____

Retrouve les chiffres qui ont fondu à la chaleur du soleil.


1.
$$\begin{array}{r} 35 \\ 4 \square \square \overline{) 1 \square 8 0} \end{array}$$




2.
$$\begin{array}{r} 4 \square \\ 11 \overline{) \square 0 6} \end{array}$$




3.
$$\begin{array}{r} 2 \square \\ 34 \overline{) \square 5 2} \end{array}$$




4.
$$\begin{array}{r} 82 \\ 6 \square \overline{) 5 \square 5 8} \end{array}$$




5.
$$\begin{array}{r} 14 \\ 25 \overline{) \square 5 \square} \end{array}$$




6.
$$\begin{array}{r} 21 \\ 49 \overline{) 1 \square 2 \square} \end{array}$$




7.
$$\begin{array}{r} 64 \\ 2 \square \overline{) 1 \square 7 2} \end{array}$$




8.
$$\begin{array}{r} 62 \\ 78 \overline{) 4 \square 3 \square} \end{array}$$




9.
$$\begin{array}{r} 53 \\ 10 \overline{) \square 3 \square} \end{array}$$




10.
$$\begin{array}{r} 58 \\ 87 \overline{) 5 \square 4 \square} \end{array}$$




11.
$$\begin{array}{r} 4 \square \\ 67 \overline{) 2 \square 8 1} \end{array}$$




12.
$$\begin{array}{r} 4 \square \\ 30 \overline{) 1 \square 5 0} \end{array}$$




13.
$$\begin{array}{r} 70 \\ 38 \overline{) 2 \square 6 \square} \end{array}$$




14.
$$\begin{array}{r} 36 \\ 5 \square \overline{) 1 \square 8 0} \end{array}$$




15.
$$\begin{array}{r} 52 \\ 68 \overline{) 3 \square 3 \square} \end{array}$$




16.
$$\begin{array}{r} 5 \square \\ 65 \overline{) 3 \square 1 0} \end{array}$$




17.
$$\begin{array}{r} 1 \square \\ 68 \overline{) 1 \square 9 2} \end{array}$$




18.
$$\begin{array}{r} 53 \\ 1 \square \overline{) \square 5 4} \end{array}$$



19.
$$\begin{array}{r} 8 \square \\ 12 \overline{) 1 \square 6 8} \end{array}$$



20.
$$\begin{array}{r} 5 \square \\ 40 \overline{) 2 \square 6 0} \end{array}$$




Chiffres Fondus Division (I) Réponses

Nom: _____


Date: _____

Retrouve les chiffres qui ont fondu à la chaleur du soleil.


1.
$$\begin{array}{r} 35 \\ 4 \overline{) 1680} \end{array}$$




2.
$$\begin{array}{r} 46 \\ 11 \overline{) 506} \end{array}$$




3.
$$\begin{array}{r} 28 \\ 34 \overline{) 952} \end{array}$$




4.
$$\begin{array}{r} 82 \\ 69 \overline{) 5658} \end{array}$$




5.
$$\begin{array}{r} 14 \\ 25 \overline{) 350} \end{array}$$




6.
$$\begin{array}{r} 21 \\ 49 \overline{) 1029} \end{array}$$




7.
$$\begin{array}{r} 64 \\ 23 \overline{) 1472} \end{array}$$




8.
$$\begin{array}{r} 62 \\ 78 \overline{) 4836} \end{array}$$




9.
$$\begin{array}{r} 53 \\ 10 \overline{) 530} \end{array}$$




10.
$$\begin{array}{r} 58 \\ 87 \overline{) 5046} \end{array}$$




11.
$$\begin{array}{r} 43 \\ 67 \overline{) 2881} \end{array}$$




12.
$$\begin{array}{r} 45 \\ 30 \overline{) 1350} \end{array}$$




13.
$$\begin{array}{r} 70 \\ 38 \overline{) 2660} \end{array}$$




14.
$$\begin{array}{r} 36 \\ 55 \overline{) 1980} \end{array}$$




15.
$$\begin{array}{r} 52 \\ 68 \overline{) 3536} \end{array}$$




16.
$$\begin{array}{r} 54 \\ 65 \overline{) 3510} \end{array}$$




17.
$$\begin{array}{r} 19 \\ 68 \overline{) 1292} \end{array}$$



18.
$$\begin{array}{r} 53 \\ 18 \overline{) 954} \end{array}$$



19.
$$\begin{array}{r} 89 \\ 12 \overline{) 1068} \end{array}$$



20.
$$\begin{array}{r} 54 \\ 40 \overline{) 2160} \end{array}$$

