


Chiffres Fondus Division (H)

Nom: _____


Date: _____

Retrouve les chiffres qui ont fondu à la chaleur du soleil.


1.
$$\begin{array}{r} 8 \square \\ 58 \overline{) 4 \square 14} \end{array}$$




2.
$$\begin{array}{r} 41 \\ 7 \square \overline{) 3 \square 16} \end{array}$$




3.
$$\begin{array}{r} 52 \\ 43 \overline{) 2 \square 3 \square} \end{array}$$




4.
$$\begin{array}{r} 10 \\ 4 \square \overline{) \square 60} \end{array}$$




5.
$$\begin{array}{r} 73 \\ 52 \overline{) 3 \square 9 \square} \end{array}$$




6.
$$\begin{array}{r} 4 \square \\ 51 \overline{) 2 \square 44} \end{array}$$




7.
$$\begin{array}{r} 18 \\ 92 \overline{) 1 \square 5 \square} \end{array}$$




8.
$$\begin{array}{r} 58 \\ 65 \overline{) 3 \square 7 \square} \end{array}$$




9.
$$\begin{array}{r} 86 \\ 1 \square \overline{) 1 \square 32} \end{array}$$




10.
$$\begin{array}{r} 72 \\ 9 \square \overline{) 6 \square 40} \end{array}$$




11.
$$\begin{array}{r} 5 \square \\ 89 \overline{) 5 \square 73} \end{array}$$




12.
$$\begin{array}{r} 77 \\ 6 \square \overline{) 4 \square 20} \end{array}$$




13.
$$\begin{array}{r} 72 \\ 6 \square \overline{) 4 \square 20} \end{array}$$




14.
$$\begin{array}{r} 5 \square \\ 29 \overline{) 1 \square 79} \end{array}$$




15.
$$\begin{array}{r} 5 \square \\ 24 \overline{) 1 \square 92} \end{array}$$




16.
$$\begin{array}{r} 2 \square \\ 43 \overline{) 1 \square 32} \end{array}$$




17.
$$\begin{array}{r} 33 \\ 30 \overline{) \square 9 \square} \end{array}$$



18.
$$\begin{array}{r} 8 \square \\ 93 \overline{) 7 \square 12} \end{array}$$



19.
$$\begin{array}{r} 1 \square \\ 39 \overline{) \square 24} \end{array}$$



20.
$$\begin{array}{r} 6 \square \\ 54 \overline{) 3 \square 18} \end{array}$$

