


Chiffres Fondus Division (G)

Nom: _____


Date: _____

Retrouve les chiffres qui ont fondu à la chaleur du soleil.


1.
$$\begin{array}{r} 82 \\ 5 \square \square \overline{) 4 \square 0 0} \end{array}$$




2.
$$\begin{array}{r} 27 \\ 9 \square \square \overline{) 2 \square 4 6} \end{array}$$




3.
$$\begin{array}{r} 15 \\ 8 \square \square \overline{) 1 \square 0 0} \end{array}$$




4.
$$\begin{array}{r} 19 \\ 37 \overline{) \square 0 \square} \end{array}$$




5.
$$\begin{array}{r} 8 \square \\ 75 \overline{) 6 \square 5 0} \end{array}$$




6.
$$\begin{array}{r} 50 \\ 8 \square \square \overline{) 4 \square 0 0} \end{array}$$




7.
$$\begin{array}{r} 9 \square \\ 36 \overline{) 3 \square 2 8} \end{array}$$




8.
$$\begin{array}{r} 49 \\ 50 \overline{) 2 \square 5 \square} \end{array}$$




9.
$$\begin{array}{r} 16 \\ 69 \overline{) 1 \square 0 \square} \end{array}$$




10.
$$\begin{array}{r} 9 \square \\ 77 \overline{) 7 \square 1 5} \end{array}$$




11.
$$\begin{array}{r} 6 \square \\ 44 \overline{) 2 \square 4 8} \end{array}$$




12.
$$\begin{array}{r} 52 \\ 6 \square \square \overline{) 3 \square 2 4} \end{array}$$




13.
$$\begin{array}{r} 11 \\ 42 \overline{) \square 6 \square} \end{array}$$




14.
$$\begin{array}{r} 26 \\ 1 \square \square \overline{) \square 1 6} \end{array}$$




15.
$$\begin{array}{r} 82 \\ 7 \square \square \overline{) 5 \square 8 6} \end{array}$$




16.
$$\begin{array}{r} 39 \\ 2 \square \square \overline{) \square 7 5} \end{array}$$




17.
$$\begin{array}{r} 13 \\ 73 \overline{) \square 4 \square} \end{array}$$




18.
$$\begin{array}{r} 40 \\ 49 \overline{) 1 \square 6 \square} \end{array}$$



19.
$$\begin{array}{r} 31 \\ 91 \overline{) 2 \square 2 \square} \end{array}$$



20.
$$\begin{array}{r} 87 \\ 80 \overline{) 6 \square 6 \square} \end{array}$$




Chiffres Fondus Division (G) Réponses

Nom: _____


Date: _____

Retrouve les chiffres qui ont fondu à la chaleur du soleil.


1.
$$\begin{array}{r} 82 \\ 50 \overline{) 4100} \end{array}$$




2.
$$\begin{array}{r} 27 \\ 98 \overline{) 2646} \end{array}$$




3.
$$\begin{array}{r} 15 \\ 80 \overline{) 1200} \end{array}$$




4.
$$\begin{array}{r} 19 \\ 37 \overline{) 703} \end{array}$$




5.
$$\begin{array}{r} 86 \\ 75 \overline{) 6450} \end{array}$$




6.
$$\begin{array}{r} 50 \\ 80 \overline{) 4000} \end{array}$$




7.
$$\begin{array}{r} 98 \\ 36 \overline{) 3528} \end{array}$$




8.
$$\begin{array}{r} 49 \\ 50 \overline{) 2450} \end{array}$$




9.
$$\begin{array}{r} 16 \\ 69 \overline{) 1104} \end{array}$$




10.
$$\begin{array}{r} 95 \\ 77 \overline{) 7315} \end{array}$$




11.
$$\begin{array}{r} 67 \\ 44 \overline{) 2948} \end{array}$$




12.
$$\begin{array}{r} 52 \\ 62 \overline{) 3224} \end{array}$$




13.
$$\begin{array}{r} 11 \\ 42 \overline{) 462} \end{array}$$




14.
$$\begin{array}{r} 26 \\ 16 \overline{) 416} \end{array}$$




15.
$$\begin{array}{r} 82 \\ 73 \overline{) 5986} \end{array}$$




16.
$$\begin{array}{r} 39 \\ 25 \overline{) 975} \end{array}$$




17.
$$\begin{array}{r} 13 \\ 73 \overline{) 949} \end{array}$$



18.
$$\begin{array}{r} 40 \\ 49 \overline{) 1960} \end{array}$$



19.
$$\begin{array}{r} 31 \\ 91 \overline{) 2821} \end{array}$$



20.
$$\begin{array}{r} 87 \\ 80 \overline{) 6960} \end{array}$$

