


Chiffres Fondus Division (C)

Nom: _____


Date: _____

Retrouve les chiffres qui ont fondu à la chaleur du soleil.


1.
$$\begin{array}{r} 3 \square \\ 16 \overline{) \square 24} \end{array}$$




2.
$$\begin{array}{r} 7 \square \\ 79 \overline{) 6 \square 62} \end{array}$$




3.
$$\begin{array}{r} 27 \\ 63 \overline{) 1 \square 0 \square} \end{array}$$




4.
$$\begin{array}{r} 4 \square \\ 98 \overline{) 4 \square 16} \end{array}$$




5.
$$\begin{array}{r} 31 \\ 46 \overline{) 1 \square 2 \square} \end{array}$$




6.
$$\begin{array}{r} 21 \\ 5 \square \overline{) 1 \square 13} \end{array}$$




7.
$$\begin{array}{r} 2 \square \\ 32 \overline{) \square 04} \end{array}$$




8.
$$\begin{array}{r} 87 \\ 8 \square \overline{) 6 \square 60} \end{array}$$




9.
$$\begin{array}{r} 71 \\ 11 \overline{) \square 8 \square} \end{array}$$




10.
$$\begin{array}{r} 40 \\ 50 \overline{) 2 \square 0 \square} \end{array}$$




11.
$$\begin{array}{r} 21 \\ 29 \overline{) \square 0 \square} \end{array}$$




12.
$$\begin{array}{r} 9 \square \\ 78 \overline{) 7 \square 20} \end{array}$$




13.
$$\begin{array}{r} 8 \square \\ 95 \overline{) 8 \square 55} \end{array}$$




14.
$$\begin{array}{r} 3 \square \\ 43 \overline{) 1 \square 77} \end{array}$$




15.
$$\begin{array}{r} 85 \\ 27 \overline{) 2 \square 9 \square} \end{array}$$




16.
$$\begin{array}{r} 89 \\ 3 \square \overline{) 2 \square 59} \end{array}$$




17.
$$\begin{array}{r} 84 \\ 78 \overline{) 6 \square 5 \square} \end{array}$$



18.
$$\begin{array}{r} 9 \square \\ 22 \overline{) 2 \square 34} \end{array}$$



19.
$$\begin{array}{r} 1 \square \\ 85 \overline{) 1 \square 60} \end{array}$$



20.
$$\begin{array}{r} 86 \\ 2 \square \overline{) 2 \square 22} \end{array}$$

