


Chiffres Fondus Addition et Soustraction (F)

Nom: _____


Date: _____

Retrouve les chiffres qui ont fondu à la chaleur du soleil.


1.
$$\begin{array}{r} \square 20 \\ + 93\square \\ \hline \square 1\square 9 \end{array}$$




2.
$$\begin{array}{r} 913 \\ + \square 02 \\ \hline \square 0\square\square \end{array}$$




3.
$$\begin{array}{r} 837 \\ + \square 6\square \\ \hline \square 7\square 1 \end{array}$$




4.
$$\begin{array}{r} \square 2\square \\ - 1\square 0 \\ \hline 79 \end{array}$$




5.
$$\begin{array}{r} \square\square\square 9 \\ - 566 \\ \hline 83\square \end{array}$$




6.
$$\begin{array}{r} \square\square 9 \\ + 68 \\ \hline 38\square \end{array}$$




7.
$$\begin{array}{r} \square\square\square \\ - 15 \\ \hline 499 \end{array}$$




8.
$$\begin{array}{r} 519 \\ + \square 75 \\ \hline \square 2\square\square \end{array}$$




9.
$$\begin{array}{r} \square 31 \\ - \square\square \\ \hline 86 \end{array}$$




10.
$$\begin{array}{r} \square 20\square \\ - 505 \\ \hline \square\square 9 \end{array}$$




11.
$$\begin{array}{r} \square\square 4 \\ - 81 \\ \hline 79\square \end{array}$$




12.
$$\begin{array}{r} \square 09 \\ + 7\square\square \\ \hline \square 394 \end{array}$$




13.
$$\begin{array}{r} 471 \\ + \square\square 7 \\ \hline \square 19\square \end{array}$$




14.
$$\begin{array}{r} 6\square 1 \\ - 8\square \\ \hline \square 17 \end{array}$$




15.
$$\begin{array}{r} 78\square \\ + 7\square 2 \\ \hline \square\square 68 \end{array}$$




16.
$$\begin{array}{r} \square\square\square\square \\ - 358 \\ \hline 715 \end{array}$$




17.
$$\begin{array}{r} \square 4 \\ + \square 49 \\ \hline 26\square \end{array}$$




18.
$$\begin{array}{r} \square 6\square \\ - 260 \\ \hline 7\square 8 \end{array}$$



19.
$$\begin{array}{r} 177 \\ + 41\square \\ \hline \square\square 9 \end{array}$$



20.
$$\begin{array}{r} 9\square\square \\ - 70 \\ \hline \square 72 \end{array}$$




Chiffres Fondus Addition et Soustraction (F) Réponses

Nom: _____


Date: _____

Retrouve les chiffres qui ont fondu à la chaleur du soleil.


1.
$$\begin{array}{r} 220 \\ + 939 \\ \hline 1159 \end{array}$$




2.
$$\begin{array}{r} 913 \\ + 102 \\ \hline 1015 \end{array}$$




3.
$$\begin{array}{r} 837 \\ + 864 \\ \hline 1701 \end{array}$$




4.
$$\begin{array}{r} 229 \\ - 150 \\ \hline 79 \end{array}$$




5.
$$\begin{array}{r} 1399 \\ - 566 \\ \hline 833 \end{array}$$




6.
$$\begin{array}{r} 319 \\ + 68 \\ \hline 387 \end{array}$$




7.
$$\begin{array}{r} 514 \\ - 15 \\ \hline 499 \end{array}$$




8.
$$\begin{array}{r} 519 \\ + 775 \\ \hline 1294 \end{array}$$




9.
$$\begin{array}{r} 131 \\ - 45 \\ \hline 86 \end{array}$$




10.
$$\begin{array}{r} 1204 \\ - 505 \\ \hline 699 \end{array}$$




11.
$$\begin{array}{r} 874 \\ - 81 \\ \hline 793 \end{array}$$




12.
$$\begin{array}{r} 609 \\ + 785 \\ \hline 1394 \end{array}$$




13.
$$\begin{array}{r} 471 \\ + 727 \\ \hline 1198 \end{array}$$




14.
$$\begin{array}{r} 601 \\ - 84 \\ \hline 517 \end{array}$$




15.
$$\begin{array}{r} 786 \\ + 782 \\ \hline 1568 \end{array}$$




16.
$$\begin{array}{r} 1073 \\ - 358 \\ \hline 715 \end{array}$$




17.
$$\begin{array}{r} 14 \\ + 249 \\ \hline 263 \end{array}$$



18.
$$\begin{array}{r} 968 \\ - 260 \\ \hline 708 \end{array}$$



19.
$$\begin{array}{r} 177 \\ + 412 \\ \hline 589 \end{array}$$



20.
$$\begin{array}{r} 942 \\ - 70 \\ \hline 872 \end{array}$$

