


Chiffres Fondus Addition et Soustraction (C)

Nom: _____


Date: _____

Retrouve les chiffres qui ont fondu à la chaleur du soleil.


1.
$$\begin{array}{r} 349 \\ + \quad \square\square6 \\ \hline 73\square \end{array}$$




2.
$$\begin{array}{r} \square02 \\ + 4\square\square \\ \hline 837 \end{array}$$




3.
$$\begin{array}{r} 66\square \\ + \quad \square5 \\ \hline \square03 \end{array}$$




4.
$$\begin{array}{r} \square382 \\ - 385 \\ \hline \square\square\square \end{array}$$




5.
$$\begin{array}{r} \square\square\square\square \\ - 769 \\ \hline 585 \end{array}$$




6.
$$\begin{array}{r} 934 \\ - \square09 \\ \hline 6\square\square \end{array}$$




7.
$$\begin{array}{r} 37\square \\ + \square\square8 \\ \hline 863 \end{array}$$




8.
$$\begin{array}{r} 3\square0 \\ + 60\square \\ \hline \square80 \end{array}$$




9.
$$\begin{array}{r} 674 \\ + 30\square \\ \hline \square\square2 \end{array}$$




10.
$$\begin{array}{r} \square\square0\square \\ - 9\square7 \\ \hline 488 \end{array}$$




11.
$$\begin{array}{r} 539 \\ - \square1\square \\ \hline \square9 \end{array}$$




12.
$$\begin{array}{r} \square\square\square \\ + 98 \\ \hline 382 \end{array}$$




13.
$$\begin{array}{r} \square57 \\ - \square\square \\ \hline 313 \end{array}$$




14.
$$\begin{array}{r} \square\square09 \\ - 88\square \\ \hline 1\square5 \end{array}$$




15.
$$\begin{array}{r} 92\square \\ + 2\square2 \\ \hline \square\square84 \end{array}$$




16.
$$\begin{array}{r} 776 \\ - 36\square \\ \hline \square\square1 \end{array}$$




17.
$$\begin{array}{r} \square\square7 \\ - 2\square \\ \hline 200 \end{array}$$




18.
$$\begin{array}{r} 509 \\ + \square\square7 \\ \hline \square\square30\square \end{array}$$



19.
$$\begin{array}{r} 353 \\ + \square17 \\ \hline 6\square\square \end{array}$$



20.
$$\begin{array}{r} 51\square \\ - \square2 \\ \hline \square72 \end{array}$$




Chiffres Fondus Addition et Soustraction (C) Réponses

Nom: _____


Date: _____

Retrouve les chiffres qui ont fondu à la chaleur du soleil.


1.
$$\begin{array}{r} 349 \\ + 386 \\ \hline 735 \end{array}$$




2.
$$\begin{array}{r} 402 \\ + 435 \\ \hline 837 \end{array}$$




3.
$$\begin{array}{r} 668 \\ + 35 \\ \hline 703 \end{array}$$




4.
$$\begin{array}{r} 1382 \\ - 385 \\ \hline 997 \end{array}$$




5.
$$\begin{array}{r} 1354 \\ - 769 \\ \hline 585 \end{array}$$




6.
$$\begin{array}{r} 934 \\ - 309 \\ \hline 625 \end{array}$$




7.
$$\begin{array}{r} 375 \\ + 488 \\ \hline 863 \end{array}$$




8.
$$\begin{array}{r} 380 \\ + 600 \\ \hline 980 \end{array}$$




9.
$$\begin{array}{r} 674 \\ + 308 \\ \hline 982 \end{array}$$




10.
$$\begin{array}{r} 1405 \\ - 917 \\ \hline 488 \end{array}$$




11.
$$\begin{array}{r} 539 \\ - 510 \\ \hline 29 \end{array}$$




12.
$$\begin{array}{r} 284 \\ + 98 \\ \hline 382 \end{array}$$




13.
$$\begin{array}{r} 357 \\ - 44 \\ \hline 313 \end{array}$$




14.
$$\begin{array}{r} 1009 \\ - 884 \\ \hline 125 \end{array}$$




15.
$$\begin{array}{r} 922 \\ + 262 \\ \hline 1184 \end{array}$$




16.
$$\begin{array}{r} 776 \\ - 365 \\ \hline 411 \end{array}$$




17.
$$\begin{array}{r} 227 \\ - 27 \\ \hline 200 \end{array}$$



18.
$$\begin{array}{r} 509 \\ + 797 \\ \hline 1306 \end{array}$$



19.
$$\begin{array}{r} 353 \\ + 317 \\ \hline 670 \end{array}$$



20.
$$\begin{array}{r} 514 \\ - 42 \\ \hline 472 \end{array}$$

