


Chiffres Fondus Addition et Soustraction (B)

Nom: _____


Date: _____

Retrouve les chiffres qui ont fondu à la chaleur du soleil.


1.
$$\begin{array}{r} 725 \\ + 10\boxed{} \\ \hline \boxed{}\boxed{}3 \end{array}$$




2.
$$\begin{array}{r} 7\boxed{}\boxed{} \\ + 595 \\ \hline \boxed{}\boxed{}90 \end{array}$$




3.
$$\begin{array}{r} \boxed{}36 \\ + 909 \\ \hline \boxed{}4\boxed{}\boxed{} \end{array}$$




4.
$$\begin{array}{r} 3\boxed{}\boxed{} \\ + \boxed{}90 \\ \hline \boxed{}322 \end{array}$$




5.
$$\begin{array}{r} \boxed{}6\boxed{} \\ - 4\boxed{}4 \\ \hline 554 \end{array}$$




6.
$$\begin{array}{r} 30 \\ + 35\boxed{} \\ \hline \boxed{}\boxed{}6 \end{array}$$




7.
$$\begin{array}{r} \boxed{}\boxed{}\boxed{} \\ - 34 \\ \hline 99 \end{array}$$




8.
$$\begin{array}{r} 605 \\ + 18\boxed{} \\ \hline \boxed{}\boxed{}4 \end{array}$$




9.
$$\begin{array}{r} \boxed{}41 \\ - 6\boxed{} \\ \hline \boxed{}0 \end{array}$$




10.
$$\begin{array}{r} \boxed{}56\boxed{} \\ - \boxed{}\boxed{}5 \\ \hline 907 \end{array}$$




11.
$$\begin{array}{r} \boxed{}113 \\ - \boxed{}67 \\ \hline 2\boxed{}\boxed{} \end{array}$$




12.
$$\begin{array}{r} \boxed{}005 \\ - 411 \\ \hline \boxed{}\boxed{}\boxed{} \end{array}$$




13.
$$\begin{array}{r} \boxed{}54 \\ + 713 \\ \hline \boxed{}2\boxed{}\boxed{} \end{array}$$




14.
$$\begin{array}{r} \boxed{}\boxed{}11 \\ - 6\boxed{}\boxed{} \\ \hline 764 \end{array}$$




15.
$$\begin{array}{r} 7\boxed{}\boxed{} \\ - \boxed{}85 \\ \hline 169 \end{array}$$




16.
$$\begin{array}{r} \boxed{}587 \\ - 6\boxed{}\boxed{} \\ \hline \boxed{}80 \end{array}$$




17.
$$\begin{array}{r} 5\boxed{}4 \\ + \boxed{}4\boxed{} \\ \hline \boxed{}194 \end{array}$$



18.
$$\begin{array}{r} \boxed{}\boxed{}6 \\ + 9\boxed{} \\ \hline \boxed{}094 \end{array}$$



19.
$$\begin{array}{r} \boxed{}8\boxed{} \\ + 151 \\ \hline \boxed{}1\boxed{}2 \end{array}$$



20.
$$\begin{array}{r} \boxed{}8\boxed{} \\ - 379 \\ \hline 2\boxed{}6 \end{array}$$

