


Chiffres Fondus Addition et Soustraction (J)

Nom: _____


Date: _____

Retrouve les chiffres qui ont fondu à la chaleur du soleil.


1.
$$\begin{array}{r} \square\square\square\square \\ + 4495 \\ \hline 8713 \end{array}$$




2.
$$\begin{array}{r} \square 2007 \\ - \square\square\square 0 \\ \hline 884\square \end{array}$$




3.
$$\begin{array}{r} \square\square\square 1 \\ - 123\square \\ \hline 3236 \end{array}$$




4.
$$\begin{array}{r} \square 0\square\square \\ + 3\square 45 \\ \hline 9078 \end{array}$$




5.
$$\begin{array}{r} \square 35\square\square \\ - \square 115 \\ \hline 8\square 75 \end{array}$$




6.
$$\begin{array}{r} 59\square 6 \\ + \square\square 13 \\ \hline 780\square \end{array}$$




7.
$$\begin{array}{r} 367\square \\ + 56\square 6 \\ \hline \square\square 20 \end{array}$$




8.
$$\begin{array}{r} 1971 \\ + 4716 \\ \hline \square\square\square\square \end{array}$$




9.
$$\begin{array}{r} \square 18\square\square \\ - \square 980 \\ \hline 3\square 26 \end{array}$$




10.
$$\begin{array}{r} \square 8\square 88 \\ - \square 03\square \\ \hline 93\square 8 \end{array}$$




11.
$$\begin{array}{r} \square 14\square \\ + 3\square 65 \\ \hline 43\square 1 \end{array}$$




12.
$$\begin{array}{r} 83\square 5 \\ + \square\square 12 \\ \hline \square\square 065\square \end{array}$$




13.
$$\begin{array}{r} \square 71\square\square \\ - \square 461 \\ \hline 7\square 04 \end{array}$$




14.
$$\begin{array}{r} 9929 \\ + \square\square 47 \\ \hline \square\square 45\square\square \end{array}$$




15.
$$\begin{array}{r} 7\square 87 \\ + 43\square 4 \\ \hline \square\square 06\square \end{array}$$




16.
$$\begin{array}{r} \square 1\square 0 \\ - 4713 \\ \hline 4\square 9\square \end{array}$$




17.
$$\begin{array}{r} \square 2294 \\ - 7\square 2\square \\ \hline \square 8\square 4 \end{array}$$



18.
$$\begin{array}{r} 9916 \\ - 12\square\square \\ \hline \square\square 68 \end{array}$$



19.
$$\begin{array}{r} 98\square 0 \\ - \square\square 14 \\ \hline 168\square \end{array}$$



20.
$$\begin{array}{r} 6\square 06 \\ + \square 88\square \\ \hline \square\square 00\square 5 \end{array}$$

