


Chiffres Fondus Addition et Soustraction (I)

Nom: _____


Date: _____

Retrouve les chiffres qui ont fondu à la chaleur du soleil.


1.
$$\begin{array}{r} \square\square 0 7 \\ + 1 2 1 1 \\ \hline 9 7 \square\square \end{array}$$




2.
$$\begin{array}{r} \square 8 2 \square 8 \\ - 8 9 3 \square \\ \hline \square\square 3 4 \end{array}$$




3.
$$\begin{array}{r} 2 5 2 0 \\ + 1 1 6 \square \\ \hline \square\square\square 5 \end{array}$$




4.
$$\begin{array}{r} 4 \square 4 8 \\ + 7 3 \square 7 \\ \hline \square\square\square 2 3 \square \end{array}$$




5.
$$\begin{array}{r} 8 \square 0 3 \\ - \square 7 \square 1 \\ \hline 5 6 5 \square \end{array}$$




6.
$$\begin{array}{r} 7 7 5 3 \\ + 5 9 4 4 \\ \hline \square\square\square\square\square \end{array}$$




7.
$$\begin{array}{r} 4 0 \square\square \\ + 9 5 1 0 \\ \hline \square\square\square 6 1 \end{array}$$




8.
$$\begin{array}{r} \square 0 5 \square 4 \\ - 3 2 9 \square \\ \hline \square\square 7 4 \end{array}$$




9.
$$\begin{array}{r} \square 8 3 \square \\ + 4 0 7 4 \\ \hline 8 \square\square 8 \end{array}$$




10.
$$\begin{array}{r} \square 0 5 9 \\ + 7 \square\square 7 \\ \hline 9 2 8 \square \end{array}$$




11.
$$\begin{array}{r} \square 1 0 \square 2 \\ - 8 \square 6 \square \\ \hline \square 1 2 3 \end{array}$$




12.
$$\begin{array}{r} 5 7 2 1 \\ + \square\square\square 7 \\ \hline \square\square 3 6 2 \square \end{array}$$




13.
$$\begin{array}{r} \square\square\square 3 1 \\ - 8 1 \square 5 \\ \hline 1 9 9 \square \end{array}$$




14.
$$\begin{array}{r} \square 8 \square 3 \\ + 6 \square 1 1 \\ \hline \square 3 6 8 \square \end{array}$$




15.
$$\begin{array}{r} \square 2 \square\square 5 \\ - \square 8 8 \square \\ \hline 5 1 5 0 \end{array}$$




16.
$$\begin{array}{r} \square 0 \square 1 \\ - 1 \square 5 \square \\ \hline 7 9 8 7 \end{array}$$




17.
$$\begin{array}{r} \square 2 3 4 3 \\ - 9 0 4 1 \\ \hline \square\square\square\square \end{array}$$




18.
$$\begin{array}{r} \square 5 9 9 1 \\ - 8 \square\square\square \\ \hline \square 0 9 0 \end{array}$$



19.
$$\begin{array}{r} 7 0 1 3 \\ + 8 2 4 \square \\ \hline \square\square\square\square 4 \end{array}$$



20.
$$\begin{array}{r} \square 9 2 9 \\ - 3 1 \square 9 \\ \hline 2 \square 9 \square \end{array}$$




Chiffres Fondus Addition et Soustraction (I) Réponses

Nom: _____


Date: _____

Retrouve les chiffres qui ont fondu à la chaleur du soleil.


1.
$$\begin{array}{r} 8507 \\ + 1211 \\ \hline 9718 \end{array}$$




2.
$$\begin{array}{r} 18268 \\ - 8934 \\ \hline 9334 \end{array}$$




3.
$$\begin{array}{r} 2520 \\ + 1165 \\ \hline 3685 \end{array}$$




4.
$$\begin{array}{r} 4848 \\ + 7387 \\ \hline 12235 \end{array}$$




5.
$$\begin{array}{r} 8403 \\ - 2751 \\ \hline 5652 \end{array}$$




6.
$$\begin{array}{r} 7753 \\ + 5944 \\ \hline 13697 \end{array}$$




7.
$$\begin{array}{r} 4051 \\ + 9510 \\ \hline 13561 \end{array}$$




8.
$$\begin{array}{r} 10564 \\ - 3290 \\ \hline 7274 \end{array}$$




9.
$$\begin{array}{r} 4834 \\ + 4074 \\ \hline 8908 \end{array}$$




10.
$$\begin{array}{r} 2059 \\ + 7227 \\ \hline 9286 \end{array}$$




11.
$$\begin{array}{r} 11092 \\ - 8969 \\ \hline 2123 \end{array}$$




12.
$$\begin{array}{r} 5721 \\ + 7907 \\ \hline 13628 \end{array}$$




13.
$$\begin{array}{r} 10131 \\ - 8135 \\ \hline 1996 \end{array}$$




14.
$$\begin{array}{r} 6873 \\ + 6811 \\ \hline 13684 \end{array}$$




15.
$$\begin{array}{r} 12035 \\ - 6885 \\ \hline 5150 \end{array}$$




16.
$$\begin{array}{r} 9041 \\ - 1054 \\ \hline 7987 \end{array}$$




17.
$$\begin{array}{r} 12343 \\ - 9041 \\ \hline 3302 \end{array}$$



18.
$$\begin{array}{r} 15991 \\ - 8901 \\ \hline 7090 \end{array}$$



19.
$$\begin{array}{r} 7013 \\ + 8241 \\ \hline 15254 \end{array}$$



20.
$$\begin{array}{r} 5929 \\ - 3139 \\ \hline 2790 \end{array}$$

