


Chiffres Fondus Addition et Soustraction (F)

Nom: _____


Date: _____

Retrouve les chiffres qui ont fondu à la chaleur du soleil.


1.
$$\begin{array}{r} \square\square\square 1 \square \\ - 1875 \\ \hline 99\square 9 \end{array}$$




2.
$$\begin{array}{r} \square\square\square 7 \\ - 572\square \\ \hline 3992 \end{array}$$




3.
$$\begin{array}{r} \square\square 20\square \\ - 9906 \\ \hline 5\square\square 4 \end{array}$$




4.
$$\begin{array}{r} \square 30\square \\ + 2\square 86 \\ \hline 33\square 5 \end{array}$$




5.
$$\begin{array}{r} 8\square 73 \\ + 3464 \\ \hline \square\square\square 2\square\square \end{array}$$




6.
$$\begin{array}{r} 9\square 9\square \\ + 99\square 3 \\ \hline \square\square\square 671 \end{array}$$




7.
$$\begin{array}{r} \square 8\square\square \\ + 3\square 23 \\ \hline \square\square 0044 \end{array}$$




8.
$$\begin{array}{r} 7999 \\ + 591\square \\ \hline \square\square\square\square\square 0 \end{array}$$




9.
$$\begin{array}{r} 9\square\square 7 \\ + 397\square \\ \hline \square\square\square 767 \end{array}$$




10.
$$\begin{array}{r} \square\square 3\square \\ - 3720 \\ \hline 43\square 8 \end{array}$$




11.
$$\begin{array}{r} 2770 \\ + 35\square\square \\ \hline \square\square\square 17 \end{array}$$




12.
$$\begin{array}{r} \square 6880 \\ - 8\square 39 \\ \hline \square\square 2\square\square \end{array}$$




13.
$$\begin{array}{r} \square 59\square\square \\ - \square\square 91 \\ \hline 8435 \end{array}$$




14.
$$\begin{array}{r} 80\square 2 \\ + 1\square 09 \\ \hline \square\square 38\square \end{array}$$




15.
$$\begin{array}{r} \square 7018 \\ - \square 2\square 8 \\ \hline 8\square 7\square \end{array}$$




16.
$$\begin{array}{r} 3\square\square 5 \\ + 3367 \\ \hline \square\square 05\square \end{array}$$




17.
$$\begin{array}{r} 9075 \\ - \square 0\square 4 \\ \hline 6\square 5\square \end{array}$$




18.
$$\begin{array}{r} \square 70\square 2 \\ - 7983 \\ \hline \square\square\square 2\square \end{array}$$



19.
$$\begin{array}{r} \square\square\square\square 7 \\ - 4239 \\ \hline 759\square \end{array}$$



20.
$$\begin{array}{r} \square 45\square \\ + 58\square 7 \\ \hline \square\square 5\square 94 \end{array}$$




Chiffres Fondus Addition et Soustraction (F) Réponses

Nom: _____


Date: _____

Retrouve les chiffres qui ont fondu à la chaleur du soleil.


1.
$$\begin{array}{r} 11814 \\ - 1875 \\ \hline 9939 \end{array}$$




2.
$$\begin{array}{r} 9717 \\ - 5725 \\ \hline 3992 \end{array}$$




3.
$$\begin{array}{r} 15200 \\ - 9906 \\ \hline 5294 \end{array}$$




4.
$$\begin{array}{r} 1309 \\ + 2086 \\ \hline 3395 \end{array}$$




5.
$$\begin{array}{r} 8773 \\ + 3464 \\ \hline 12237 \end{array}$$




6.
$$\begin{array}{r} 9698 \\ + 9973 \\ \hline 19671 \end{array}$$




7.
$$\begin{array}{r} 6821 \\ + 3223 \\ \hline 10044 \end{array}$$




8.
$$\begin{array}{r} 7999 \\ + 5911 \\ \hline 13910 \end{array}$$




9.
$$\begin{array}{r} 9797 \\ + 3970 \\ \hline 13767 \end{array}$$




10.
$$\begin{array}{r} 8038 \\ - 3720 \\ \hline 4318 \end{array}$$




11.
$$\begin{array}{r} 2770 \\ + 3547 \\ \hline 6317 \end{array}$$




12.
$$\begin{array}{r} 16880 \\ - 8639 \\ \hline 8241 \end{array}$$




13.
$$\begin{array}{r} 15926 \\ - 7491 \\ \hline 8435 \end{array}$$




14.
$$\begin{array}{r} 8072 \\ + 1309 \\ \hline 9381 \end{array}$$




15.
$$\begin{array}{r} 17018 \\ - 8248 \\ \hline 8770 \end{array}$$




16.
$$\begin{array}{r} 3685 \\ + 3367 \\ \hline 7052 \end{array}$$




17.
$$\begin{array}{r} 9075 \\ - 3024 \\ \hline 6051 \end{array}$$



18.
$$\begin{array}{r} 17012 \\ - 7983 \\ \hline 9029 \end{array}$$



19.
$$\begin{array}{r} 11837 \\ - 4239 \\ \hline 7598 \end{array}$$



20.
$$\begin{array}{r} 9457 \\ + 5837 \\ \hline 15294 \end{array}$$

