


# Chiffres Fondus Addition (I)

Nom: \_\_\_\_\_


Date: \_\_\_\_\_

Retrouve les chiffres qui ont fondu à la chaleur du soleil.


1. 
$$\begin{array}{r} \square\square\square \\ + 564 \\ \hline \square305 \end{array}$$




2. 
$$\begin{array}{r} \square16 \\ + 2\square\square \\ \hline 549 \end{array}$$




3. 
$$\begin{array}{r} 93\square \\ + 7\square0 \\ \hline \square\square65 \end{array}$$




4. 
$$\begin{array}{r} \square24 \\ + 6\square6 \\ \hline \square50\square \end{array}$$




5. 
$$\begin{array}{r} \square\square\square \\ + 607 \\ \hline \square004 \end{array}$$




6. 
$$\begin{array}{r} 20 \\ + \square\square8 \\ \hline 40\square \end{array}$$




7. 
$$\begin{array}{r} 148 \\ + 23 \\ \hline \square\square\square \end{array}$$




8. 
$$\begin{array}{r} 203 \\ + 5\square\square \\ \hline \square33 \end{array}$$




9. 
$$\begin{array}{r} 203 \\ + 85\square \\ \hline \square\square\square8 \end{array}$$




10. 
$$\begin{array}{r} 5\square2 \\ + \square8\square \\ \hline \square285 \end{array}$$




11. 
$$\begin{array}{r} \square79 \\ + 8\square7 \\ \hline \square64\square \end{array}$$




12. 
$$\begin{array}{r} 4\square2 \\ + \square4\square \\ \hline \square059 \end{array}$$




13. 
$$\begin{array}{r} 3\square\square \\ + 89 \\ \hline \square50 \end{array}$$




14. 
$$\begin{array}{r} 12\square \\ + 103 \\ \hline \square\square1 \end{array}$$




15. 
$$\begin{array}{r} 655 \\ + 8\square\square \\ \hline \square\square13 \end{array}$$




16. 
$$\begin{array}{r} 674 \\ + 21\square \\ \hline \square\square8 \end{array}$$




17. 
$$\begin{array}{r} \square51 \\ + 638 \\ \hline \square5\square\square \end{array}$$



18. 
$$\begin{array}{r} 56\square \\ + 9\square2 \\ \hline \square\square41 \end{array}$$



19. 
$$\begin{array}{r} 95\square \\ + 463 \\ \hline \square\square\square2 \end{array}$$



20. 
$$\begin{array}{r} 7\square\square \\ + \square71 \\ \hline \square546 \end{array}$$

