


Chiffres Fondus Addition (I)

Nom: _____


Date: _____

Retrouve les chiffres qui ont fondu à la chaleur du soleil.


1.
$$\begin{array}{r} \square\square\square \\ + 564 \\ \hline \square305 \end{array}$$




2.
$$\begin{array}{r} \square16 \\ + 2\square\square \\ \hline 549 \end{array}$$




3.
$$\begin{array}{r} 93\square \\ + 7\square0 \\ \hline \square\square65 \end{array}$$




4.
$$\begin{array}{r} \square24 \\ + 6\square6 \\ \hline \square50\square \end{array}$$




5.
$$\begin{array}{r} \square\square\square \\ + 607 \\ \hline \square004 \end{array}$$




6.
$$\begin{array}{r} 20 \\ + \square\square8 \\ \hline 40\square \end{array}$$




7.
$$\begin{array}{r} 148 \\ + 23 \\ \hline \square\square\square \end{array}$$




8.
$$\begin{array}{r} 203 \\ + 5\square\square \\ \hline \square33 \end{array}$$




9.
$$\begin{array}{r} 203 \\ + 85\square \\ \hline \square\square\square8 \end{array}$$




10.
$$\begin{array}{r} 5\square2 \\ + \square8\square \\ \hline \square285 \end{array}$$




11.
$$\begin{array}{r} \square79 \\ + 8\square7 \\ \hline \square64\square \end{array}$$




12.
$$\begin{array}{r} 4\square2 \\ + \square4\square \\ \hline \square059 \end{array}$$




13.
$$\begin{array}{r} 3\square\square \\ + 89 \\ \hline \square50 \end{array}$$




14.
$$\begin{array}{r} 12\square \\ + 103 \\ \hline \square\square1 \end{array}$$




15.
$$\begin{array}{r} 655 \\ + 8\square\square \\ \hline \square\square13 \end{array}$$




16.
$$\begin{array}{r} 674 \\ + 21\square \\ \hline \square\square8 \end{array}$$




17.
$$\begin{array}{r} \square51 \\ + 638 \\ \hline \square5\square\square \end{array}$$




18.
$$\begin{array}{r} 56\square \\ + 9\square2 \\ \hline \square\square41 \end{array}$$



19.
$$\begin{array}{r} 95\square \\ + 463 \\ \hline \square\square\square2 \end{array}$$



20.
$$\begin{array}{r} 7\square\square \\ + \square71 \\ \hline \square546 \end{array}$$




Chiffres Fondus Addition (I) Réponses

Nom: _____


Date: _____

Retrouve les chiffres qui ont fondu à la chaleur du soleil.


1.
$$\begin{array}{r} 741 \\ + 564 \\ \hline 1305 \end{array}$$




2.
$$\begin{array}{r} 316 \\ + 233 \\ \hline 549 \end{array}$$




3.
$$\begin{array}{r} 935 \\ + 730 \\ \hline 1665 \end{array}$$




4.
$$\begin{array}{r} 824 \\ + 676 \\ \hline 1500 \end{array}$$




5.
$$\begin{array}{r} 397 \\ + 607 \\ \hline 1004 \end{array}$$




6.
$$\begin{array}{r} 20 \\ + 388 \\ \hline 408 \end{array}$$




7.
$$\begin{array}{r} 148 \\ + 23 \\ \hline 171 \end{array}$$




8.
$$\begin{array}{r} 203 \\ + 530 \\ \hline 733 \end{array}$$




9.
$$\begin{array}{r} 203 \\ + 855 \\ \hline 1058 \end{array}$$




10.
$$\begin{array}{r} 502 \\ + 783 \\ \hline 1285 \end{array}$$




11.
$$\begin{array}{r} 779 \\ + 867 \\ \hline 1646 \end{array}$$




12.
$$\begin{array}{r} 412 \\ + 647 \\ \hline 1059 \end{array}$$




13.
$$\begin{array}{r} 361 \\ + 89 \\ \hline 450 \end{array}$$




14.
$$\begin{array}{r} 128 \\ + 103 \\ \hline 231 \end{array}$$




15.
$$\begin{array}{r} 655 \\ + 858 \\ \hline 1513 \end{array}$$




16.
$$\begin{array}{r} 674 \\ + 214 \\ \hline 888 \end{array}$$




17.
$$\begin{array}{r} 951 \\ + 638 \\ \hline 1589 \end{array}$$



18.
$$\begin{array}{r} 569 \\ + 972 \\ \hline 1541 \end{array}$$



19.
$$\begin{array}{r} 959 \\ + 463 \\ \hline 1422 \end{array}$$



20.
$$\begin{array}{r} 775 \\ + 771 \\ \hline 1546 \end{array}$$

