


Chiffres Fondus Addition (H)

Nom: _____


Date: _____

Retrouve les chiffres qui ont fondu à la chaleur du soleil.


1.
$$\begin{array}{r} 117 \\ + 149 \\ \hline \square\square\square \end{array}$$




2.
$$\begin{array}{r} 864 \\ + 62\square \\ \hline \square\square\square 6 \end{array}$$




3.
$$\begin{array}{r} \square\square 4 \\ + 286 \\ \hline 45\square \end{array}$$




4.
$$\begin{array}{r} \square 39 \\ + \square\square \\ \hline \square 002 \end{array}$$




5.
$$\begin{array}{r} \square\square 9 \\ + 449 \\ \hline \square 19\square \end{array}$$




6.
$$\begin{array}{r} 980 \\ + \square\square \\ \hline \square\square 21 \end{array}$$




7.
$$\begin{array}{r} 6\square 2 \\ + 511 \\ \hline \square\square 5\square \end{array}$$




8.
$$\begin{array}{r} 6\square 5 \\ + \square 70 \\ \hline \square 63\square \end{array}$$




9.
$$\begin{array}{r} 859 \\ + \square\square 0 \\ \hline \square 78\square \end{array}$$




10.
$$\begin{array}{r} \square 7\square \\ + 1\square 7 \\ \hline 439 \end{array}$$




11.
$$\begin{array}{r} 661 \\ + \square\square\square \\ \hline 762 \end{array}$$




12.
$$\begin{array}{r} 111 \\ + \square\square\square \\ \hline 652 \end{array}$$




13.
$$\begin{array}{r} \square 79 \\ + 783 \\ \hline \square 2\square\square \end{array}$$




14.
$$\begin{array}{r} 2\square\square \\ + 211 \\ \hline \square 32 \end{array}$$




15.
$$\begin{array}{r} \square 35 \\ + 26\square \\ \hline 5\square 4 \end{array}$$




16.
$$\begin{array}{r} \square 02 \\ + \square\square \\ \hline 622 \end{array}$$




17.
$$\begin{array}{r} 28\square \\ + 8\square 7 \\ \hline \square\square 84 \end{array}$$




18.
$$\begin{array}{r} 15 \\ + \square 40 \\ \hline 3\square\square \end{array}$$



19.
$$\begin{array}{r} \square\square 3 \\ + 5\square \\ \hline 642 \end{array}$$



20.
$$\begin{array}{r} 2\square\square \\ + 160 \\ \hline \square 00 \end{array}$$




Chiffres Fondus Addition (H) Réponses

Nom: _____


Date: _____

Retrouve les chiffres qui ont fondu à la chaleur du soleil.


1.
$$\begin{array}{r} 117 \\ + 149 \\ \hline 266 \end{array}$$




2.
$$\begin{array}{r} 864 \\ + 622 \\ \hline 1486 \end{array}$$




3.
$$\begin{array}{r} 164 \\ + 286 \\ \hline 450 \end{array}$$




4.
$$\begin{array}{r} 939 \\ + 63 \\ \hline 1002 \end{array}$$




5.
$$\begin{array}{r} 749 \\ + 449 \\ \hline 1198 \end{array}$$




6.
$$\begin{array}{r} 980 \\ + 41 \\ \hline 1021 \end{array}$$




7.
$$\begin{array}{r} 642 \\ + 511 \\ \hline 1153 \end{array}$$




8.
$$\begin{array}{r} 665 \\ + 970 \\ \hline 1635 \end{array}$$




9.
$$\begin{array}{r} 859 \\ + 930 \\ \hline 1789 \end{array}$$




10.
$$\begin{array}{r} 272 \\ + 167 \\ \hline 439 \end{array}$$




11.
$$\begin{array}{r} 661 \\ + 101 \\ \hline 762 \end{array}$$




12.
$$\begin{array}{r} 111 \\ + 541 \\ \hline 652 \end{array}$$




13.
$$\begin{array}{r} 479 \\ + 783 \\ \hline 1262 \end{array}$$




14.
$$\begin{array}{r} 221 \\ + 211 \\ \hline 432 \end{array}$$




15.
$$\begin{array}{r} 235 \\ + 269 \\ \hline 504 \end{array}$$




16.
$$\begin{array}{r} 602 \\ + 20 \\ \hline 622 \end{array}$$




17.
$$\begin{array}{r} 287 \\ + 897 \\ \hline 1184 \end{array}$$



18.
$$\begin{array}{r} 15 \\ + 340 \\ \hline 355 \end{array}$$



19.
$$\begin{array}{r} 583 \\ + 59 \\ \hline 642 \end{array}$$



20.
$$\begin{array}{r} 240 \\ + 160 \\ \hline 400 \end{array}$$

