


Chiffres Fondus Addition (G)

Nom: _____


Date: _____

Retrouve les chiffres qui ont fondu à la chaleur du soleil.


1.
$$\begin{array}{r} \square\square\square \\ + 113 \\ \hline \square 053 \end{array}$$




2.
$$\begin{array}{r} \square 5 \\ + 816 \\ \hline \square 8\square \end{array}$$




3.
$$\begin{array}{r} 57\square \\ + 7\square 5 \\ \hline \square\square 65 \end{array}$$




4.
$$\begin{array}{r} 289 \\ + 2\square\square \\ \hline \square 58 \end{array}$$




5.
$$\begin{array}{r} 7\square \\ + 6\square 4 \\ \hline \square 33 \end{array}$$




6.
$$\begin{array}{r} 153 \\ + 86\square \\ \hline \square\square\square 9 \end{array}$$




7.
$$\begin{array}{r} \square\square \\ + \square 76 \\ \hline 634 \end{array}$$




8.
$$\begin{array}{r} \square 9 \\ + \square 12 \\ \hline 17\square \end{array}$$




9.
$$\begin{array}{r} 362 \\ + 2\square 5 \\ \hline \square 8\square \end{array}$$




10.
$$\begin{array}{r} 556 \\ + \square\square 6 \\ \hline 90\square \end{array}$$




11.
$$\begin{array}{r} \square\square 8 \\ + 756 \\ \hline 93\square \end{array}$$




12.
$$\begin{array}{r} 497 \\ + \square 5\square \\ \hline \square 2\square 8 \end{array}$$




13.
$$\begin{array}{r} \square 5\square \\ + \square 9 \\ \hline 948 \end{array}$$




14.
$$\begin{array}{r} \square 55 \\ + 185 \\ \hline 7\square\square \end{array}$$




15.
$$\begin{array}{r} \square 74 \\ + 86\square \\ \hline \square 5\square 4 \end{array}$$




16.
$$\begin{array}{r} 2\square \\ + 53 \\ \hline \square 7 \end{array}$$




17.
$$\begin{array}{r} 69\square \\ + \square 39 \\ \hline \square 0\square 4 \end{array}$$




18.
$$\begin{array}{r} \square\square 3 \\ + 76\square \\ \hline \square 289 \end{array}$$



19.
$$\begin{array}{r} 2\square \\ + \square\square 1 \\ \hline 660 \end{array}$$



20.
$$\begin{array}{r} 208 \\ + 827 \\ \hline \square\square\square\square \end{array}$$




Chiffres Fondus Addition (G) Réponses

Nom: _____


Date: _____

Retrouve les chiffres qui ont fondu à la chaleur du soleil.


1.
$$\begin{array}{r} \boxed{9} \boxed{4} \boxed{0} \\ + 113 \\ \hline \boxed{1} \boxed{0} \boxed{5} \boxed{3} \end{array}$$




2.
$$\begin{array}{r} \boxed{6} 5 \\ + 816 \\ \hline \boxed{8} \boxed{8} \boxed{1} \end{array}$$




3.
$$\begin{array}{r} 57\boxed{0} \\ + 7\boxed{9}5 \\ \hline \boxed{1} \boxed{3} \boxed{6} 5 \end{array}$$




4.
$$\begin{array}{r} 289 \\ + 2\boxed{6} \boxed{9} \\ \hline \boxed{5} \boxed{5} \boxed{8} \end{array}$$




5.
$$\begin{array}{r} 7\boxed{9} \\ + 6\boxed{5}4 \\ \hline \boxed{7} \boxed{3} \boxed{3} \end{array}$$




6.
$$\begin{array}{r} 153 \\ + 86\boxed{6} \\ \hline \boxed{1} \boxed{0} \boxed{1} 9 \end{array}$$




7.
$$\begin{array}{r} \boxed{5} \boxed{8} \\ + \boxed{5} 7 6 \\ \hline 634 \end{array}$$




8.
$$\begin{array}{r} \boxed{5} 9 \\ + \boxed{1} \boxed{1} 2 \\ \hline 17\boxed{1} \end{array}$$




9.
$$\begin{array}{r} 362 \\ + 2\boxed{2}5 \\ \hline \boxed{5} \boxed{8} \boxed{7} \end{array}$$




10.
$$\begin{array}{r} 556 \\ + \boxed{3} \boxed{4} 6 \\ \hline 90\boxed{2} \end{array}$$




11.
$$\begin{array}{r} \boxed{1} \boxed{7} 8 \\ + 756 \\ \hline 93\boxed{4} \end{array}$$




12.
$$\begin{array}{r} 497 \\ + \boxed{7} \boxed{5} \boxed{1} \\ \hline \boxed{1} \boxed{2} \boxed{4} \boxed{8} \end{array}$$




13.
$$\begin{array}{r} \boxed{8} \boxed{5} \boxed{9} \\ + \boxed{8} 9 \\ \hline 948 \end{array}$$




14.
$$\begin{array}{r} \boxed{5} 5 5 \\ + 185 \\ \hline 7\boxed{4} \boxed{0} \end{array}$$




15.
$$\begin{array}{r} \boxed{6} 7 4 \\ + 86\boxed{0} \\ \hline \boxed{1} \boxed{5} \boxed{3} 4 \end{array}$$




16.
$$\begin{array}{r} 2\boxed{4} \\ + 53 \\ \hline \boxed{7} 7 \end{array}$$




17.
$$\begin{array}{r} 69\boxed{5} \\ + \boxed{3} 3 9 \\ \hline \boxed{1} \boxed{0} \boxed{3} 4 \end{array}$$



18.
$$\begin{array}{r} \boxed{5} \boxed{2} 3 \\ + 76\boxed{6} \\ \hline \boxed{1} \boxed{2} \boxed{8} 9 \end{array}$$



19.
$$\begin{array}{r} 2\boxed{9} \\ + \boxed{6} \boxed{3} 1 \\ \hline 660 \end{array}$$



20.
$$\begin{array}{r} 208 \\ + 827 \\ \hline \boxed{1} \boxed{0} \boxed{3} \boxed{5} \end{array}$$

