


Chiffres Fondus Addition (F)

Nom: _____


Date: _____

Retrouve les chiffres qui ont fondu à la chaleur du soleil.


1.
$$\begin{array}{r} \square\square 3 \\ + 35\square \\ \hline \square 054 \end{array}$$




2.
$$\begin{array}{r} \square 34 \\ + \square\square \\ \hline 567 \end{array}$$




3.
$$\begin{array}{r} 25\square \\ + \square 89 \\ \hline 6\square 8 \end{array}$$




4.
$$\begin{array}{r} 933 \\ + \square 5\square \\ \hline \square 3\square 2 \end{array}$$




5.
$$\begin{array}{r} \square\square 1 \\ + 556 \\ \hline \square 13\square \end{array}$$




6.
$$\begin{array}{r} 98 \\ + \square 4\square \\ \hline 9\square 6 \end{array}$$




7.
$$\begin{array}{r} 7\square\square \\ + \square 58 \\ \hline 979 \end{array}$$




8.
$$\begin{array}{r} \square\square\square \\ + 375 \\ \hline \square 325 \end{array}$$




9.
$$\begin{array}{r} 1\square 2 \\ + 88 \\ \hline \square 3\square \end{array}$$




10.
$$\begin{array}{r} \square 1\square \\ + 66 \\ \hline 6\square 9 \end{array}$$




11.
$$\begin{array}{r} \square\square 3 \\ + 940 \\ \hline \square 32\square \end{array}$$




12.
$$\begin{array}{r} 7\square 0 \\ + 5\square \\ \hline \square 82 \end{array}$$




13.
$$\begin{array}{r} \square\square\square \\ + 672 \\ \hline \square 034 \end{array}$$




14.
$$\begin{array}{r} 194 \\ + 1\square 4 \\ \hline \square 7\square \end{array}$$




15.
$$\begin{array}{r} 357 \\ + 97\square \\ \hline \square\square\square 7 \end{array}$$




16.
$$\begin{array}{r} 801 \\ + 281 \\ \hline \square\square\square\square \end{array}$$




17.
$$\begin{array}{r} 54 \\ + 32\square \\ \hline \square\square 6 \end{array}$$




18.
$$\begin{array}{r} 15 \\ + 4\square\square \\ \hline \square 04 \end{array}$$



19.
$$\begin{array}{r} 221 \\ + 7\square 3 \\ \hline \square 8\square \end{array}$$



20.
$$\begin{array}{r} \square\square 4 \\ + 452 \\ \hline 59\square \end{array}$$




Chiffres Fondus Addition (F) Réponses

Nom: _____


Date: _____

Retrouve les chiffres qui ont fondu à la chaleur du soleil.


1.
$$\begin{array}{r} \boxed{7} \boxed{0} \boxed{3} \\ + \quad \boxed{3} \boxed{5} \boxed{1} \\ \hline \boxed{1} \boxed{0} \boxed{5} \boxed{4} \end{array}$$




2.
$$\begin{array}{r} \boxed{5} \boxed{3} \boxed{4} \\ + \quad \boxed{3} \boxed{3} \\ \hline \quad \boxed{5} \boxed{6} \boxed{7} \end{array}$$




3.
$$\begin{array}{r} \quad \boxed{2} \boxed{5} \boxed{9} \\ + \quad \boxed{3} \boxed{8} \boxed{9} \\ \hline \quad \boxed{6} \boxed{4} \boxed{8} \end{array}$$




4.
$$\begin{array}{r} \quad \boxed{9} \boxed{3} \boxed{3} \\ + \quad \boxed{4} \boxed{5} \boxed{9} \\ \hline \quad \boxed{1} \boxed{3} \boxed{9} \boxed{2} \end{array}$$




5.
$$\begin{array}{r} \boxed{5} \boxed{8} \boxed{1} \\ + \quad \boxed{5} \boxed{5} \boxed{6} \\ \hline \boxed{1} \boxed{1} \boxed{3} \boxed{7} \end{array}$$




6.
$$\begin{array}{r} \quad \quad \boxed{9} \boxed{8} \\ + \quad \boxed{8} \boxed{4} \boxed{8} \\ \hline \quad \boxed{9} \boxed{4} \boxed{6} \end{array}$$




7.
$$\begin{array}{r} \quad \boxed{7} \boxed{2} \boxed{1} \\ + \quad \boxed{2} \boxed{5} \boxed{8} \\ \hline \quad \boxed{9} \boxed{7} \boxed{9} \end{array}$$




8.
$$\begin{array}{r} \boxed{9} \boxed{5} \boxed{0} \\ + \quad \boxed{3} \boxed{7} \boxed{5} \\ \hline \boxed{1} \boxed{3} \boxed{2} \boxed{5} \end{array}$$




9.
$$\begin{array}{r} \quad \boxed{1} \boxed{4} \boxed{2} \\ + \quad \quad \boxed{8} \boxed{8} \\ \hline \quad \boxed{2} \boxed{3} \boxed{0} \end{array}$$




10.
$$\begin{array}{r} \boxed{6} \boxed{1} \boxed{3} \\ + \quad \quad \boxed{6} \boxed{6} \\ \hline \quad \boxed{6} \boxed{7} \boxed{9} \end{array}$$




11.
$$\begin{array}{r} \boxed{3} \boxed{8} \boxed{3} \\ + \quad \boxed{9} \boxed{4} \boxed{0} \\ \hline \boxed{1} \boxed{3} \boxed{2} \boxed{3} \end{array}$$




12.
$$\begin{array}{r} \quad \boxed{7} \boxed{3} \boxed{0} \\ + \quad \quad \boxed{5} \boxed{2} \\ \hline \quad \boxed{7} \boxed{8} \boxed{2} \end{array}$$




13.
$$\begin{array}{r} \boxed{3} \boxed{6} \boxed{2} \\ + \quad \boxed{6} \boxed{7} \boxed{2} \\ \hline \boxed{1} \boxed{0} \boxed{3} \boxed{4} \end{array}$$




14.
$$\begin{array}{r} \quad \boxed{1} \boxed{9} \boxed{4} \\ + \quad \boxed{1} \boxed{8} \boxed{4} \\ \hline \quad \boxed{3} \boxed{7} \boxed{8} \end{array}$$




15.
$$\begin{array}{r} \quad \boxed{3} \boxed{5} \boxed{7} \\ + \quad \boxed{9} \boxed{7} \boxed{0} \\ \hline \boxed{1} \boxed{3} \boxed{2} \boxed{7} \end{array}$$




16.
$$\begin{array}{r} \quad \boxed{8} \boxed{0} \boxed{1} \\ + \quad \quad \boxed{2} \boxed{8} \boxed{1} \\ \hline \quad \boxed{1} \boxed{0} \boxed{8} \boxed{2} \end{array}$$




17.
$$\begin{array}{r} \quad \quad \boxed{5} \boxed{4} \\ + \quad \boxed{3} \boxed{2} \boxed{2} \\ \hline \quad \boxed{3} \boxed{7} \boxed{6} \end{array}$$



18.
$$\begin{array}{r} \quad \quad \boxed{1} \boxed{5} \\ + \quad \boxed{4} \boxed{8} \boxed{9} \\ \hline \quad \boxed{5} \boxed{0} \boxed{4} \end{array}$$



19.
$$\begin{array}{r} \quad \boxed{2} \boxed{2} \boxed{1} \\ + \quad \boxed{7} \boxed{6} \boxed{3} \\ \hline \quad \boxed{9} \boxed{8} \boxed{4} \end{array}$$



20.
$$\begin{array}{r} \quad \boxed{1} \boxed{4} \boxed{4} \\ + \quad \quad \boxed{4} \boxed{5} \boxed{2} \\ \hline \quad \boxed{5} \boxed{9} \boxed{6} \end{array}$$

