


Chiffres Fondus Addition (I)

Nom: _____


Date: _____

Retrouve les chiffres qui ont fondu à la chaleur du soleil.


1.
$$\begin{array}{r} 90 \square\square \\ + \square 523 \\ \hline \square 2 \square 93 \end{array}$$




2.
$$\begin{array}{r} 4846 \\ + \square\square 29 \\ \hline 86 \square\square \end{array}$$




3.
$$\begin{array}{r} \square 7 \square 1 \\ + 9 \square 82 \\ \hline \square 718 \square \end{array}$$




4.
$$\begin{array}{r} 1478 \\ + \square 0 \square 9 \\ \hline 7 \square 1 \square \end{array}$$




5.
$$\begin{array}{r} 5205 \\ + 84 \square\square \\ \hline \square\square \square 44 \end{array}$$




6.
$$\begin{array}{r} 21 \square 7 \\ + \square\square 7 \square \\ \hline 9388 \end{array}$$




7.
$$\begin{array}{r} 6 \square 78 \\ + \square 97 \square \\ \hline \square 22 \square 3 \end{array}$$




8.
$$\begin{array}{r} \square 62 \square \\ + 7372 \\ \hline \square 3 \square \square 6 \end{array}$$




9.
$$\begin{array}{r} 4 \square\square\square \\ + \square 643 \\ \hline \square 2010 \end{array}$$




10.
$$\begin{array}{r} 76 \square\square \\ + \square 851 \\ \hline \square 2 \square 47 \end{array}$$




11.
$$\begin{array}{r} 38 \square\square \\ + 8399 \\ \hline \square\square \square 36 \end{array}$$




12.
$$\begin{array}{r} \square 964 \\ + 34 \square 7 \\ \hline \square 2 \square 8 \square \end{array}$$




13.
$$\begin{array}{r} 55 \square 6 \\ + \square 29 \square \\ \hline 9 \square 24 \end{array}$$




14.
$$\begin{array}{r} 652 \square \\ + \square 0 \square 1 \\ \hline 8 \square 08 \end{array}$$




15.
$$\begin{array}{r} 10 \square 1 \\ + \square 59 \square \\ \hline 8 \square 94 \end{array}$$




16.
$$\begin{array}{r} 792 \square \\ + 3088 \\ \hline \square\square \square 8 \end{array}$$




17.
$$\begin{array}{r} 8205 \\ + \square 8 \square 7 \\ \hline \square 3 \square 6 \square \end{array}$$



18.
$$\begin{array}{r} 2177 \\ + \square 17 \square \\ \hline 9 \square \square 1 \end{array}$$



19.
$$\begin{array}{r} 27 \square 8 \\ + \square 907 \\ \hline 9 \square 8 \square \end{array}$$



20.
$$\begin{array}{r} \square\square 9 \square \\ + 38 \square 0 \\ \hline 6250 \end{array}$$

