


Chiffres Fondus Addition (D)

Nom: _____


Date: _____

Retrouve les chiffres qui ont fondu à la chaleur du soleil.


1.
$$\begin{array}{r} \square 2 \square 4 \\ + 2 \square 9 4 \\ \hline 3 8 3 \square \end{array}$$




2.
$$\begin{array}{r} 8 9 0 3 \\ + 2 5 \square \square \\ \hline \square \square \square 0 9 \end{array}$$




3.
$$\begin{array}{r} 6 9 9 5 \\ + \square 8 4 5 \\ \hline 9 \square \square \square \end{array}$$




4.
$$\begin{array}{r} 9 \square 4 5 \\ + \square \square 5 \square 8 \\ \hline \square \square 7 7 5 \square \end{array}$$




5.
$$\begin{array}{r} 9 \square \square 5 \\ + 1 0 1 2 \\ \hline \square \square \square 3 6 \square \end{array}$$




6.
$$\begin{array}{r} 6 2 0 0 \\ + 7 0 0 \square \\ \hline \square \square \square \square 1 \end{array}$$




7.
$$\begin{array}{r} \square 3 7 8 \\ + 4 3 7 1 \\ \hline 8 \square \square \square \end{array}$$




8.
$$\begin{array}{r} 7 1 \square \square \\ + \square \square 7 7 \\ \hline \square \square 3 4 9 2 \end{array}$$




9.
$$\begin{array}{r} 5 1 \square 0 \\ + 9 \square 4 6 \\ \hline \square \square \square 3 0 \square \end{array}$$




10.
$$\begin{array}{r} 2 0 \square 8 \\ + 1 \square 2 2 \\ \hline \square \square 3 3 \square \end{array}$$




11.
$$\begin{array}{r} 6 \square 8 \square \\ + 1 6 \square 6 \\ \hline \square \square 4 9 7 \end{array}$$




12.
$$\begin{array}{r} 5 \square 2 7 \\ + 3 1 \square 0 \\ \hline \square \square 2 3 \square \end{array}$$




13.
$$\begin{array}{r} \square \square \square 4 \\ + 2 5 9 \square \\ \hline 9 9 4 3 \end{array}$$




14.
$$\begin{array}{r} 1 \square 8 \square \\ + 5 1 4 2 \\ \hline \square \square 8 \square 2 \end{array}$$




15.
$$\begin{array}{r} 9 \square 7 \square \\ + \square 9 \square 5 \\ \hline \square \square 6 3 2 3 \end{array}$$




16.
$$\begin{array}{r} 5 \square \square \square \\ + 7 3 0 7 \\ \hline \square \square \square 9 9 8 \end{array}$$




17.
$$\begin{array}{r} \square 4 4 0 \\ + 3 \square 0 2 \\ \hline 4 9 \square \square \end{array}$$



18.
$$\begin{array}{r} \square 1 7 \square \\ + 4 \square \square 1 \\ \hline \square \square 3 7 7 4 \end{array}$$



19.
$$\begin{array}{r} \square \square \square 3 \\ + 6 0 2 \square \\ \hline \square \square 0 2 7 3 \end{array}$$



20.
$$\begin{array}{r} \square 7 4 7 \\ + 8 \square \square 2 \\ \hline 9 8 3 \square \end{array}$$

