


Chiffres Fondus Addition (B)

Nom: _____


Date: _____

Retrouve les chiffres qui ont fondu à la chaleur du soleil.


1.
$$\begin{array}{r} 2 \square 8 9 \\ + \square 8 \square 6 \\ \hline 9 3 4 \square \end{array}$$




2.
$$\begin{array}{r} 1 8 3 7 \\ + \square \square 6 \square \\ \hline 6 5 \square 5 \end{array}$$




3.
$$\begin{array}{r} \square \square 5 \square \\ + 8 1 1 4 \\ \hline \square 1 3 \square 5 \end{array}$$




4.
$$\begin{array}{r} 5 \square 7 2 \\ + 5 1 \square 0 \\ \hline \square \square 3 0 \square \end{array}$$




5.
$$\begin{array}{r} 4 1 \square 6 \\ + 1 \square 6 \square \\ \hline \square 8 2 5 \end{array}$$




6.
$$\begin{array}{r} 2 2 5 \square \\ + \square \square \square 6 \\ \hline 4 6 5 4 \end{array}$$




7.
$$\begin{array}{r} 8 3 \square \square \\ + \square 8 6 8 \\ \hline \square 0 \square 2 8 \end{array}$$




8.
$$\begin{array}{r} \square \square 8 \square \\ + 8 1 \square 7 \\ \hline \square 1 9 9 5 \end{array}$$




9.
$$\begin{array}{r} 7 6 5 \square \\ + 9 2 9 5 \\ \hline \square \square \square \square 5 \end{array}$$




10.
$$\begin{array}{r} 4 9 6 5 \\ + 8 0 3 2 \\ \hline \square \square \square \square \square \end{array}$$




11.
$$\begin{array}{r} 2 8 2 9 \\ + 3 \square \square 6 \\ \hline \square 7 3 \square \end{array}$$




12.
$$\begin{array}{r} 1 1 7 7 \\ + \square \square 0 5 \\ \hline 9 6 \square \square \end{array}$$




13.
$$\begin{array}{r} 4 4 \square \square \\ + \square \square 7 5 \\ \hline 7 9 1 4 \end{array}$$




14.
$$\begin{array}{r} \square 5 5 5 \\ + 6 \square \square \square \\ \hline \square 4 7 8 0 \end{array}$$




15.
$$\begin{array}{r} 6 5 \square 9 \\ + \square \square 6 \square \\ \hline \square 2 0 1 8 \end{array}$$




16.
$$\begin{array}{r} \square \square \square 2 \\ + 5 2 4 5 \\ \hline \square 3 1 3 \square \end{array}$$




17.
$$\begin{array}{r} 1 4 8 5 \\ + \square \square 5 8 \\ \hline 7 1 \square \square \end{array}$$



18.
$$\begin{array}{r} 6 \square \square \square \\ + \square 3 0 9 \\ \hline \square 3 9 6 3 \end{array}$$



19.
$$\begin{array}{r} \square \square \square \square \\ + 3 6 9 3 \\ \hline 6 4 9 4 \end{array}$$



20.
$$\begin{array}{r} 7 \square 8 0 \\ + 8 3 \square \square \\ \hline \square \square 0 0 4 \end{array}$$

