

# À Travers la Forêt Hantée (I)

Trouvez chaque somme pour vous sortir de la forêt hantée.

7  
+8

1  
+2

4  
+5

9  
+5

3  
+6

6  
+8

5  
+9

5  
+4

4  
+4

5  
+3

4  
+2

9  
+8

3  
+8

2  
+6

5  
+7

1  
+4

6  
+1

7  
+1

9  
+2














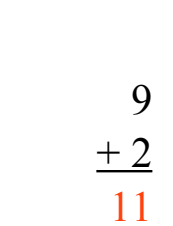
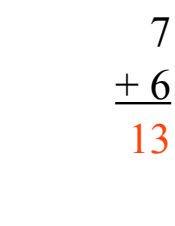




7  
+6

4  
+3

8  
+1

# À Travers la Forêt Hantée (I) Solutions

Trouvez chaque somme pour vous sortir de la forêt hantée.

	$\begin{array}{r} 7 \\ +8 \\ \hline 15 \end{array}$		$\begin{array}{r} 4 \\ +5 \\ \hline 9 \end{array}$	
	$\begin{array}{r} 9 \\ +5 \\ \hline 14 \end{array}$		$\begin{array}{r} 6 \\ +8 \\ \hline 14 \end{array}$	$\begin{array}{r} 5 \\ +9 \\ \hline 14 \end{array}$
	$\begin{array}{r} 5 \\ +4 \\ \hline 9 \end{array}$		$\begin{array}{r} 5 \\ +9 \\ \hline 14 \end{array}$	
	$\begin{array}{r} 4 \\ +2 \\ \hline 6 \end{array}$		$\begin{array}{r} 6 \\ +4 \\ \hline 10 \end{array}$	
	$\begin{array}{r} 5 \\ +8 \\ \hline 13 \end{array}$		$\begin{array}{r} 3 \\ +8 \\ \hline 11 \end{array}$	$\begin{array}{r} 2 \\ +6 \\ \hline 8 \end{array}$
	$\begin{array}{r} 2 \\ +7 \\ \hline 9 \end{array}$		$\begin{array}{r} 6 \\ +1 \\ \hline 7 \end{array}$	$\begin{array}{r} 7 \\ +1 \\ \hline 8 \end{array}$
$\begin{array}{r} 9 \\ +2 \\ \hline 11 \end{array}$		$\begin{array}{r} 1 \\ +4 \\ \hline 5 \end{array}$	$\begin{array}{r} 7 \\ +6 \\ \hline 13 \end{array}$	
	$\begin{array}{r} 4 \\ +3 \\ \hline 7 \end{array}$		$\begin{array}{r} 8 \\ +1 \\ \hline 9 \end{array}$	