

À Travers la Forêt Hantée (A)

Trouvez chaque somme pour vous sortir de la forêt hantée.

7
+3

6
+9

6
+6

6
+4

2
+7

6
+7

7
+9

1
+6

2
+8

3
+1

6
+3

5
+3

4
+9

6
+3

7
+8

1
+9

7
+4

7
+6

6
+8

1
+9

9
+2

6
+6

2
+7

2
+5

4
+9

6
+4

4
+9

1
+4

6
+4

5
+9

À Travers la Forêt Hantée (A) Solutions

Trouvez chaque somme pour vous sortir de la forêt hantée.



$$\begin{array}{r} 7 \\ +3 \\ \hline 10 \end{array}$$

$$\begin{array}{r} 6 \\ +9 \\ \hline 15 \end{array}$$

$$\begin{array}{r} 6 \\ +6 \\ \hline 12 \end{array}$$


$$\begin{array}{r} 6 \\ +4 \\ \hline 10 \end{array}$$

$$\begin{array}{r} 2 \\ +7 \\ \hline 9 \end{array}$$

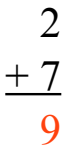


$$\begin{array}{r} 6 \\ +7 \\ \hline 13 \end{array}$$

$$\begin{array}{r} 7 \\ +9 \\ \hline 16 \end{array}$$



$$\begin{array}{r} 1 \\ +6 \\ \hline 7 \end{array}$$



$$\begin{array}{r} 3 \\ +1 \\ \hline 4 \end{array}$$



$$\begin{array}{r} 5 \\ +3 \\ \hline 8 \end{array}$$

$$\begin{array}{r} 2 \\ +8 \\ \hline 10 \end{array}$$



$$\begin{array}{r} 4 \\ +9 \\ \hline 13 \end{array}$$

$$\begin{array}{r} 6 \\ +3 \\ \hline 9 \end{array}$$

$$\begin{array}{r} 6 \\ +8 \\ \hline 14 \end{array}$$

$$\begin{array}{r} 1 \\ +9 \\ \hline 10 \end{array}$$



$$\begin{array}{r} 7 \\ +4 \\ \hline 11 \end{array}$$

$$\begin{array}{r} 7 \\ +6 \\ \hline 13 \end{array}$$

$$\begin{array}{r} 2 \\ +7 \\ \hline 9 \end{array}$$

$$\begin{array}{r} 2 \\ +5 \\ \hline 7 \end{array}$$

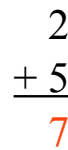
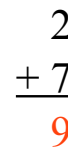
$$\begin{array}{r} 1 \\ +9 \\ \hline 10 \end{array}$$

$$\begin{array}{r} 4 \\ +9 \\ \hline 13 \end{array}$$

$$\begin{array}{r} 9 \\ +2 \\ \hline 11 \end{array}$$

$$\begin{array}{r} 6 \\ +6 \\ \hline 12 \end{array}$$

$$\begin{array}{r} 6 \\ +4 \\ \hline 10 \end{array}$$



$$\begin{array}{r} 1 \\ +4 \\ \hline 5 \end{array}$$

$$\begin{array}{r} 5 \\ +9 \\ \hline 14 \end{array}$$

