

COMPTER HALLOWEEN (A)

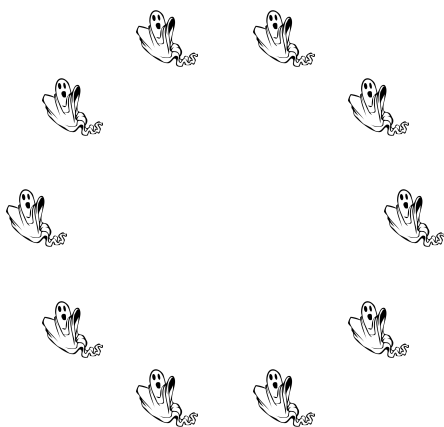
Nom: _____

Date: _____


Score: _____ /4

Comptez le nombre d'objets dans chaque groupe.


1. Il y a fantômes.



2. Il y a chauves-souris.



3. Il y a sorcières.



4. Il y a citrouilles d'Halloween.



COMPTER HALLOWEEN (A) REPONSES

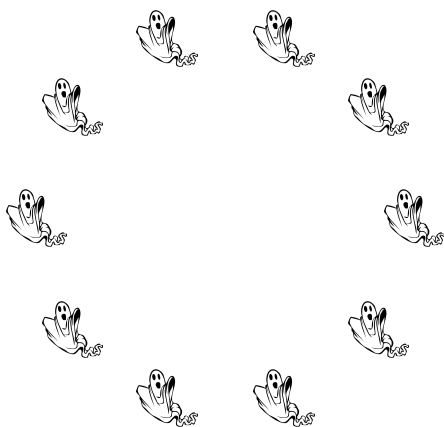
Nom: _____

Date: _____


Score: _____ /4

Comptez le nombre d'objets dans chaque groupe.


1. Il y a fantômes.



2. Il y a chauves-souris.



3. Il y a sorcières.



4. Il y a citrouilles d'Halloween.



COMPTER HALLOWEEN (B)

Nom: _____

Date: _____

Score: _____ /4

Comptez le nombre d'objets dans chaque groupe.


1. Il y a citrouilles d'Halloween.




2. Il y a chauves-souris.



3. Il y a sorcières.



4. Il y a fantômes.



COMPTER HALLOWEEN (B) REPONSES

Nom: _____

Date: _____

Score: _____ /4

Comptez le nombre d'objets dans chaque groupe.


1. Il y a citrouilles d'Halloween.




2. Il y a chauves-souris.



3. Il y a sorcières.



4. Il y a fantômes.



COMPTER HALLOWEEN (C)

Nom: _____

Date: _____


Score: _____ /4

Comptez le nombre d'objets dans chaque groupe.


1. Il y a citrouilles d'Halloween.




2. Il y a chauves-souris.



3. Il y a sorcières.



4. Il y a fantômes.



COMPTER HALLOWEEN (C) REPONSES

Nom: _____

Date: _____

Score: _____ /4

Comptez le nombre d'objets dans chaque groupe.


1. Il y a citrouilles d'Halloween.




2. Il y a chauves-souris.



3. Il y a sorcières.



4. Il y a fantômes.



COMPTER HALLOWEEN (D)


Nom: _____

Date: _____


Score: _____ /4

Comptez le nombre d'objets dans chaque groupe.


1. Il y a fantômes.




2. Il y a chauves-souris.



3. Il y a sorcières.



4. Il y a citrouilles d'Halloween.



COMPTER HALLOWEEN (D) REPONSES


Nom: _____

Date: _____


Score: _____ /4

Comptez le nombre d'objets dans chaque groupe.

1. Il y a fantômes.



2. Il y a chauves-souris.



3. Il y a sorcières.



4. Il y a citrouilles d'Halloween.



COMPTER HALLOWEEN (E)


Nom: _____

Date: _____

Score: _____ /4

Comptez le nombre d'objets dans chaque groupe.


1. Il y a fantômes.




2. Il y a citrouilles d'Halloween.



3. Il y a chauves-souris.



4. Il y a sorcières.



COMPTER HALLOWEEN (E) REPONSES


Nom: _____

Date: _____

Score: _____ /4

Comptez le nombre d'objets dans chaque groupe.


1. Il y a fantômes.




2. Il y a citrouilles d'Halloween.



3. Il y a chauves-souris.



4. Il y a sorcières.



COMPTER HALLOWEEN (F)


Nom: _____

Date: _____


Score: _____ /4

Comptez le nombre d'objets dans chaque groupe.

1. Il y a fantômes.




2. Il y a sorcières.



3. Il y a citrouilles d'Halloween.



4. Il y a chauves-souris.



COMPTER HALLOWEEN (F) REPONSES


Nom: _____

Date: _____


Score: _____ /4

Comptez le nombre d'objets dans chaque groupe.

1. Il y a fantômes.




2. Il y a sorcières.



3. Il y a citrouilles d'Halloween.



4. Il y a chauves-souris.



COMPTER HALLOWEEN (9)

Nom: _____

Date: _____


Score: _____ /4

Comptez le nombre d'objets dans chaque groupe.


1. Il y a citrouilles d'Halloween.



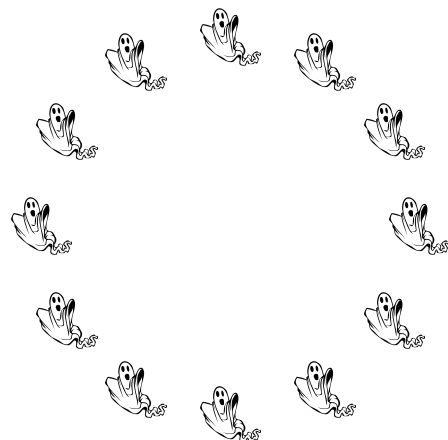
2. Il y a sorcières.



3. Il y a chauves-souris.



4. Il y a fantômes.



COMPTER HALLOWEEN (9) REPONSES

Nom: _____

Date: _____


Score: _____ /4

Comptez le nombre d'objets dans chaque groupe.


1. Il y a citrouilles d'Halloween.



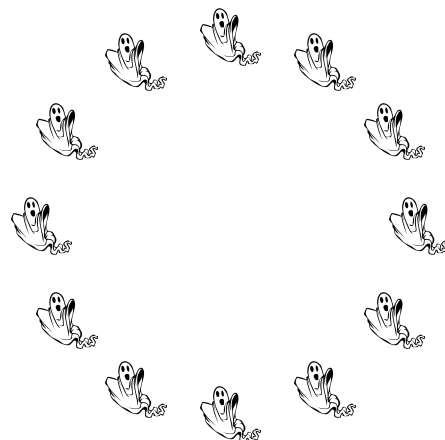
2. Il y a sorcières.



3. Il y a chauves-souris.



4. Il y a fantômes.



COMPTER HALLOWEEN (H)

Nom: _____

Date: _____


Score: _____ /4

Comptez le nombre d'objets dans chaque groupe.


1. Il y a citrouilles d'Halloween.




2. Il y a sorcières.



3. Il y a chauves-souris.



4. Il y a fantômes.



COMPTER HALLOWEEN (H) REPONSES

Nom: _____

Date: _____


Score: _____ /4

Comptez le nombre d'objets dans chaque groupe.

1. Il y a citrouilles d'Halloween.




2. Il y a sorcières.



3. Il y a chauves-souris.



4. Il y a fantômes.



COMPTER HALLOWEEN (1)

Nom: _____

Date: _____


Score: _____ /4

Comptez le nombre d'objets dans chaque groupe.


1. Il y a citrouilles d'Halloween.



2. Il y a fantômes.



3. Il y a sorcières.



4. Il y a chauves-souris.



COMPTER HALLOWEEN (1) REPONSES


Nom: _____

Date: _____


Score: _____ /4

Comptez le nombre d'objets dans chaque groupe.


1. Il y a citrouilles d'Halloween.




2. Il y a fantômes.



3. Il y a sorcières.



4. Il y a chauves-souris.



COMPTER HALLOWEEN (J)


Nom: _____

Date: _____


Score: _____ /4

Comptez le nombre d'objets dans chaque groupe.

1. Il y a fantômes.




2. Il y a chauves-souris.



3. Il y a citrouilles d'Halloween.



4. Il y a sorcières.



COMPTER HALLOWEEN (J) REPONSES


Nom: _____

Date: _____

Score: _____ /4

Comptez le nombre d'objets dans chaque groupe.

1. Il y a fantômes.



2. Il y a chauves-souris.



3. Il y a citrouilles d'Halloween.



4. Il y a sorcières.

