

# COMPTER HALLOWEEN (E)


Nom: \_\_\_\_\_

Date: \_\_\_\_\_

Score: \_\_\_\_\_ /4

Comptez le nombre d'objets dans chaque groupe.


1. Il y a  fantômes.




2. Il y a  citrouilles d'Halloween.



3. Il y a  chauves-souris.



4. Il y a  sorcières.



# COMPTER HALLOWEEN (E) REPONSES


Nom: \_\_\_\_\_

Date: \_\_\_\_\_

Score: \_\_\_\_\_ /4

Comptez le nombre d'objets dans chaque groupe.


1. Il y a  fantômes.



2. Il y a  citrouilles d'Halloween.



3. Il y a  chauves-souris.



4. Il y a  sorcières.

