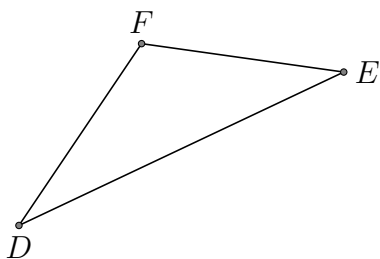


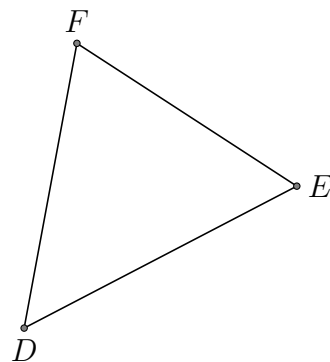
Centres de Triangle (E)

Trouver chaque centre de gravité du triangle donné

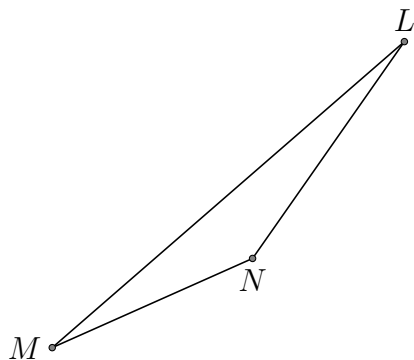
1. - Centre de gravité d'un triangle



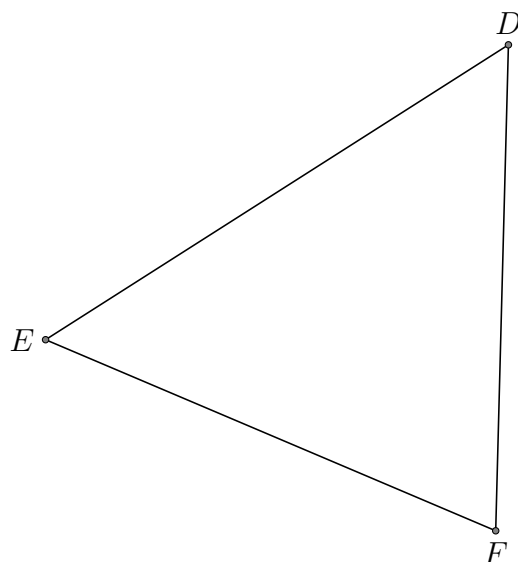
2. - Centre de gravité d'un triangle



3. - Centre de gravité d'un triangle



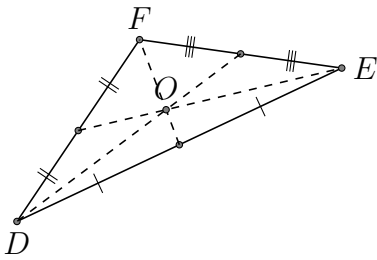
4. - Centre de gravité d'un triangle



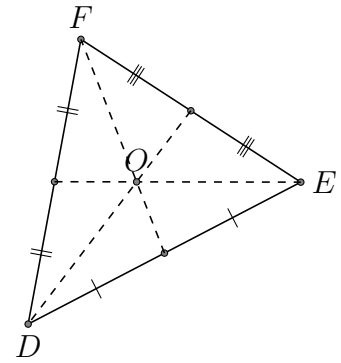
Centres de Triangle (E) Réponses

Trouver chaque centre de gravité du triangle donné

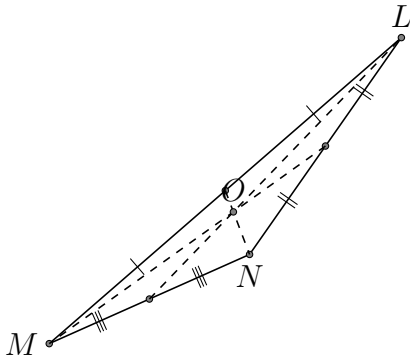
1. - Centre de gravité d'un triangle



2. - Centre de gravité d'un triangle



3. - Centre de gravité d'un triangle



4. - Centre de gravité d'un triangle

