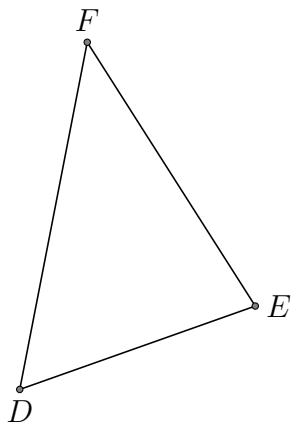


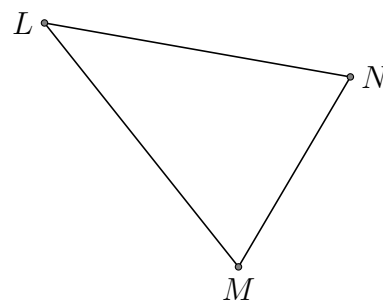
Centres de Triangle (I)

Trouver chaque centre du triangle donné

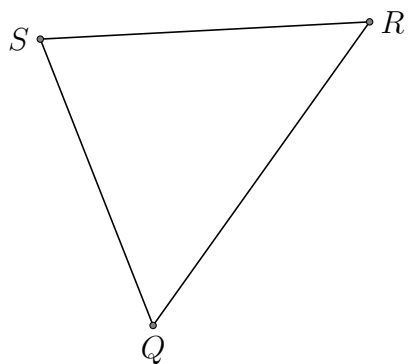
1. - angle circonscrit



2. - angle circonscrit



3. - angle circonscrit



4. - angle circonscrit

