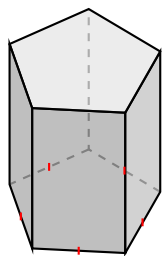
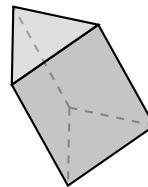


# Identification de Prismes et de Pyramides (A)

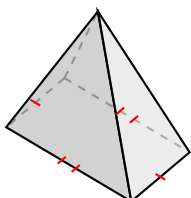
Identifiez chaque figure.



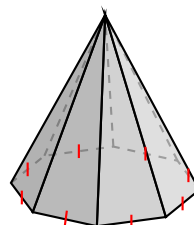
\_\_\_\_\_



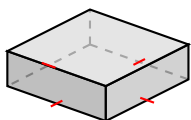
\_\_\_\_\_



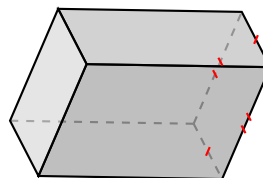
\_\_\_\_\_



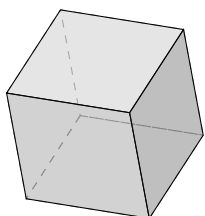
\_\_\_\_\_



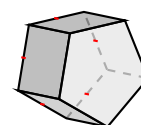
\_\_\_\_\_



\_\_\_\_\_



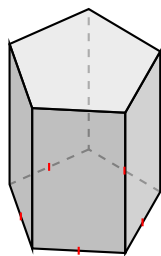
\_\_\_\_\_



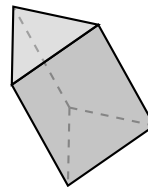
\_\_\_\_\_

# Identification de Prismes et de Pyramides (A) Solutions

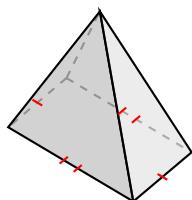
Identifiez chaque figure.



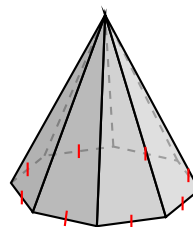
prisme pentagonal



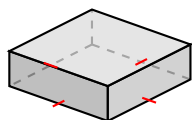
prisme triangulaire



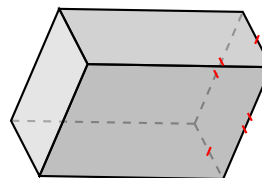
pyramide à base rectangulaire



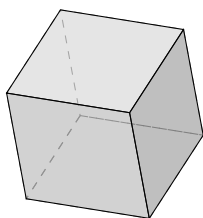
pyramide à base octogonale



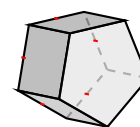
prisme à base carré



prisme rectangulaire



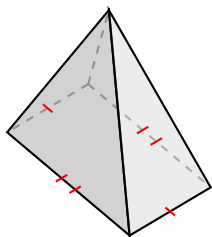
prisme à base carré, cube



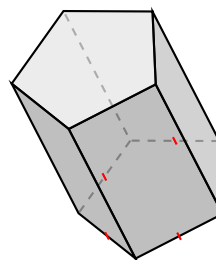
prisme pentagonal

# Identification de Prismes et de Pyramides (B)

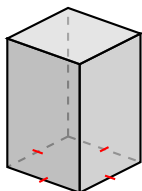
Identifiez chaque figure.



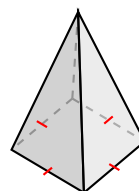
\_\_\_\_\_



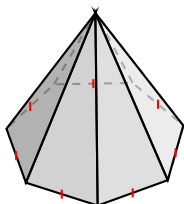
\_\_\_\_\_



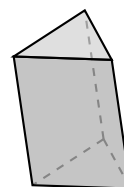
\_\_\_\_\_



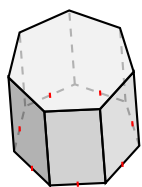
\_\_\_\_\_



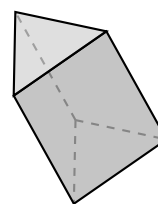
\_\_\_\_\_



\_\_\_\_\_



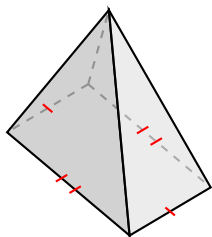
\_\_\_\_\_



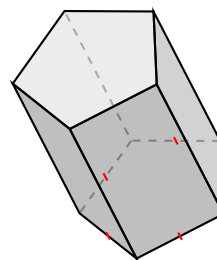
\_\_\_\_\_

# Identification de Prismes et de Pyramides (B) Solutions

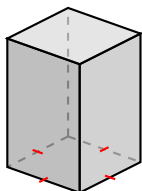
Identifiez chaque figure.



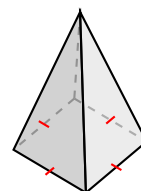
pyramide à base rectangulaire



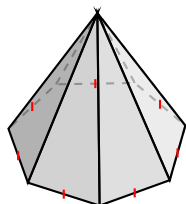
prisme pentagonal



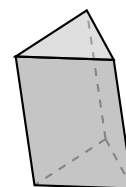
prisme à base carré



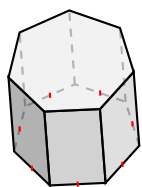
pyramide à base carré



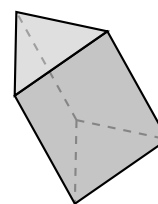
pyramide à base heptagonale



prisme triangulaire



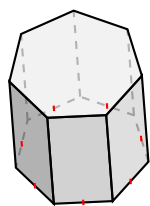
prisme heptagonal



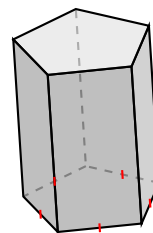
prisme triangulaire

# Identification de Prismes et de Pyramides (C)

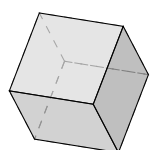
Identifiez chaque figure.



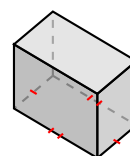
\_\_\_\_\_



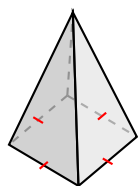
\_\_\_\_\_



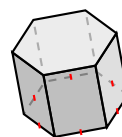
\_\_\_\_\_



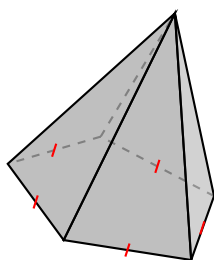
\_\_\_\_\_



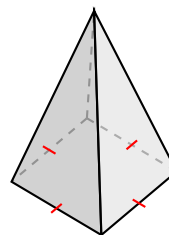
\_\_\_\_\_



\_\_\_\_\_



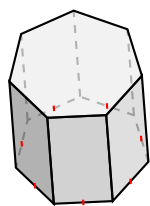
\_\_\_\_\_



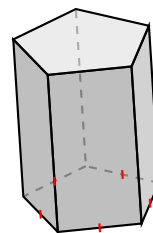
\_\_\_\_\_

# Identification de Prismes et de Pyramides (C) Solutions

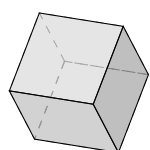
Identifiez chaque figure.



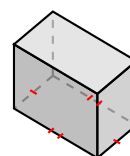
prisme heptagonal



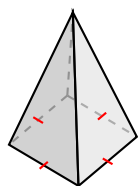
prisme pentagonal



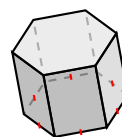
prisme à base carré, cube



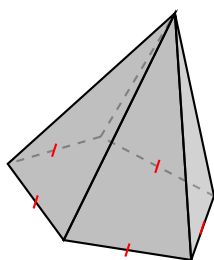
prisme rectangulaire



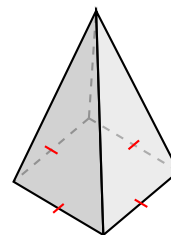
pyramide à base carré



prisme hexagonal



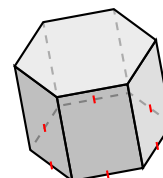
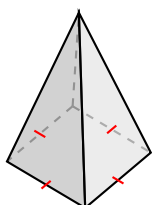
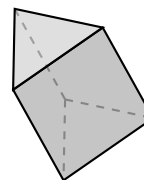
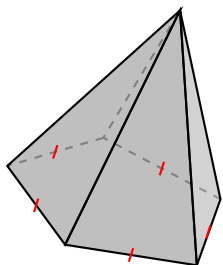
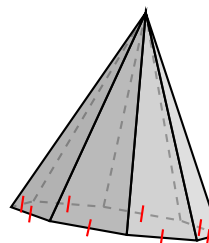
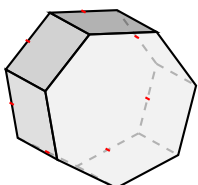
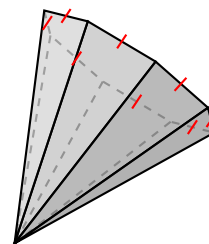
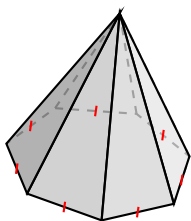
pyramide à base pentagonale



pyramide à base carré

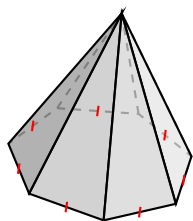
# Identification de Prismes et de Pyramides (D)

Identifiez chaque figure.

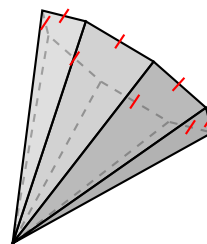


# Identification de Prismes et de Pyramides (D) Solutions

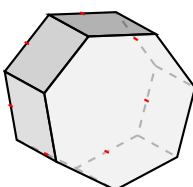
Identifiez chaque figure.



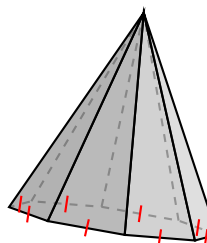
pyramide à base heptagonale



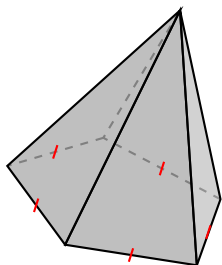
pyramide à base octogonale



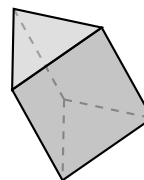
prisme heptagonal



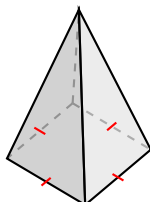
pyramide à base octogonale



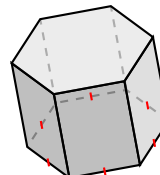
pyramide à base pentagonale



prisme triangulaire



pyramide à base carré

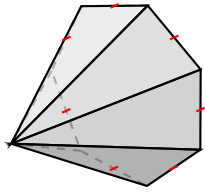


prisme hexagonal

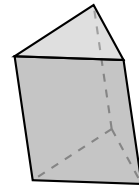


# Identification de Prismes et de Pyramides (E)

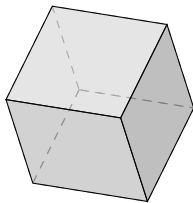
Identifiez chaque figure.



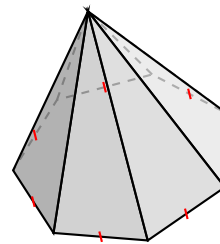
---



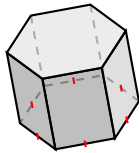
---



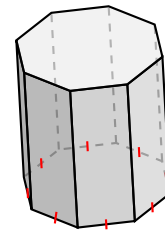
---



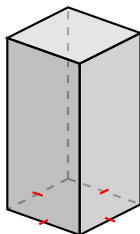
---



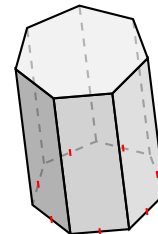
---



---



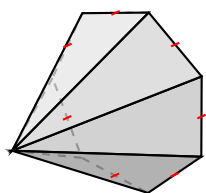
---



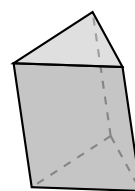
---

# Identification de Prismes et de Pyramides (E) Solutions

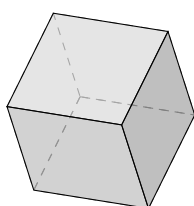
Identifiez chaque figure.



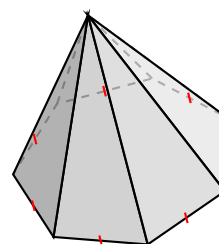
pyramide à base heptagonale



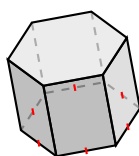
prisme triangulaire



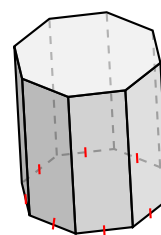
prisme à base carré, cube



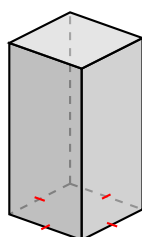
pyramide à base heptagonale



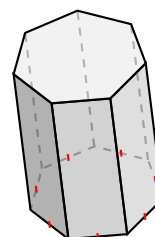
prisme hexagonal



prisme octogonal



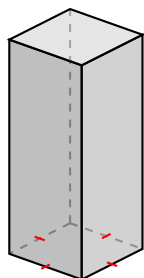
prisme à base carré



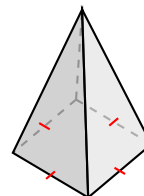
prisme heptagonal

# Identification de Prismes et de Pyramides (F)

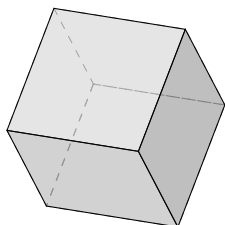
Identifiez chaque figure.



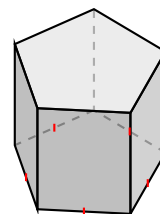
\_\_\_\_\_



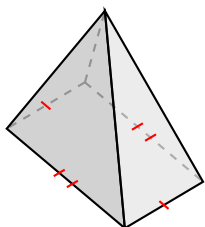
\_\_\_\_\_



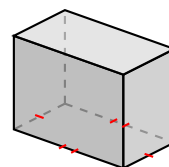
\_\_\_\_\_



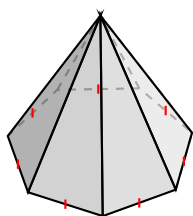
\_\_\_\_\_



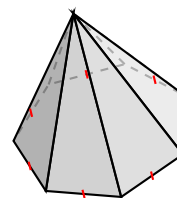
\_\_\_\_\_



\_\_\_\_\_



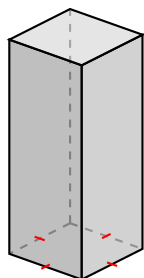
\_\_\_\_\_



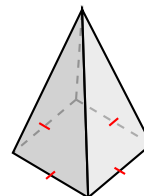
\_\_\_\_\_

# Identification de Prismes et de Pyramides (F) Solutions

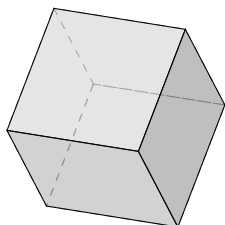
Identifiez chaque figure.



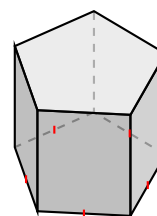
prisme à base carré



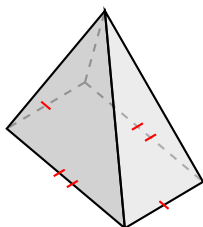
pyramide à base carré



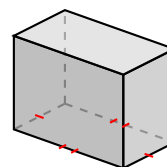
prisme à base carré, cube



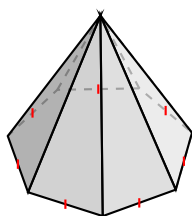
prisme pentagonal



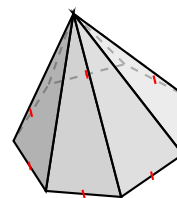
pyramide à base rectangulaire



prisme rectangulaire



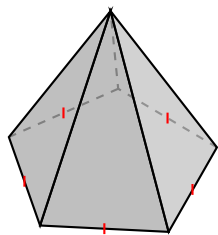
pyramide à base heptagonale



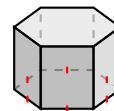
pyramide à base heptagonale

# Identification de Prismes et de Pyramides (G)

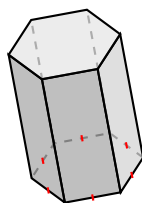
Identifiez chaque figure.



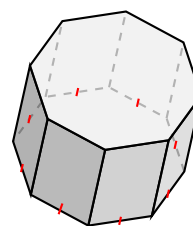
\_\_\_\_\_



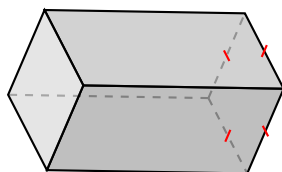
\_\_\_\_\_



\_\_\_\_\_



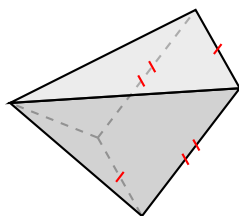
\_\_\_\_\_



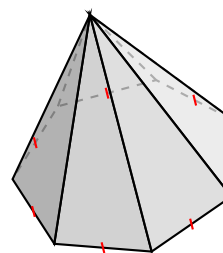
\_\_\_\_\_



\_\_\_\_\_



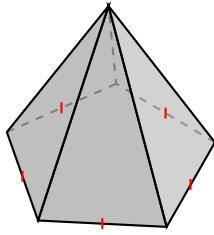
\_\_\_\_\_



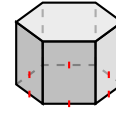
\_\_\_\_\_

# Identification de Prismes et de Pyramides (G) Solutions

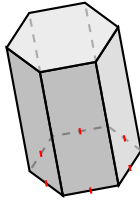
Identifiez chaque figure.



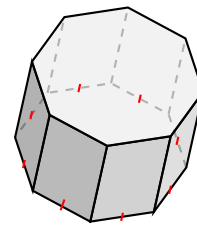
pyramide à base pentagonale



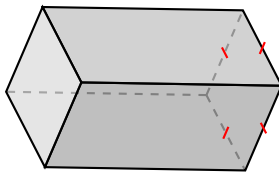
prisme hexagonal



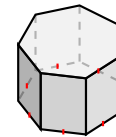
prisme hexagonal



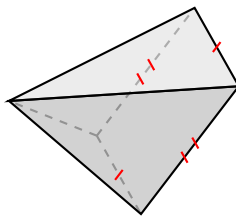
prisme octogonal



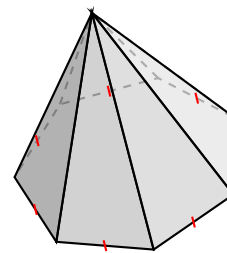
prisme à base carré



prisme heptagonal



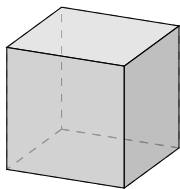
pyramide à base rectangulaire



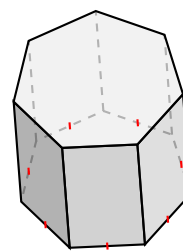
pyramide à base heptagonale

# Identification de Prismes et de Pyramides (H)

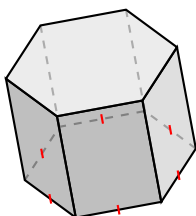
Identifiez chaque figure.



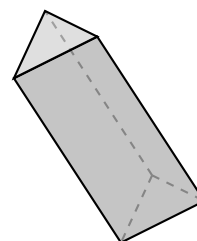
---



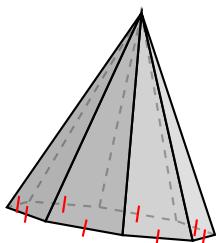
---



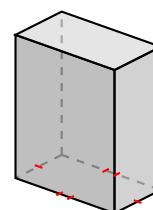
---



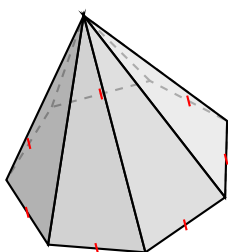
---



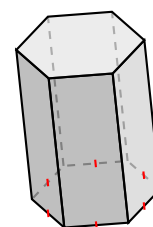
---



---



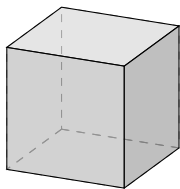
---



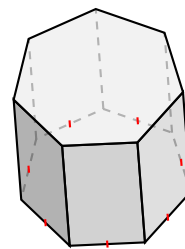
---

# Identification de Prismes et de Pyramides (H) Solutions

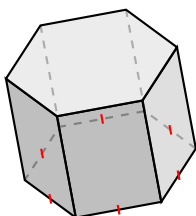
Identifiez chaque figure.



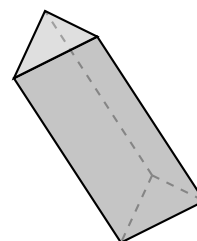
prisme à base carré, cube



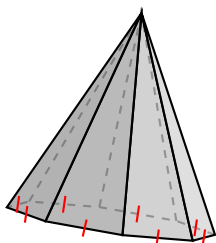
prisme heptagonal



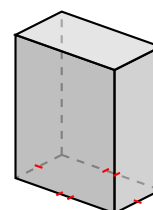
prisme hexagonal



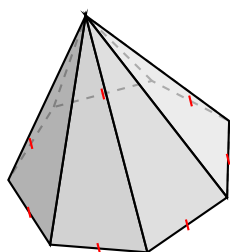
prisme triangulaire



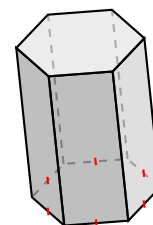
pyramide à base octogonale



prisme rectangulaire



pyramide à base heptagonale

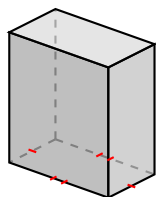


prisme hexagonal

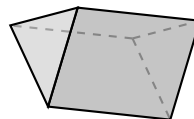


# Identification de Prismes et de Pyramides (I)

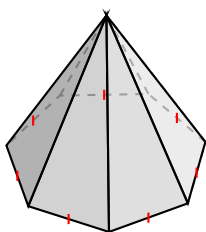
Identifiez chaque figure.



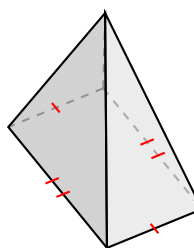
\_\_\_\_\_



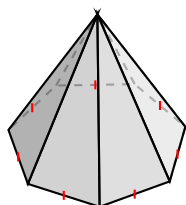
\_\_\_\_\_



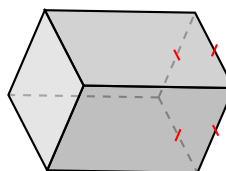
\_\_\_\_\_



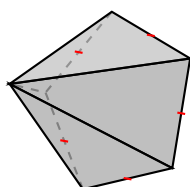
\_\_\_\_\_



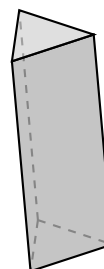
\_\_\_\_\_



\_\_\_\_\_



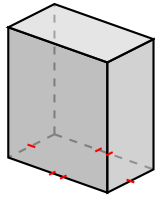
\_\_\_\_\_



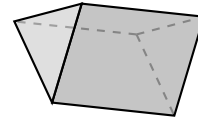
\_\_\_\_\_

# Identification de Prismes et de Pyramides (I) Solutions

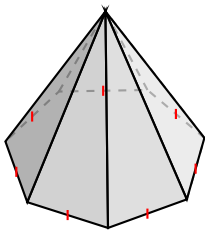
Identifiez chaque figure.



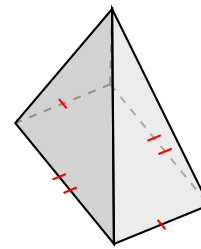
prisme rectangulaire



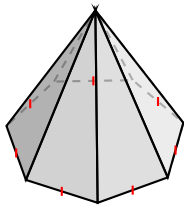
prisme triangulaire



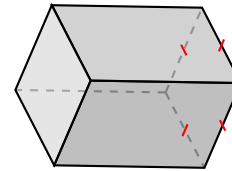
pyramide à base heptagonale



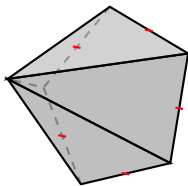
pyramide à base rectangulaire



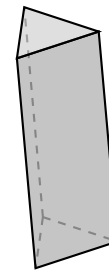
pyramide à base heptagonale



prisme à base carré



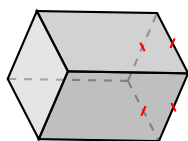
pyramide à base pentagonale



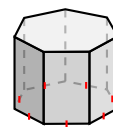
prisme triangulaire

# Identification de Prismes et de Pyramides (J)

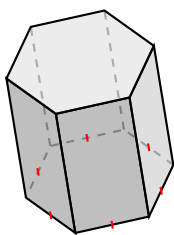
Identifiez chaque figure.



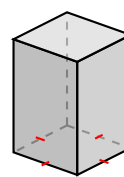
\_\_\_\_\_



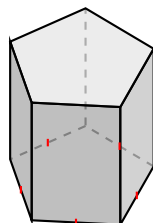
\_\_\_\_\_



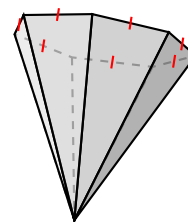
\_\_\_\_\_



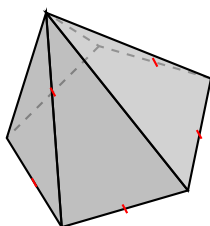
\_\_\_\_\_



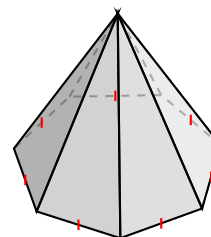
\_\_\_\_\_



\_\_\_\_\_



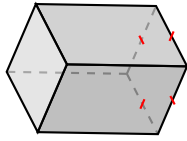
\_\_\_\_\_



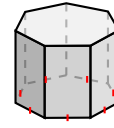
\_\_\_\_\_

# Identification de Prismes et de Pyramides (J) Solutions

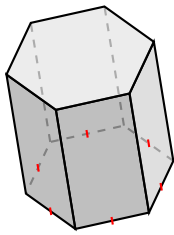
Identifiez chaque figure.



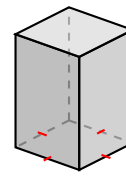
prisme à base carré



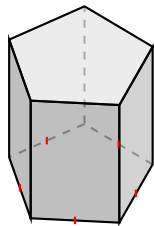
prisme heptagonal



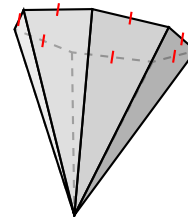
prisme hexagonal



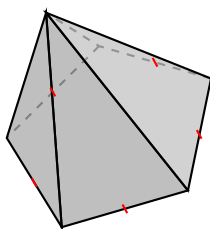
prisme à base carré



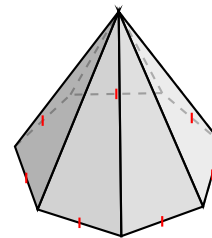
prisme pentagonal



pyramide à base heptagonale



pyramide à base pentagonale



pyramide à base heptagonale