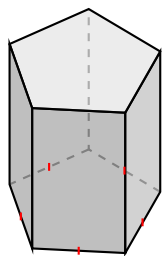
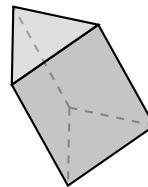


# Identification de Prismes et de Pyramides (A)

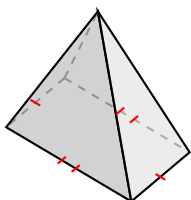
Identifiez chaque figure.



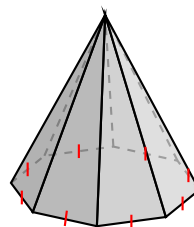
\_\_\_\_\_



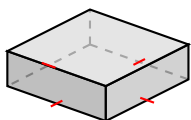
\_\_\_\_\_



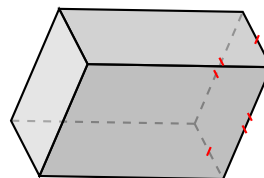
\_\_\_\_\_



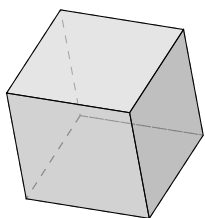
\_\_\_\_\_



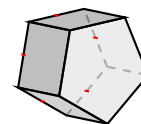
\_\_\_\_\_



\_\_\_\_\_



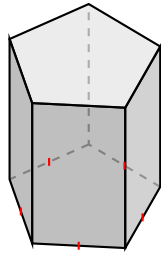
\_\_\_\_\_



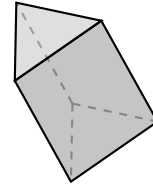
\_\_\_\_\_

# Identification de Prismes et de Pyramides (A) Solutions

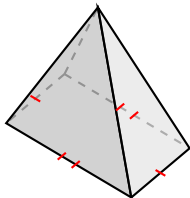
Identifiez chaque figure.



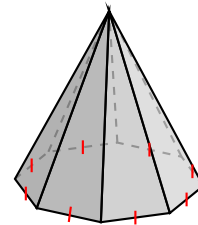
prisme pentagonal



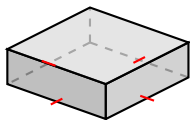
prisme triangulaire



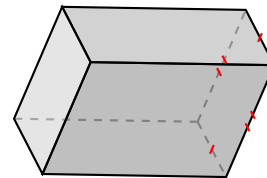
pyramide à base rectangulaire



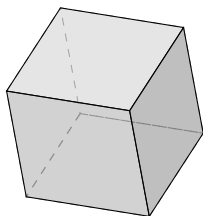
pyramide à base octogonale



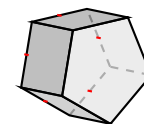
prisme à base carré



prisme rectangulaire



prisme à base carré, cube



prisme pentagonal