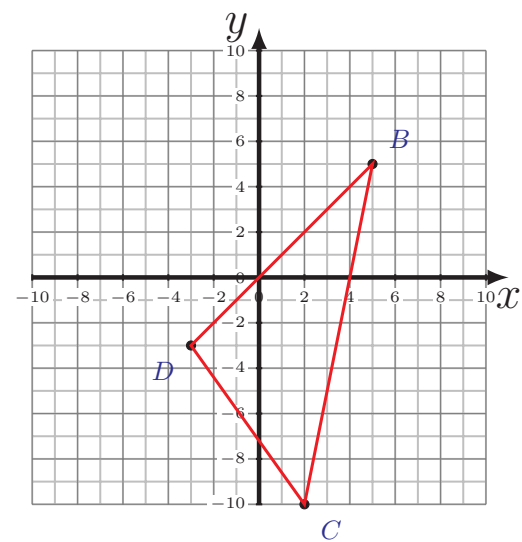
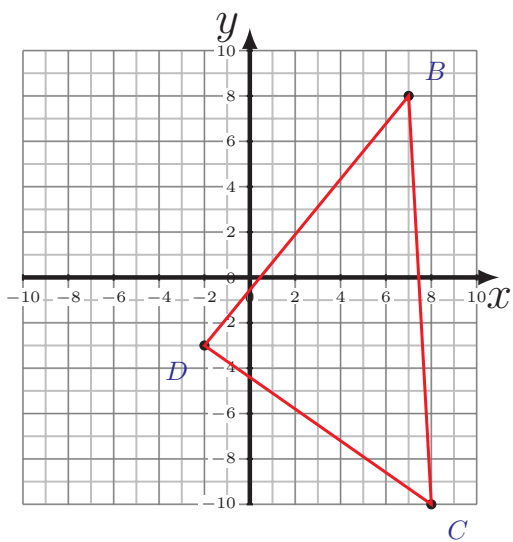
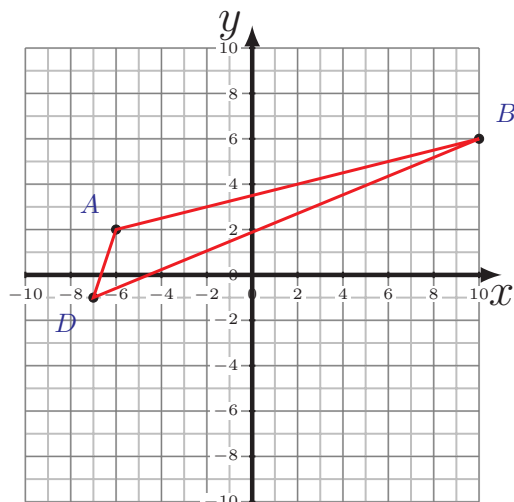
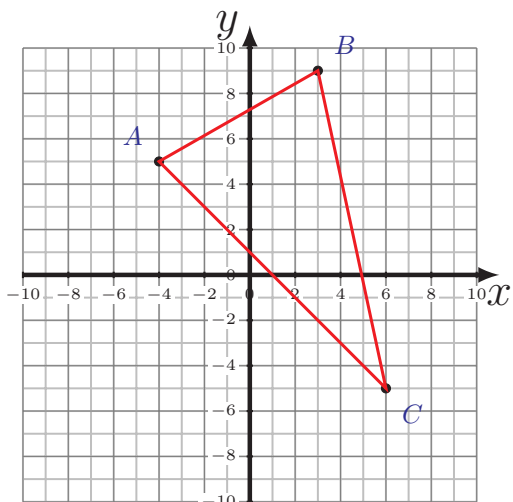


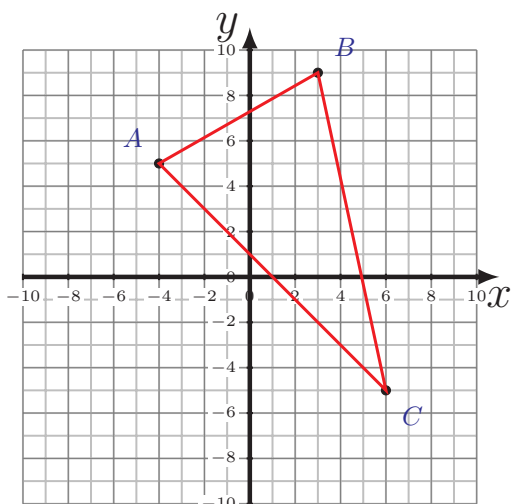
Périmètre et Aire des Triangles (C)

Calculez le périmètre et l'aire de chaque triangle.

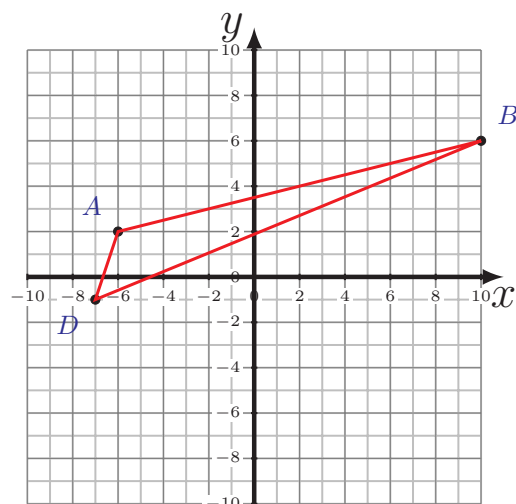


Périmètre et Aire des Triangles (C) Réponses

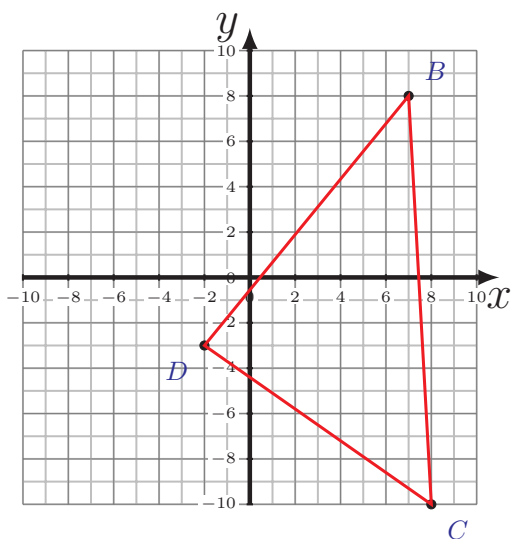
Calculez le périmètre et l'aire de chaque triangle.



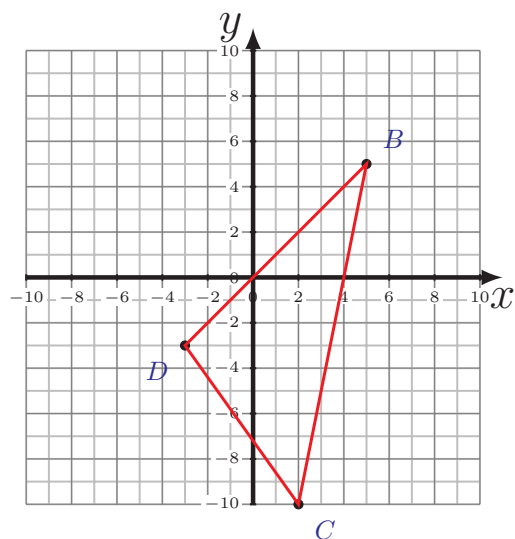
$$\begin{aligned}\overline{AB} &= 8,06 \text{ u} & \overline{BC} &= 14,32 \text{ u} \\ \overline{CA} &= 14,14 \text{ u} \\ P &= 36,52 \text{ u} \\ A &= 55 \text{ u}^2\end{aligned}$$



$$\begin{aligned}\overline{AB} &= 16,49 \text{ u} & \overline{BD} &= 18,38 \text{ u} \\ \overline{DA} &= 3,16 \text{ u} \\ P &= 38,03 \text{ u} \\ A &= 22 \text{ u}^2\end{aligned}$$



$$\begin{aligned}\overline{BC} &= 18,03 \text{ u} \\ \overline{CD} &= 12,21 \text{ u} & \overline{DB} &= 14,21 \text{ u} \\ P &= 44,45 \text{ u} \\ A &= 86,5 \text{ u}^2\end{aligned}$$



$$\begin{aligned}\overline{BC} &= 15,3 \text{ u} \\ \overline{CD} &= 8,6 \text{ u} & \overline{DB} &= 11,31 \text{ u} \\ P &= 35,21 \text{ u} \\ A &= 48 \text{ u}^2\end{aligned}$$