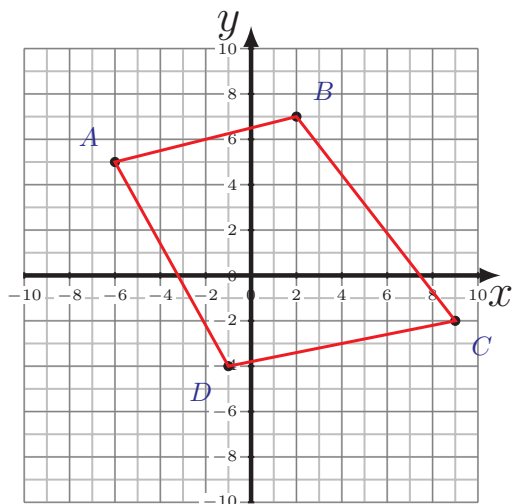
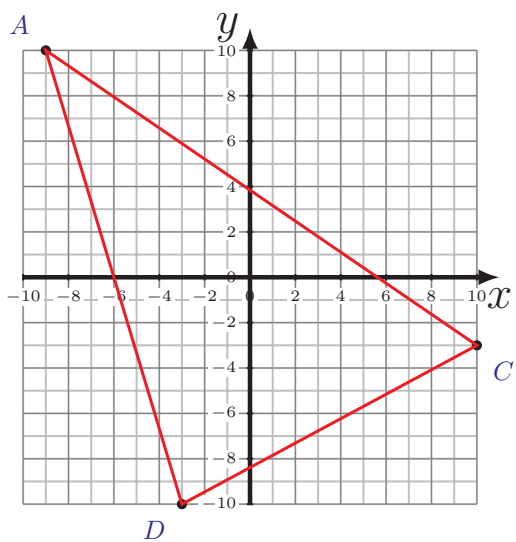
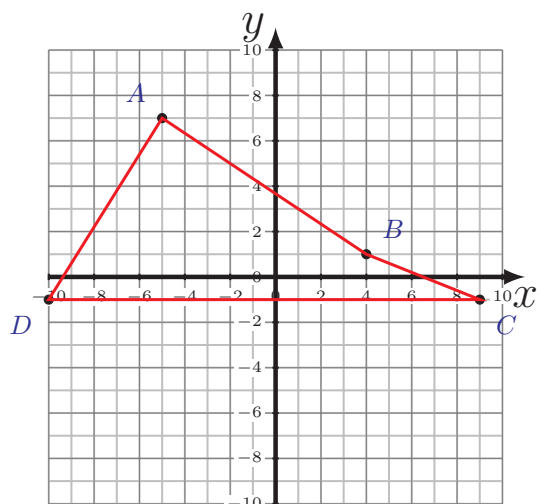
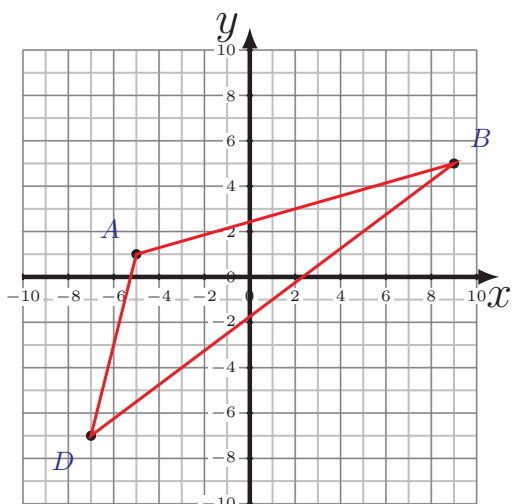


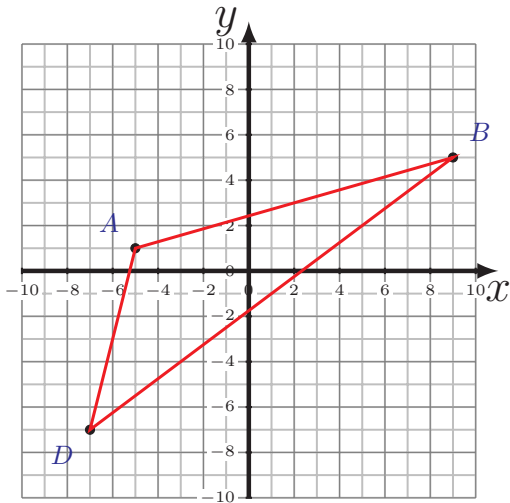
Périmètre et Aire des Polygones (H)

Calculez le périmètre et l'aire de chaque polygone.

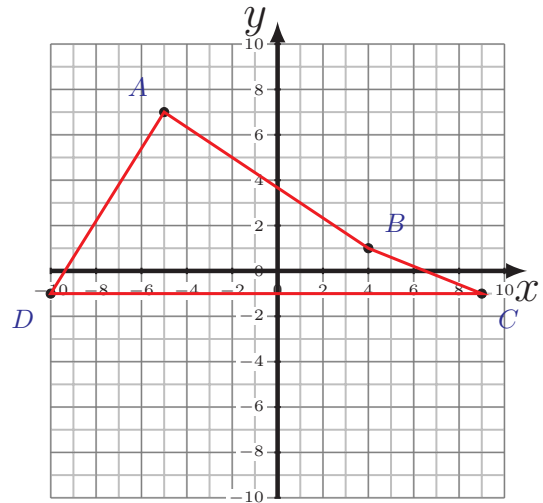


Périmètre et Aire des Polygones (H) Réponses

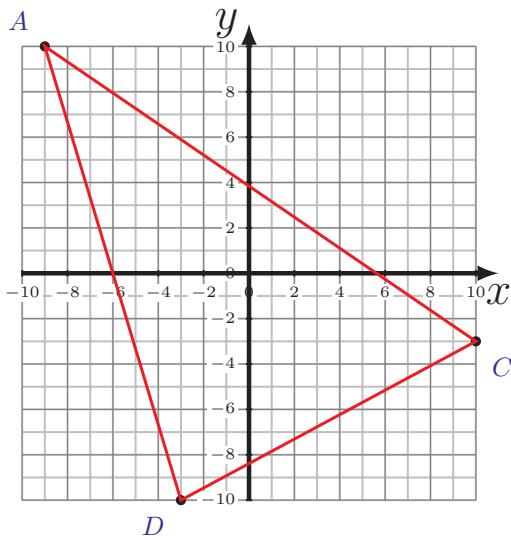
Calculez le périmètre et l'aire de chaque polygone.



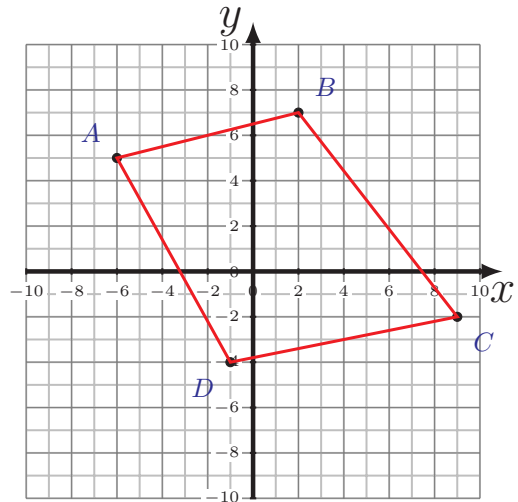
$$\begin{aligned}\overline{AB} &= 14,56 \text{ u} & \overline{BD} &= 20 \text{ u} \\ \overline{DA} &= 8,25 \text{ u} \\ P &= 42,81 \text{ u} \\ A &= 52 \text{ u}^2\end{aligned}$$



$$\begin{aligned}\overline{AB} &= 10,82 \text{ u} & \overline{BC} &= 5,39 \text{ u} \\ \overline{CD} &= 19 \text{ u} & \overline{DA} &= 9,43 \text{ u} \\ P &= 44,64 \text{ u} \\ A &= 70 \text{ u}^2\end{aligned}$$



$$\begin{aligned}\overline{AC} &= 23,02 \text{ u} \\ \overline{CD} &= 14,76 \text{ u} & \overline{DA} &= 20,88 \text{ u} \\ P &= 58,66 \text{ u} \\ A &= 151 \text{ u}^2\end{aligned}$$



$$\begin{aligned}\overline{AB} &= 8,25 \text{ u} & \overline{BC} &= 11,4 \text{ u} \\ \overline{CD} &= 10,2 \text{ u} & \overline{DA} &= 10,3 \text{ u} \\ P &= 40,15 \text{ u} \\ A &= 93 \text{ u}^2\end{aligned}$$