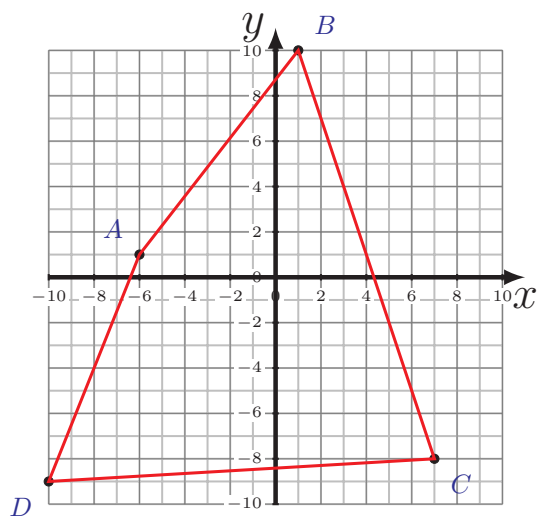
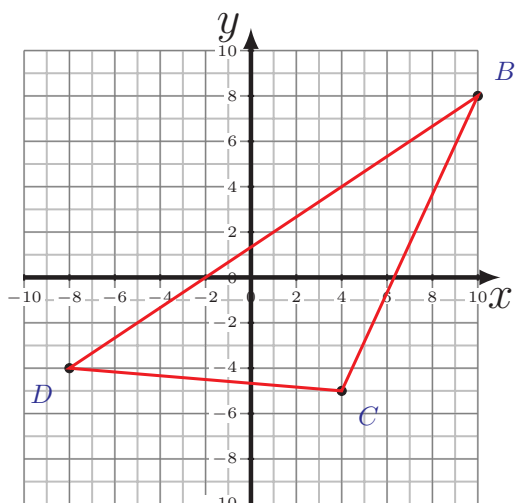
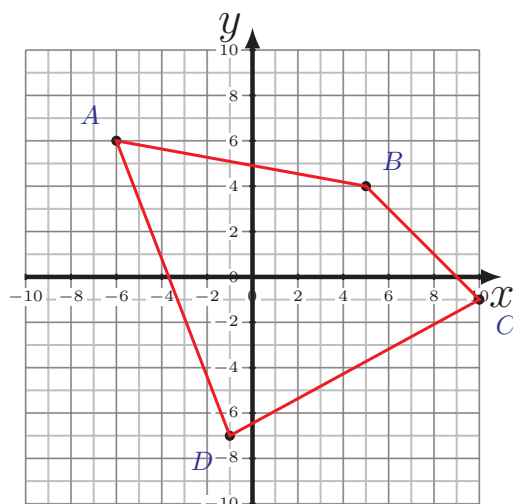
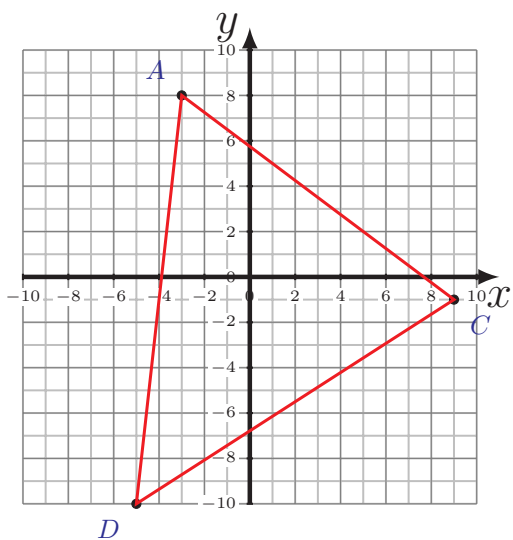


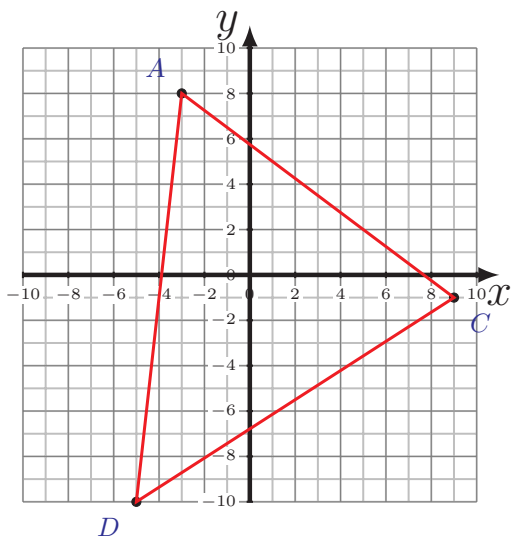
Périmètre et Aire des Polygones (G)

Calculez le périmètre et l'aire de chaque polygone.

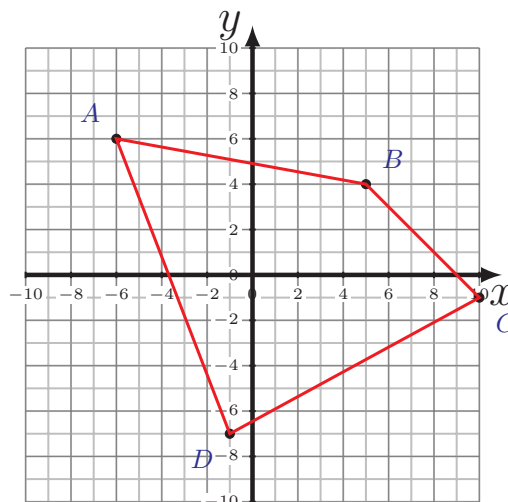


Périmètre et Aire des Polygones (G) Réponses

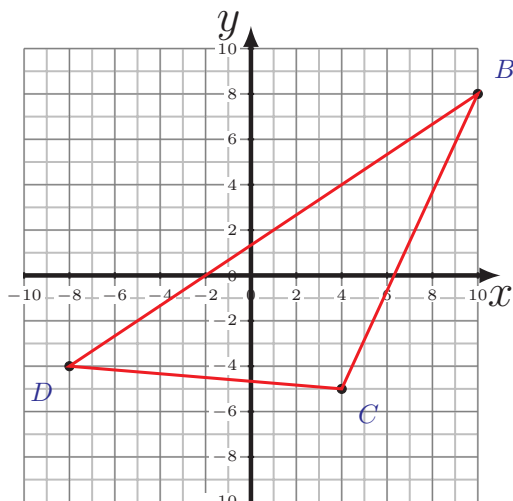
Calculez le périmètre et l'aire de chaque polygone.



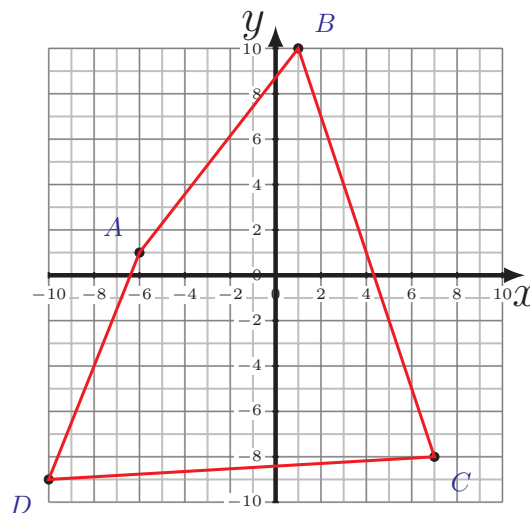
$$\begin{aligned} \overline{AC} &= 15 \text{ u} \\ \overline{CD} &= 16,64 \text{ u} \quad \overline{DA} = 18,11 \text{ u} \\ P &= 49,75 \text{ u} \\ A &= 117 \text{ u}^2 \end{aligned}$$



$$\begin{aligned} \overline{AB} &= 11,18 \text{ u} \quad \overline{BC} = 7,07 \text{ u} \\ \overline{CD} &= 12,53 \text{ u} \quad \overline{DA} = 13,93 \text{ u} \\ P &= 44,71 \text{ u} \\ A &= 109 \text{ u}^2 \end{aligned}$$



$$\begin{aligned} \overline{BC} &= 14,32 \text{ u} \\ \overline{CD} &= 12,04 \text{ u} \quad \overline{DB} = 21,63 \text{ u} \\ P &= 47,99 \text{ u} \\ A &= 81 \text{ u}^2 \end{aligned}$$



$$\begin{aligned} \overline{AB} &= 11,4 \text{ u} \quad \overline{BC} = 18,97 \text{ u} \\ \overline{CD} &= 17,03 \text{ u} \quad \overline{DA} = 10,77 \text{ u} \\ P &= 58,17 \text{ u} \\ A &= 173 \text{ u}^2 \end{aligned}$$