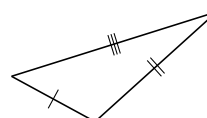
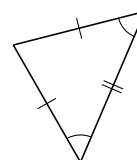
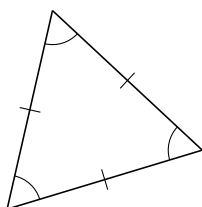
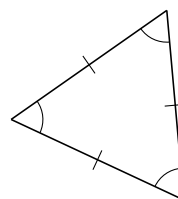
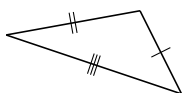
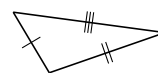
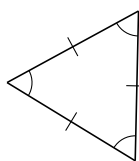
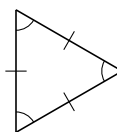
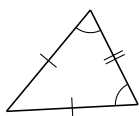


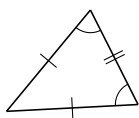
Classification de Triangles (I)

Classifiez chaque triangle à l'aide des mesures de côtés.

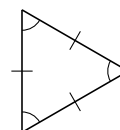


Classification de Triangles (I) Solutions

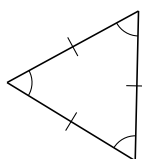
Classifiez chaque triangle à l'aide des mesures de côtés.



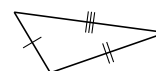
isocèle



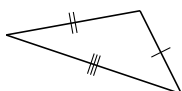
équilatéral



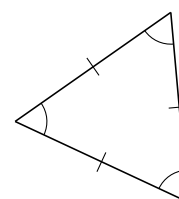
équilatéral



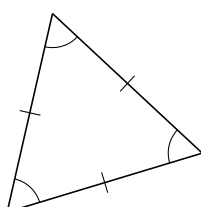
scalène



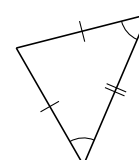
scalène



équilatéral



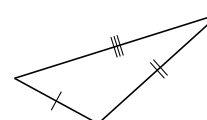
équilatéral



isocèle



scalène



scalène