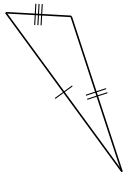
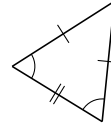
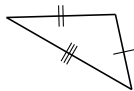


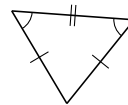
Classification de Triangles (H)

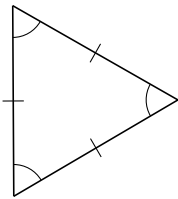
Classifiez chaque triangle à l'aide des mesures de côtés.

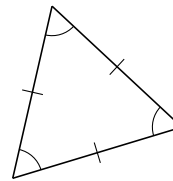


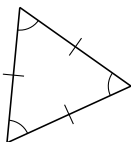


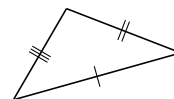


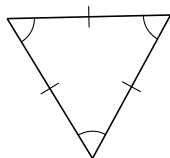


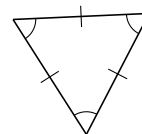






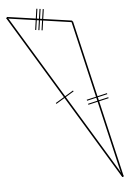




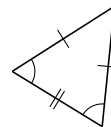


Classification de Triangles (H) Solutions

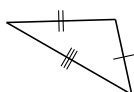
Classifiez chaque triangle à l'aide des mesures de côtés.



scalène



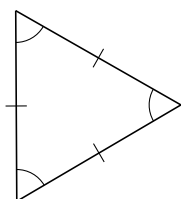
isocèle



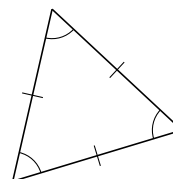
scalène



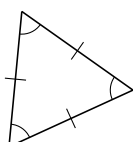
isocèle



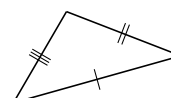
équilatéral



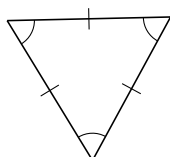
équilatéral



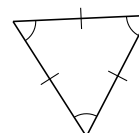
équilatéral



scalène



équilatéral



équilatéral