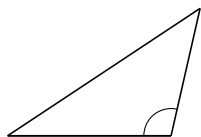
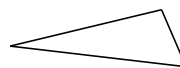


Classification de Triangles (A)

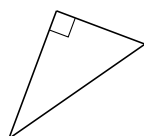
Classifiez chaque triangle à l'aide des mesures d'angles.

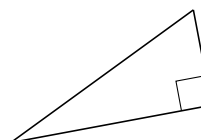






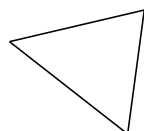


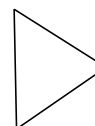






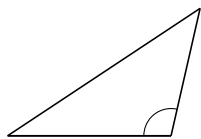




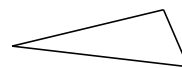


Classification de Triangles (A) Solutions

Classifiez chaque triangle à l'aide des mesures d'angles.



obtus



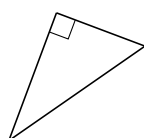
aigu



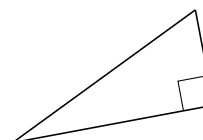
obtus



aigu



droit



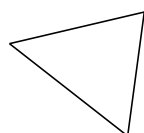
droit



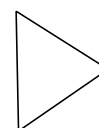
droit



droit



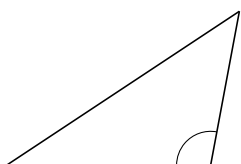
aigu

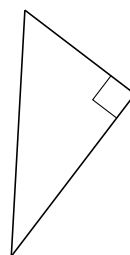


aigu

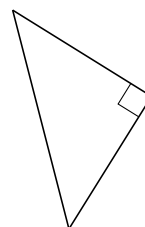
Classification de Triangles (B)

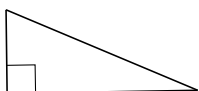
Classifiez chaque triangle à l'aide des mesures d'angles.

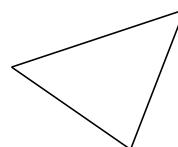


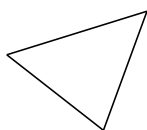




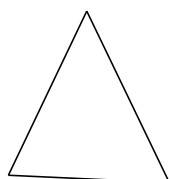








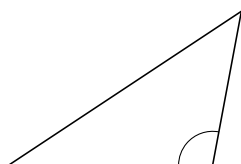




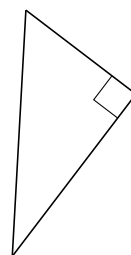


Classification de Triangles (B) Solutions

Classifiez chaque triangle à l'aide des mesures d'angles.



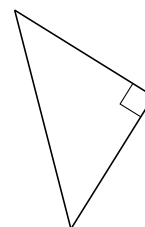
obtus



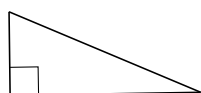
droit



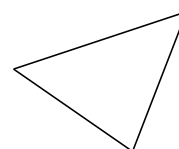
obtus



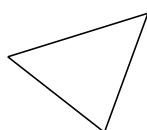
droit



droit



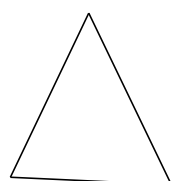
aigu



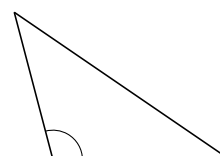
aigu



obtus



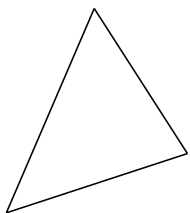
aigu



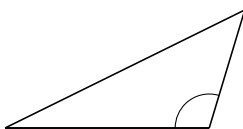
obtus

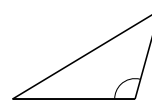
Classification de Triangles (C)

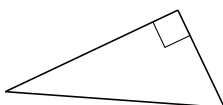
Classifiez chaque triangle à l'aide des mesures d'angles.



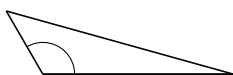


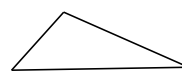


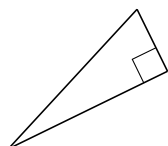


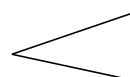






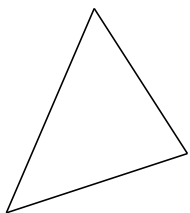






Classification de Triangles (C) Solutions

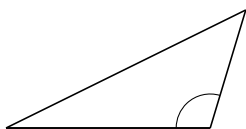
Classifiez chaque triangle à l'aide des mesures d'angles.



aigu



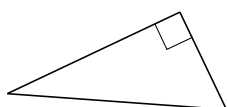
obtus



obtus



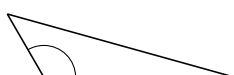
obtus



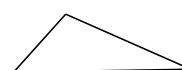
droit



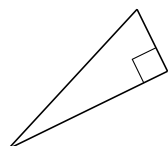
obtus



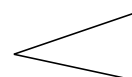
obtus



aigu



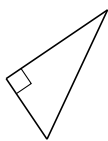
droit

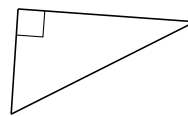


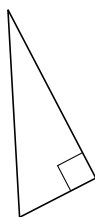
aigu

Classification de Triangles (D)

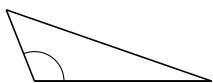
Classifiez chaque triangle à l'aide des mesures d'angles.



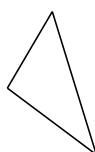


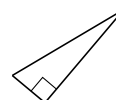


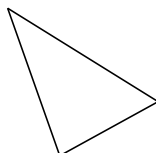


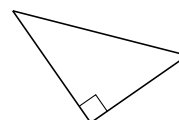






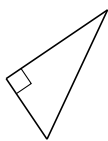




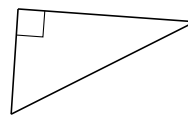


Classification de Triangles (D) Solutions

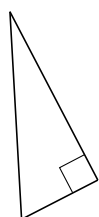
Classifiez chaque triangle à l'aide des mesures d'angles.



droit



droit



droit



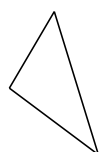
obtus



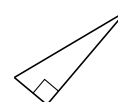
obtus



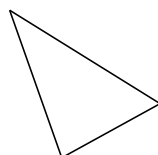
droit



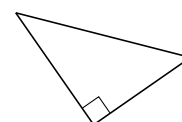
aigu



droit



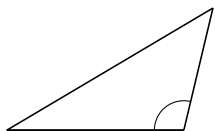
aigu

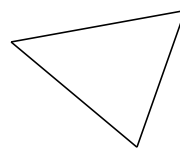


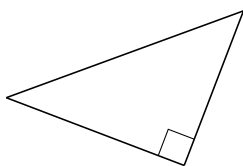
droit

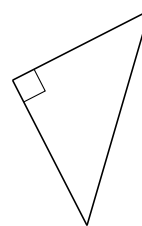
Classification de Triangles (E)

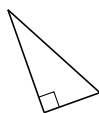
Classifiez chaque triangle à l'aide des mesures d'angles.

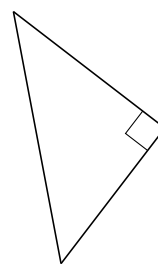


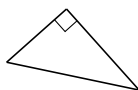




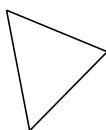


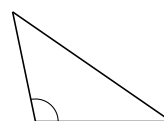






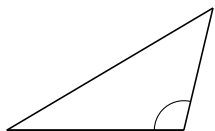




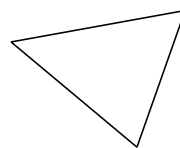


Classification de Triangles (E) Solutions

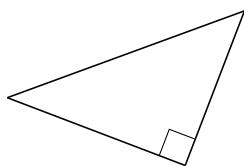
Classifiez chaque triangle à l'aide des mesures d'angles.



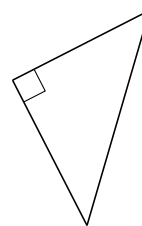
obtus



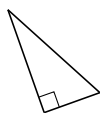
aigu



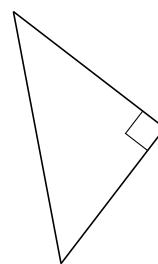
droit



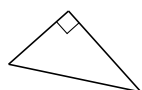
droit



droit




droit



droit



droit




aigu

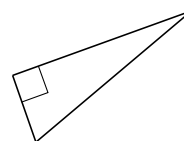


obtus

Classification de Triangles (F)

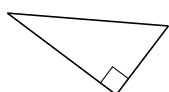
Classifiez chaque triangle à l'aide des mesures d'angles.

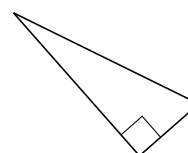


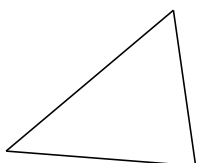


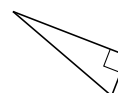


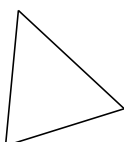


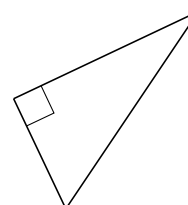











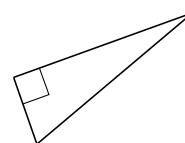


Classification de Triangles (F) Solutions

Classifiez chaque triangle à l'aide des mesures d'angles.



obtus



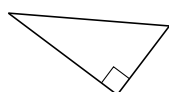
droit



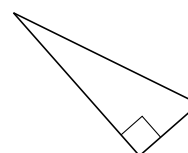
obtus



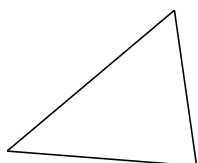
droit



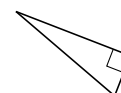
droit



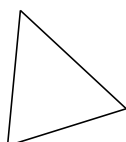
droit



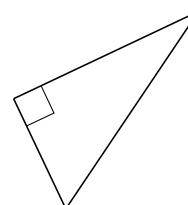
aigu



droit



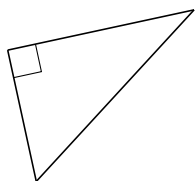
aigu

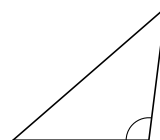


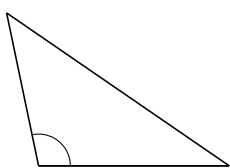
droit

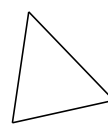
Classification de Triangles (G)

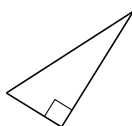
Classifiez chaque triangle à l'aide des mesures d'angles.

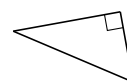


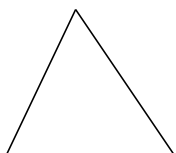


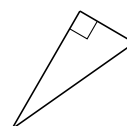


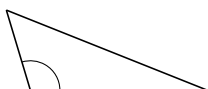








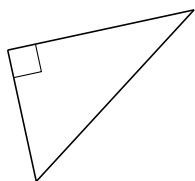




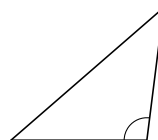


Classification de Triangles (G) Solutions

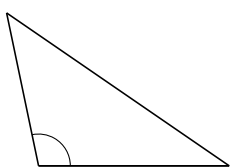
Classifiez chaque triangle à l'aide des mesures d'angles.



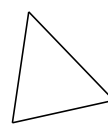
droit



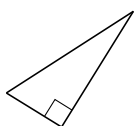
obtus



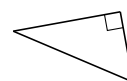
obtus



aigu



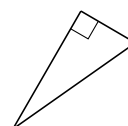
droit



droit



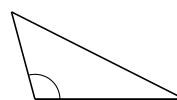
aigu



droit



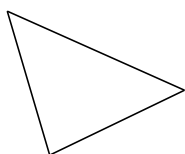
obtus

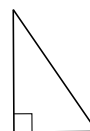


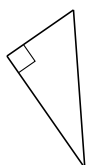
obtus

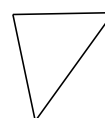
Classification de Triangles (H)

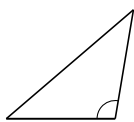
Classifiez chaque triangle à l'aide des mesures d'angles.

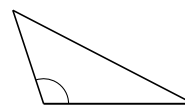


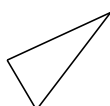




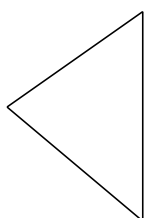








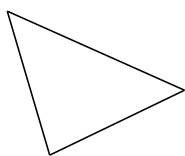




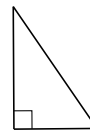


Classification de Triangles (H) Solutions

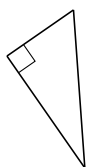
Classifiez chaque triangle à l'aide des mesures d'angles.



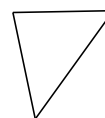
aigu



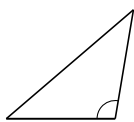
droit



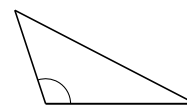
droit



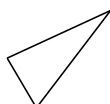
aigu



obtus



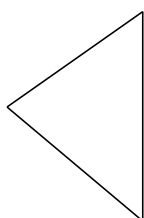
obtus



aigu



obtus



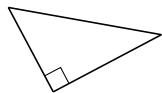
aigu

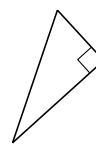


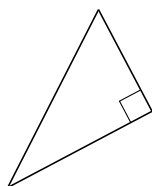
obtus

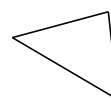
Classification de Triangles (I)

Classifiez chaque triangle à l'aide des mesures d'angles.




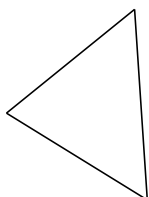


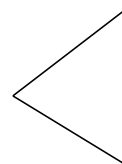


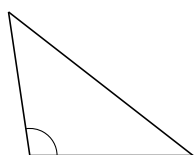








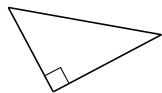




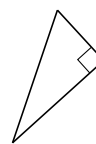


Classification de Triangles (I) Solutions

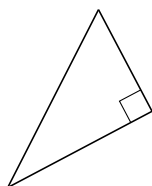
Classifiez chaque triangle à l'aide des mesures d'angles.



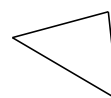
droit



droit




droit



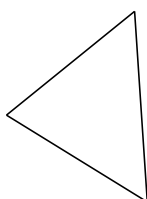
aigu



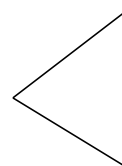
droit



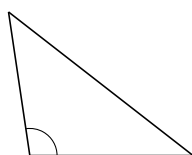
obtus



aigu



aigu



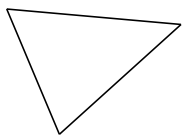
obtus



droit

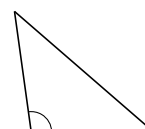
Classification de Triangles (J)

Classifiez chaque triangle à l'aide des mesures d'angles.

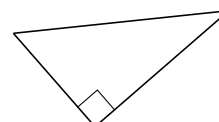


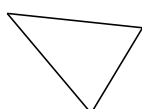




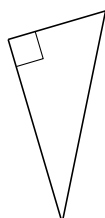








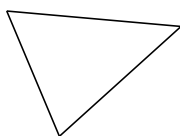






Classification de Triangles (J) Solutions

Classifiez chaque triangle à l'aide des mesures d'angles.



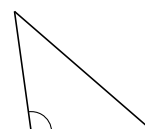
aigu



obtus



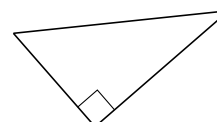
droit



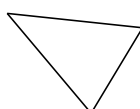
obtus



aigu



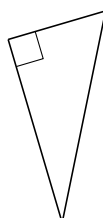
droit



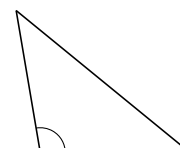
aigu



obtus



droit



obtus