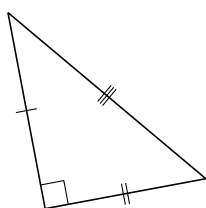
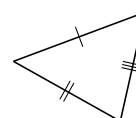
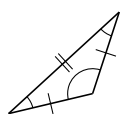
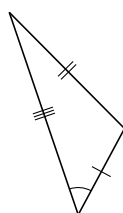
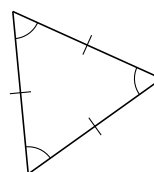
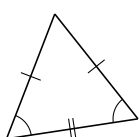
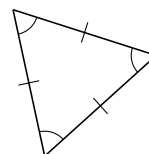
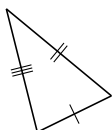


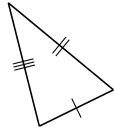
Classification de Triangles (F)

Classifiez chaque triangle à l'aide des mesures d'angles et de côtés.

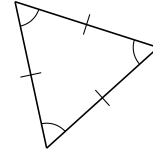


Classification de Triangles (F) Solutions

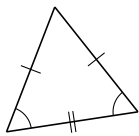
Classifiez chaque triangle à l'aide des mesures d'angles et de côtés.



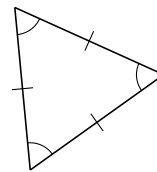
scalène, aigu



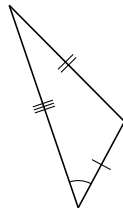
équilatéral, aigu



isocèle, aigu



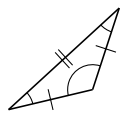
équilatéral, aigu



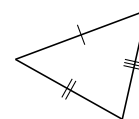
scalène, obtus



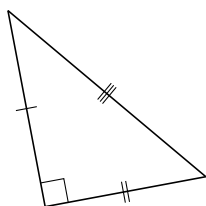
isocèle, obtus



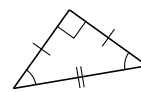
isocèle, obtus



scalène, aigu



scalène, droit



isocèle, droit