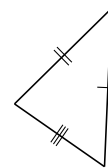
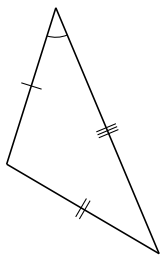
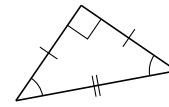
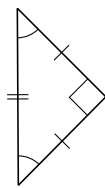
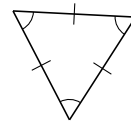
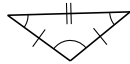
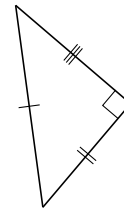
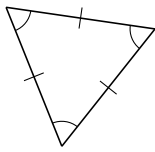
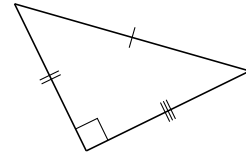
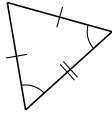


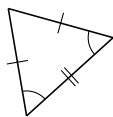
Classification de Triangles (A)

Classifiez chaque triangle à l'aide des mesures d'angles et de côtés.

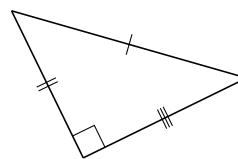


Classification de Triangles (A) Solutions

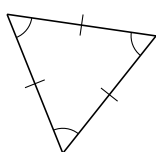
Classifiez chaque triangle à l'aide des mesures d'angles et de côtés.



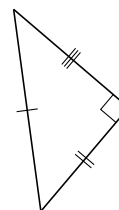
isocèle, aigu



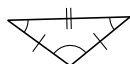
scalène, droit



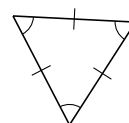
équilatéral, aigu



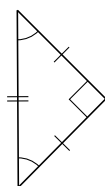
scalène, droit



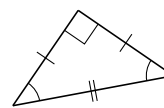
isocèle, obtus



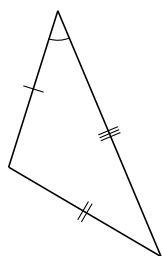
équilatéral, aigu



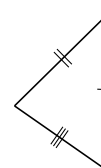
isocèle, droit



isocèle, droit



scalène, obtus



scalène, aigu