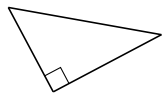
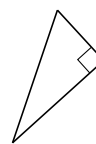


# Classification de Triangles (I)

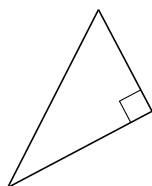
Classifiez chaque triangle à l'aide des mesures d'angles.



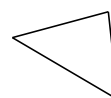
\_\_\_\_\_



\_\_\_\_\_




\_\_\_\_\_



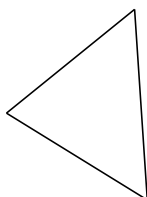
\_\_\_\_\_



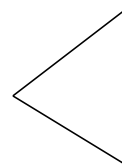
\_\_\_\_\_



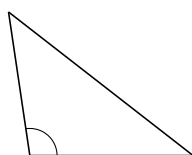
\_\_\_\_\_



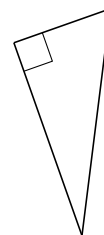
\_\_\_\_\_



\_\_\_\_\_



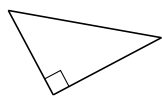
\_\_\_\_\_



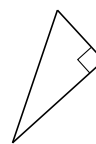
\_\_\_\_\_

# Classification de Triangles (I) Solutions

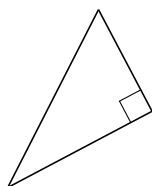
Classifiez chaque triangle à l'aide des mesures d'angles.



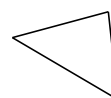
droit



droit




droit



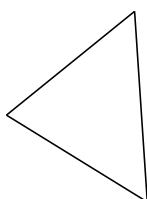
aigu



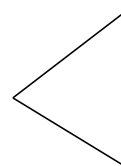
droit



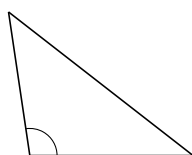
obtus



aigu



aigu



obtus



droit