
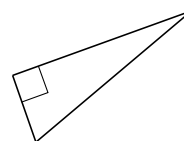


Classification de Triangles (F)

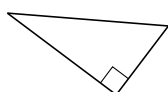
Classifiez chaque triangle à l'aide des mesures d'angles.

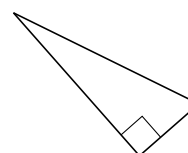


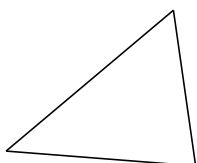


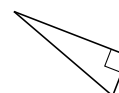


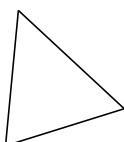


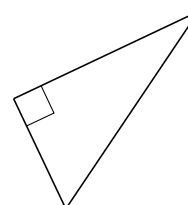











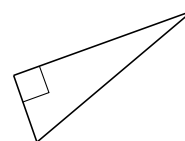


Classification de Triangles (F) Solutions

Classifiez chaque triangle à l'aide des mesures d'angles.



obtus



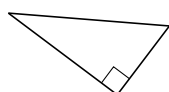
droit



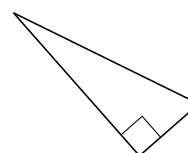
obtus



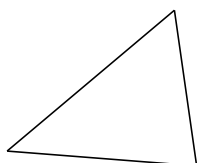
droit



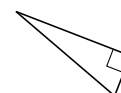
droit



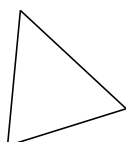
droit



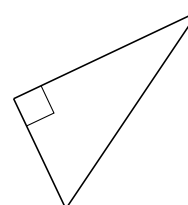
aigu



droit



aigu



droit