

# Classification de Quadrilatères (A)

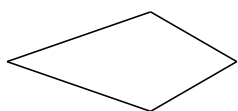
Identifiez chaque quadrilatère.



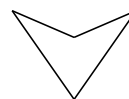
\_\_\_\_\_




\_\_\_\_\_



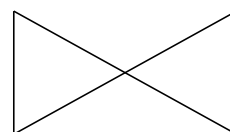
\_\_\_\_\_



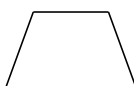
\_\_\_\_\_



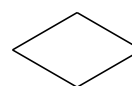
\_\_\_\_\_



\_\_\_\_\_



\_\_\_\_\_



\_\_\_\_\_




\_\_\_\_\_



\_\_\_\_\_

# Classification de Quadrilatères (A) Solutions

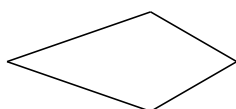
Identifiez chaque quadrilatère.



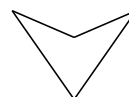
rectangle



fléchette



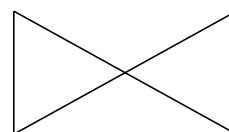
cerf-volant



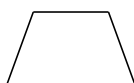
fléchette



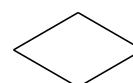
parallélogramme



noeud papillon



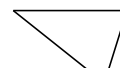
trapèze isocèle



losange



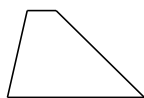
trapèze rectangle



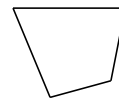
trapèze

## Classification de Quadrilatères (B)

Identifiez chaque quadrilatère.



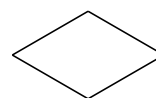
\_\_\_\_\_




\_\_\_\_\_



\_\_\_\_\_



\_\_\_\_\_



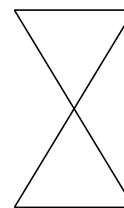
\_\_\_\_\_



\_\_\_\_\_



\_\_\_\_\_



\_\_\_\_\_



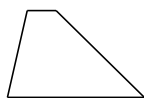
\_\_\_\_\_



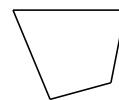
\_\_\_\_\_

# Classification de Quadrilatères (B) Solutions

Identifiez chaque quadrilatère.



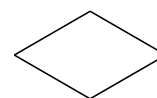
trapèze




quadrilatère



trapèze rectangle




losange



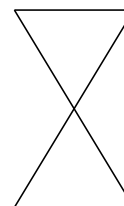
rectangle



fléchette



parallélogramme



noeud papillon



rectangle



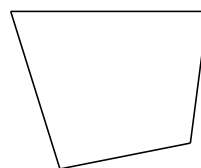
trapèze isocèle

# Classification de Quadrilatères (C)

Identifiez chaque quadrilatère.



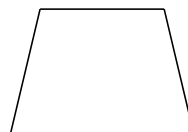
\_\_\_\_\_



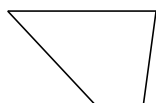
\_\_\_\_\_



\_\_\_\_\_



\_\_\_\_\_



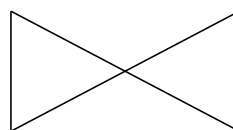
\_\_\_\_\_



\_\_\_\_\_



\_\_\_\_\_



\_\_\_\_\_



\_\_\_\_\_



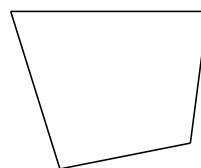
\_\_\_\_\_

# Classification de Quadrilatères (C) Solutions

Identifiez chaque quadrilatère.



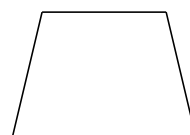
fléchette



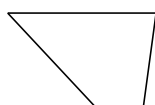
quadrilatère



fléchette



trapèze isocèle



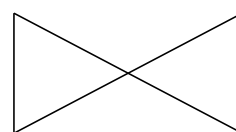
trapèze




cerf-volant



trapèze rectangle



noeud papillon



rectangle



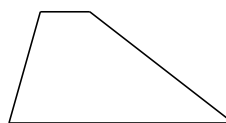
carré

# Classification de Quadrilatères (D)

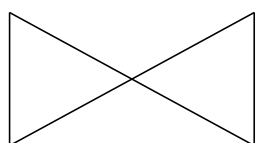
Identifiez chaque quadrilatère.



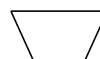
\_\_\_\_\_



\_\_\_\_\_



\_\_\_\_\_



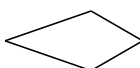
\_\_\_\_\_



\_\_\_\_\_



\_\_\_\_\_



\_\_\_\_\_



\_\_\_\_\_



\_\_\_\_\_



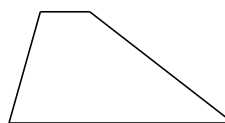
\_\_\_\_\_

# Classification de Quadrilatères (D) Solutions

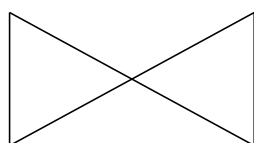
Identifiez chaque quadrilatère.



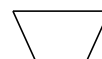
carré



trapèze



noeud papillon



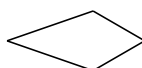
trapèze isocèle



trapèze



rectangle



cerf-volant



losange



fléchette

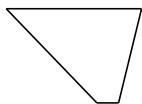


trapèze rectangle



# Classification de Quadrilatères (E)

Identifiez chaque quadrilatère.



\_\_\_\_\_



\_\_\_\_\_



\_\_\_\_\_



\_\_\_\_\_




\_\_\_\_\_



\_\_\_\_\_



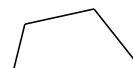
\_\_\_\_\_



\_\_\_\_\_



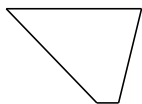
\_\_\_\_\_



\_\_\_\_\_

# Classification de Quadrilatères (E) Solutions

Identifiez chaque quadrilatère.



trapèze



fléchette



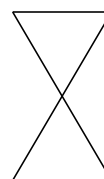
carré



cerf-volant




losange



noeud papillon



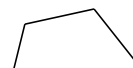
rectangle



trapèze rectangle



quadrilatère



quadrilatère

# Classification de Quadrilatères (F)


Identifiez chaque quadrilatère.



\_\_\_\_\_



\_\_\_\_\_



\_\_\_\_\_



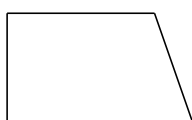
\_\_\_\_\_



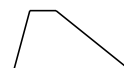
\_\_\_\_\_




\_\_\_\_\_



\_\_\_\_\_



\_\_\_\_\_



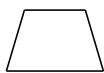
\_\_\_\_\_



\_\_\_\_\_

# Classification de Quadrilatères (F) Solutions


Identifiez chaque quadrilatère.



trapèze isocèle



cerf-volant



rectangle



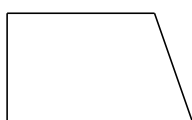
fléchette



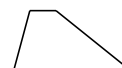
noeud papillon




losange



trapèze rectangle



trapèze



carré



fléchette

# Classification de Quadrilatères (G)

Identifiez chaque quadrilatère.



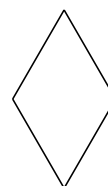
\_\_\_\_\_



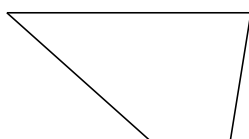
\_\_\_\_\_



\_\_\_\_\_



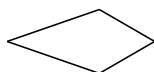
\_\_\_\_\_



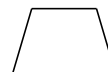
\_\_\_\_\_



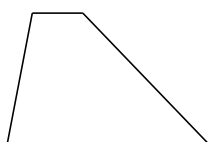
\_\_\_\_\_



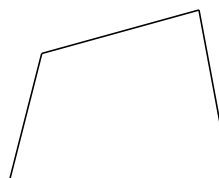
\_\_\_\_\_



\_\_\_\_\_



\_\_\_\_\_




\_\_\_\_\_

# Classification de Quadrilatères (G) Solutions

Identifiez chaque quadrilatère.



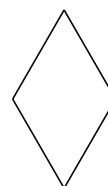
parallélogramme



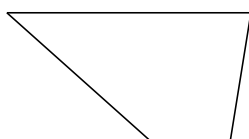
carré



noeud papillon



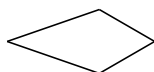
losange



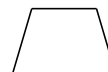
trapèze



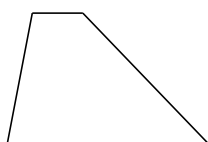
rectangle



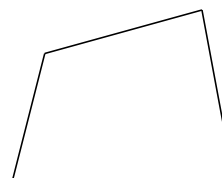
cerf-volant



trapèze isocèle



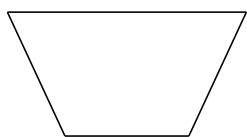
trapèze



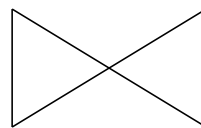
quadrilatère

# Classification de Quadrilatères (H)


Identifiez chaque quadrilatère.



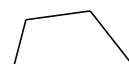
\_\_\_\_\_



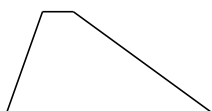
\_\_\_\_\_



\_\_\_\_\_




\_\_\_\_\_



\_\_\_\_\_



\_\_\_\_\_



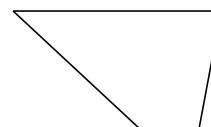
\_\_\_\_\_



\_\_\_\_\_



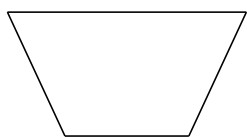
\_\_\_\_\_



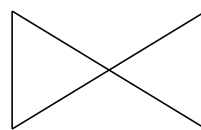
\_\_\_\_\_

# Classification de Quadrilatères (H) Solutions

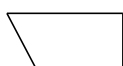
Identifiez chaque quadrilatère.



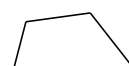
trapèze isocèle



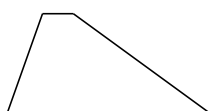
noeud papillon




trapèze rectangle




quadrilatère



trapèze



rectangle



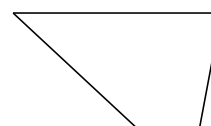
carré



cerf-volant



fléchette

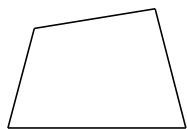


trapèze

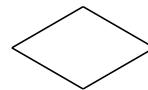


# Classification de Quadrilatères (I)

Identifiez chaque quadrilatère.



\_\_\_\_\_



\_\_\_\_\_



\_\_\_\_\_



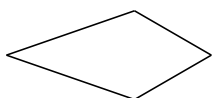
\_\_\_\_\_




\_\_\_\_\_



\_\_\_\_\_



\_\_\_\_\_



\_\_\_\_\_



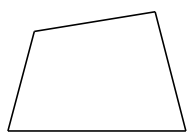
\_\_\_\_\_



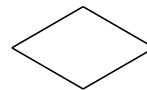
\_\_\_\_\_

# Classification de Quadrilatères (I) Solutions

Identifiez chaque quadrilatère.



quadrilatère



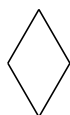
losange



trapèze rectangle



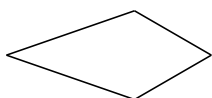
parallélogramme




losange



trapèze



cerf-volant



carré



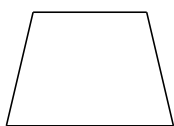
fléchette



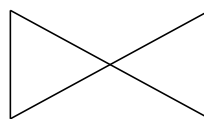
rectangle

# Classification de Quadrilatères (J)

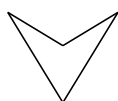
Identifiez chaque quadrilatère.



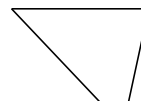
\_\_\_\_\_




\_\_\_\_\_



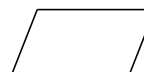
\_\_\_\_\_



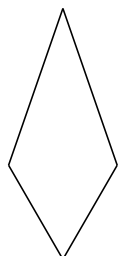
\_\_\_\_\_



\_\_\_\_\_



\_\_\_\_\_



\_\_\_\_\_



\_\_\_\_\_



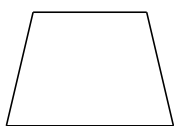
\_\_\_\_\_



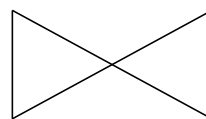
\_\_\_\_\_

# Classification de Quadrilatères (J) Solutions

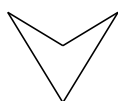
Identifiez chaque quadrilatère.



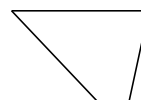
trapeze isocèle




noeud papillon



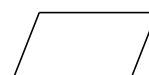
fléchette



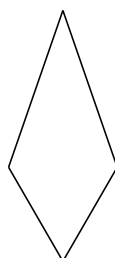
trapeze



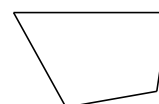
carré



parallélogramme



cerf-volant



quadrilatère



trapeze rectangle



carré